

Social Science - I

Std IX

ACADEMIC YEAR 2017-18 REVISED Model Question Paper of Social Science I (C.W.S.N.)

NAME OF THE TEXTBOOK – SOCIAL SCIENCE

- India and the Contemporary World – I
- Democratic Politics

TEXTBOOK IN HISTORY & POLITICAL SCIENCE FOR CLASS IX

CONTENTS:

Marks Distribution

HISTORY

40 marks

POLITICAL SCIENCE

25 marks

Chapter wise marking system

History

1. The French Revolution	8
2. Socialism in Europe and the Russian Revolution	8
3. Nazism and the Rise of Hitler	8
4. Forest Society and Colonialism	8
5. History and Sport: The Story of Cricket	<u>8</u>
	40

Political Science

1. Democracy in the Contemporary world	3
2. What is Democracy?	5
3. Constitutional Design	4
4. Electoral Politics	5
5. Working of institutions	4
6. Democratic Rights	<u>4</u>
	25

Deleted chapters

1. Pastoralists in the Modern World

2. Peasants and Farmers
3. Clothing: A Social History

ALLOTMENT OF MARKS - History/Political Science[C.W.S.N.]

HISTORY THEORY/PRACTICAL QUESTION PAPER MAX. THEORY MARKS - 65

PRACTICAL MARKS -15 (Both Map work and flowchart)

INTERNAL ASSESSMENT :- ASSIGNMENT/PROJECT MARKS – 20 mks
TOTAL MARKS:- 240

Format of Question Paper – Social Science I

No. of hours: 2 ^{1/2}

Std IX [C.W.S.N]

No. of Questions: 8

Marks: 65

Weightage of marks

Objective – 15 ^{1/2}

SA – 24 ^{1/2}

LA – 25

Theory marks: - 65

Knowledge – 60%

Understanding – 25%

Skill – 15%

HISTORY/ POLITICAL SCIENCE

Std IX

[C.W.S.N]

Model Question Paper

Mks: - 65

I. A. Under each statement three alternatives (A, B,C) are given. Select the most appropriate alternative and write the capital letter against the numerical. [2]

1) The Bastille prison stood for the despotic power of the _____.

A. people

B. King

C. enemy

2) The peasants in France were included as the _____.

A. First Estate

B. Second Estate

C. Third Estate

Ans. i) ____

Ans.ii) ____

I. B. Answer the following questions given below.

[4]



1. How did the Jacobins get its name?


2. Who were included in the Jacobin Club?



3. What activities did Napoleon Bonaparte carry out as soon as he became Emperor of France?

I.C. Give reasons for the following.

[2]



1. The people in France attacked the Bastille prison.

i) _____

ii) _____


II. A. Match the following items in column B with those in column A. Write only alphabet number in column C. [1 1/2]

<u>A</u>	<u>B</u>	<u>C</u>
i) Robert Owen	a) Communism	i) _____
ii) Vladimir Lenin	b) Bolshevik group	ii) _____
iii) Karl Marx	c) New Harmony in Indiana	iii) _____

II. B. Answer the following in one word to two sentences each.

[3 1/2]

]



1. Who tried to overthrow capitalism and the rule of private property?

_____.

2. What were the demands placed by the workers?

i) _____

ii) _____

_____.

II.C. Give reasons for the following.

[3]

1. Many factories were established in Russia in the 1890's.

i) _____

ii) _____

2. Why did some workers in Russia form associations?

_____.

III. A. Under each statement three alternatives (A, B, C) are given. Select the most appropriate alternative and write the capital letter against the numerical. [2]

1) The German Worker's Party was known as the _____.

A. Nazi Party

B. Fascist Party

C. Democratic Party

2. What could make children iron hearted, strong and muscular according to Hitler?

A. Boxing

B. Running

C. Exercise

Ans.(1.) _____

Ans (2) _____

III. B. Observe the picture and answer the following.

[2 ^{1/2}]



1. At what age the boys had to join the Nazi youth organization?

_____.

2. What was the process of Nazi Schooling?

_____.

3. What was the Nazi ideology?

_____.

III. C. Answer the following in 1-2 sentences each.

[3 ^{1/2}]




1. What was Hitler's new style of politics?

- i) _____
- ii) _____
- _____

2. What role did he play in the First World War?

IV. A. Observe the picture carefully.

[2]




Name the following

i) The disappearance of forests.

i) The process of cutting down of trees and burning them to clear the forest for a new harvest.

IV. B. Answer the following in 1 -2 sentences each.

[3]



1. Name some nomadic or forest communities from India.


2. What were the effects of the restrictions imposed on grazing and hunting by the British government?

i) _____

ii) _____

IV. C. Give reasons.

[3]




1. Why did the peasants increase the boundaries of cultivation?

2. Why did the colonial government give vast areas of land to the European planters at cheap rates in India?

V. A. Observe the pictures carefully

[2]



Name the following

1) Two first Indian communities which started to play cricket in India.

2) Wood out of which the cricket bat is made.

V. B. Answer the following in 1 -2 sentences each.

[3]


1. Which games became the international games played all over the world?

2. On what principle was the cricket in colonial India organized?

3. What created a global market for cricket?

V. C. Give reasons.

[3]



1. Why did the Parsis build their own gymkhana to play cricket in?

2. The British did not consider colonial India as a nation.

VI. A. Under each statement three alternatives (A, B,C) are given. Select the most appropriate alternative and write the capital letter against the numerical. [2]



1. How many total members are there in the Security Council?

A. Five

B. Ten

C. Fifteen

2. When did the United States of America adopt a democratic constitution?

A. 1776

B. 1787

C. 1789

i) _____

ii) _____

VI. B. Name the following.

[3]

1. A form of a government in which the rulers are elected by the people.

2. The country which holds elections after every six years to elect its President.

3. The first woman to be a Defence Minister in Latin America.

VI. C. Answer the following in 1 -2 sentences each.

[3]

1. Name the five permanent countries of the Security Council.

2. Write any two features of a democracy.

- i) _____

- ii) _____

VII. A. Match the following items in column B with those in column A. Write only alphabet number in column C. [2]

A

- i) Motilal Nehru
ii) B. R. Ambedkar
iii) Rajendra Prasad
iv) Sarojini Naidu

B

- a) President of the Constituent Assembly
b) Member of the Constituent Assembly
c) Chairman of the Drafting Committee
d) Prepared a Constitution for India in 1928

C

- i) _____
ii) _____
iii) _____
iv) _____

VII. B. Answer the following in one word to two sentences each. [4]

1. What is the main purpose of an election?

2. State any two qualifications for a candidate to contest the elections.

- i) _____

ii) _____

3. Who appoints the Chief Election Commissioner?

VII.C. Give 1 - 2 reasons for the following.

[3]

1. Why was Nelson Mandela imprisoned for 28 years?

i) _____

2. Why is the election campaign important in a democracy?

i) _____

ii) _____

VIII. A. Under each statement three alternatives (A, B, C) are given. Select the most appropriate alternative and write the capital letter against the numerical. [2]

1. The First Prime Minister of India was _____.

A. Jawaharlal Nehru

B. Indira Gandhi

C. Rajiv Gandhi

2. A bill passed in the Parliament becomes a law after the assent of the _____.

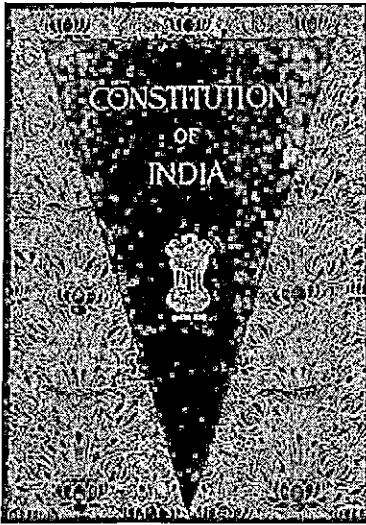
A. Prime Minister

B. President

C. Vice President

VIII. B. Name the following.

[3]



1. The highest court in India.

_____.

2. The other name for Parliament at the state level.

_____.

3. Any one constitutional right which is not fundamental right.

_____.

VIII.C. Give one reason for the following.

[3]

1. Why is freedom of speech and expression essential for an individual?

i) _____
_____.

2. The Constitution of India specifies the cultural and educational rights of minorities.

i) _____
_____.

3. Why is the Prime Minister in India not directly elected by the people?

i) _____
_____.

Suggested Assignments /Projects (Any one)

Topics:-

- 1) Electoral system in Goa
- 2) Rights of the citizens in the Indian Constitution

Note:- Teacher is free to suggest any other assignment /project or even accept any suggested topic by the student related to the syllabus.

- a) Assignment should not exceed 300 -350 words accompanied by pictures.
- b) Assignment should be handwritten
- c) Assignment should be written on only one side of the paper
- d) Assignment should be written on a foolscap paper


The Criteria for evaluation

- | | |
|----------------------|-------|
| a) Content | 5mks |
| b) Relevant pictures | 4 mks |
| c) Creativity | 6 mks |

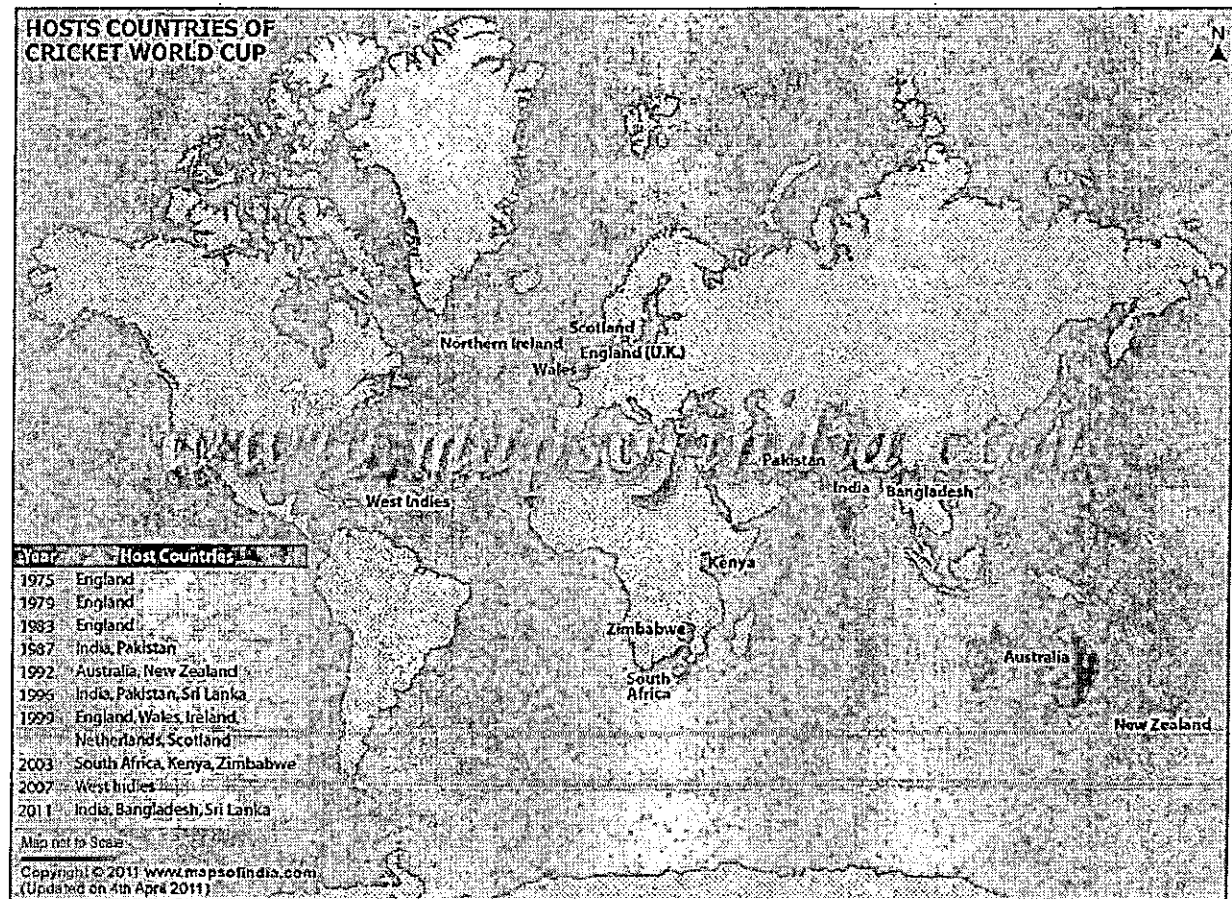
PRACTICALS

1. **Map Work** :- outline World map (any one of the topics)
 - i) -Mark on the World map the different countries which take part in World Cup Cricket Match. State the countries of the world. The students can be given the names of all these countries. [India, New Zealand, Australia, England, South Africa, Pakistan, Sri Lanka and West Indies – [all countries marked on the map]
 - ii) -Mark on the World map, the different countries which have the democratic form of a government.[India, USA, South Africa, Pakistan, Germany, Switzerland, Australia]
 - iii) -Mark 10 states on the outline map of India having largest forest cover.Map given below

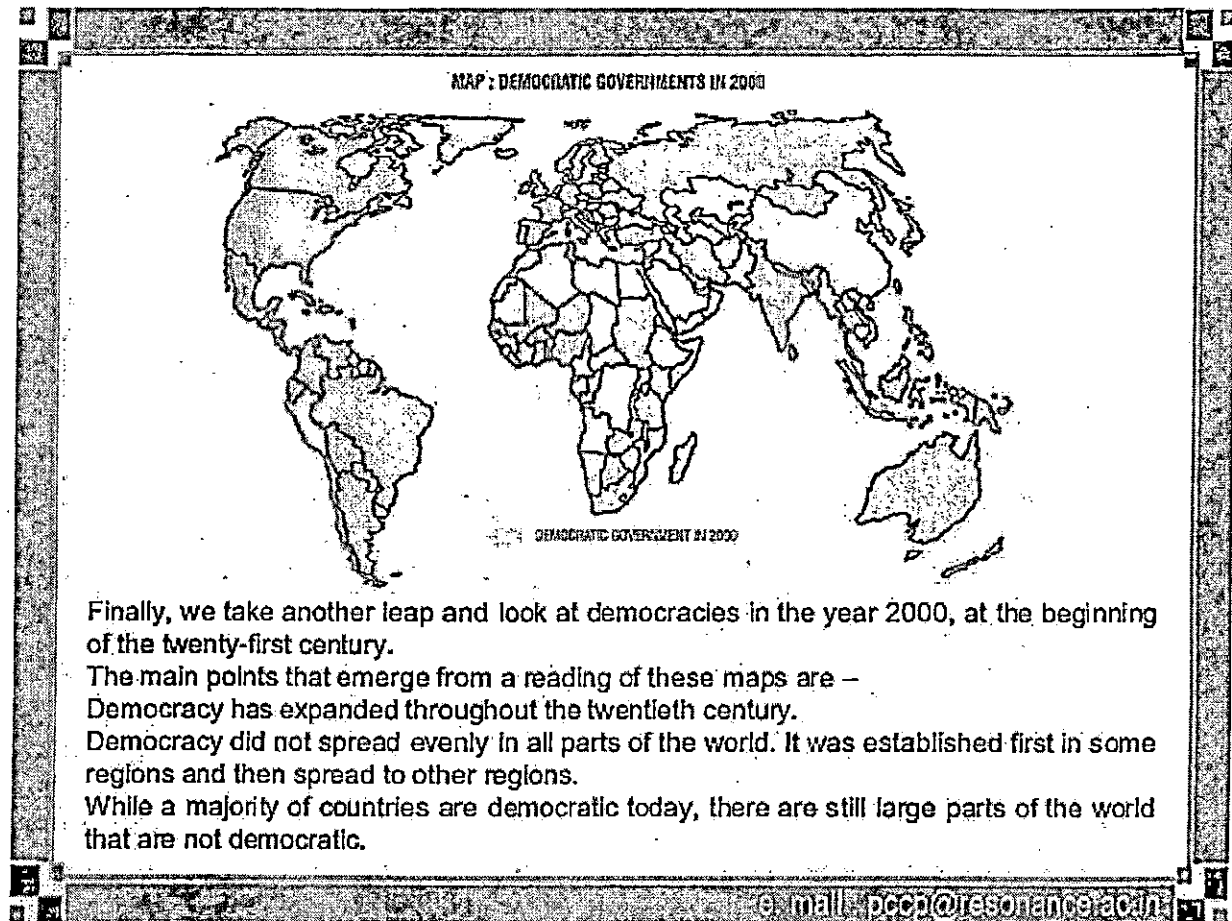
1. A)



B).

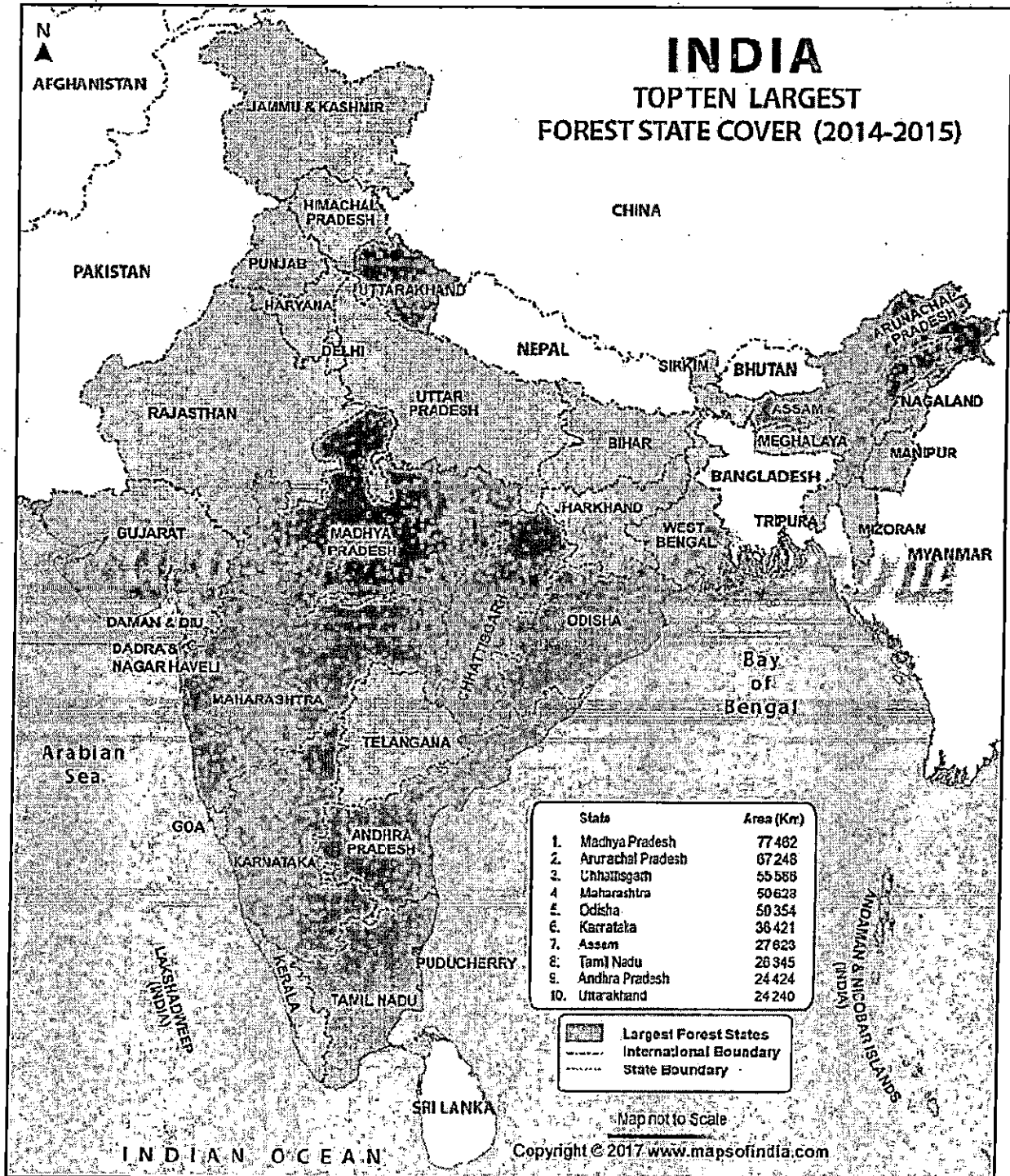


2).



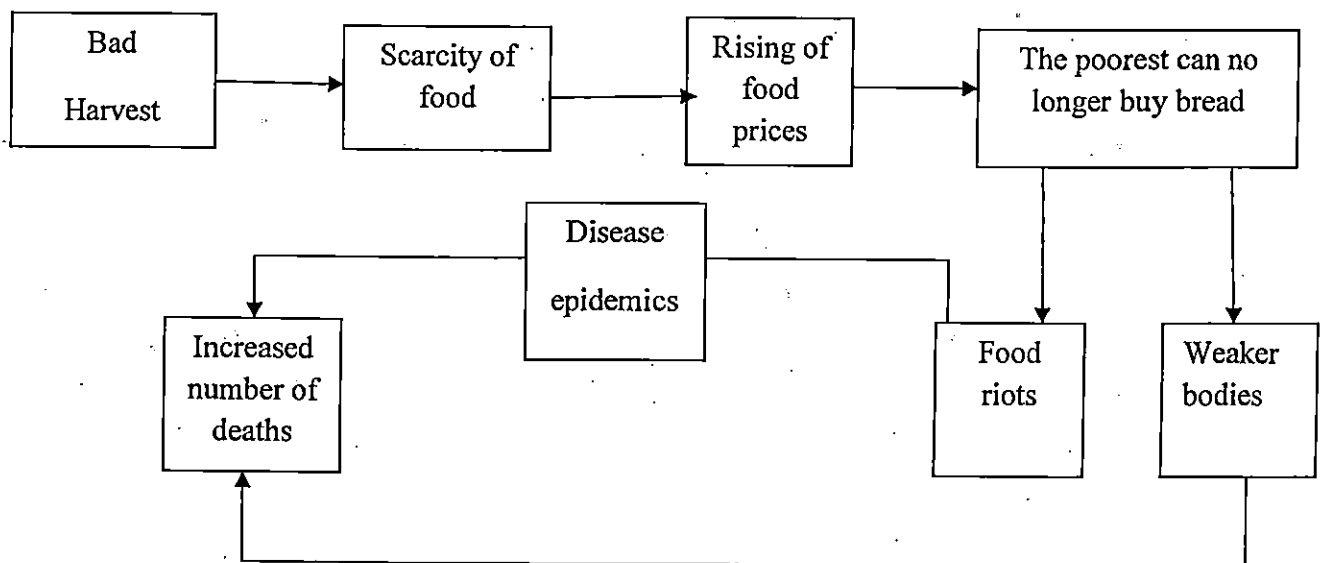
1. INDIA
2. USA
3. UK
4. FRANCE
5. GERMANY
6. PAKISTAN
7. SOUTH AFRICA
8. SWEDEN
9. AUSTRALIA
10. SWITZERLAND
11. INDONESIA
12. PHILLIPINES
13. BANGLADESH

3).

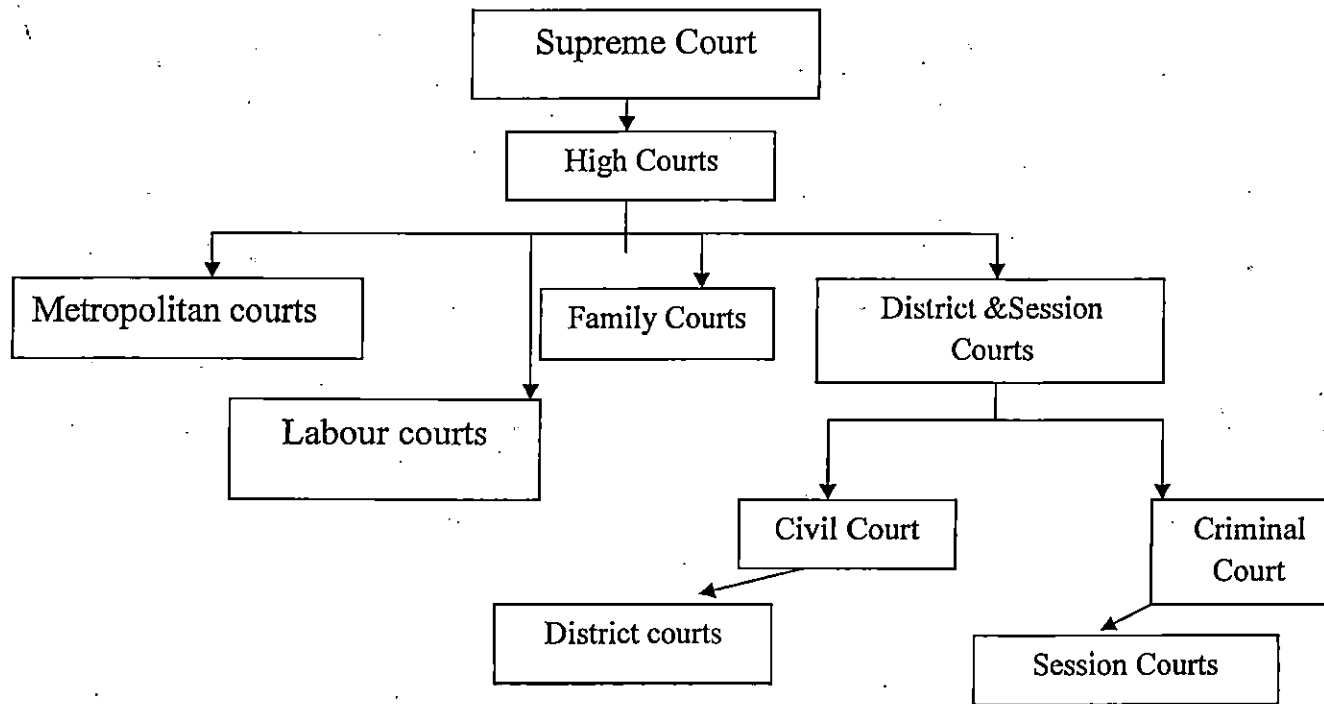


1. Flowcharts

1. How a Subsistence Crisis Happens



2. Hierarchy of Courts of India - A Flow diagram



3. Political System of India

