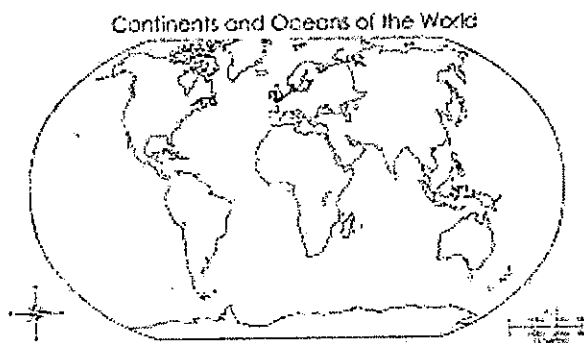


**GEOGRAPHY & ECONOMICS****MODEL PAPER****CWSN****STD IX**

Marks 65

1. A.1) With reference to the given figure, answer the following questions:

(2)



a) In which hemisphere is India located?

b) Name the continent to which India belongs.

B. Match the neighbors of column A with their location in column B:

(2)

Column A

- (1) Maldives  
(2) Sri Lanka

Column B

- a. Bay of Bengal  
b. Arabian Sea  
c. Indian Ocean

Column C

1.  
2.

C. Name:

(2)

1) Any two merchandise (things) that were taken from India to different countries.

D. Choose the correct alternative and write below. (2)

1) The Indian idea of the \_\_\_\_\_ reached many parts of the world.

a) Ramayan            b) Greek sculpture            c) passes.

2) The architectural styles of \_\_\_\_\_ and minarets came from the west.

a) Domes            b) numerals            c) Panchtantra

E. Answer the following questions:

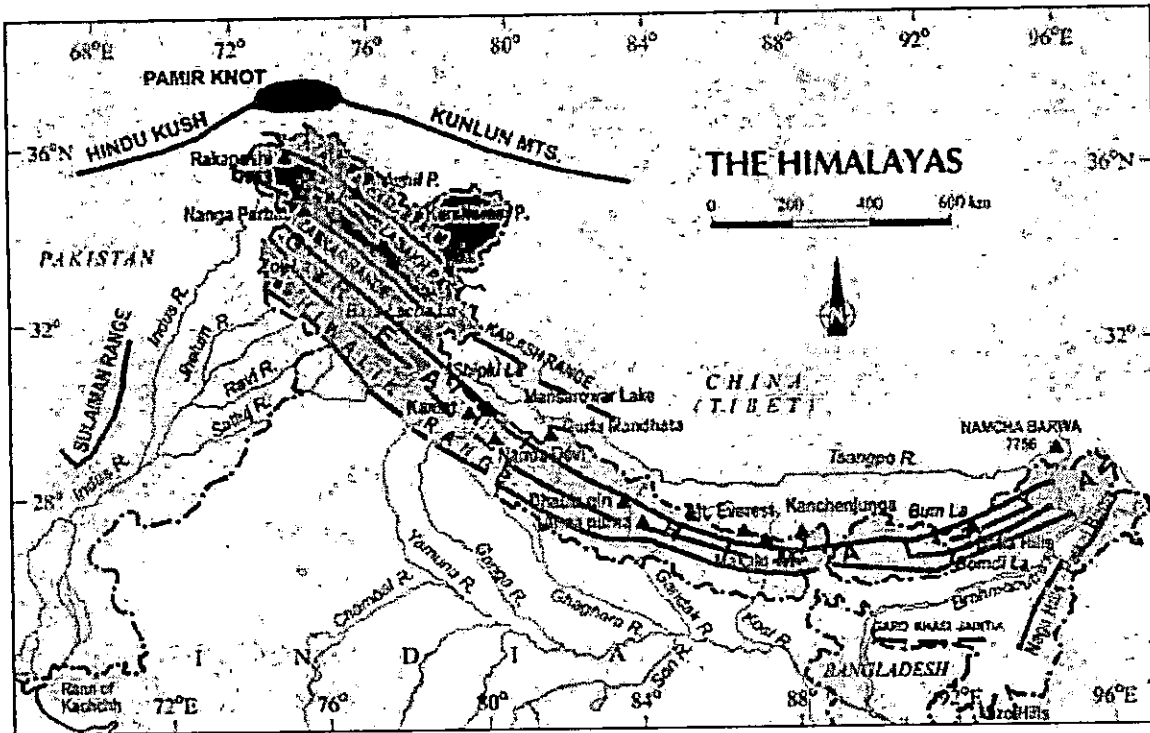
(2)

1) Which is the standard meridian of India?

2) Why does India have an ocean named after her?

---

II. A. Observe the following map of the Himalayas.(2)



(1) Name the outermost range.

---

(2) Name the eastern most highest peak.

---

B. Answer the following questions:

(2)

(1) State any one feature of the Himadri range.

---

(2) What are Duns?

---

---

C. With reference to the map shown above, name the following:

(2)

(1) Any two tributaries of R. Indus.

---

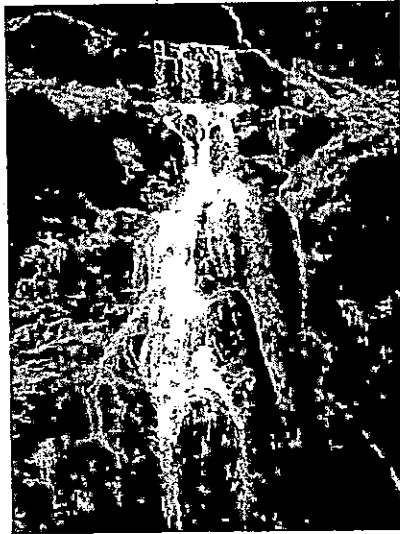
(2) Any two ranges of the Purvanchal hills.

---

D. State one point of difference between Bangar and Khadar soils. (1)

---

E.



(1) In which physiographic division of India, will you notice such landforms? (1)

---

(2) Name the two broad divisions of the plateau region. (2)

---

III. A. Observe the map:



(1) Which are the two sections of the Eastern Ghats?(2)

---


(2) Name the highest peak of the Western Ghats. (1)

---

(3) Why are the Eastern Ghats discontinuous? (1)

---

B.




(1) Identify the type of landform in the above picture.

(1)

(2) What are Barchans?

(1)

C.



(1) Name the two groups of Islands that belong to India. (2)

(2) What is Pitli?

(1)

(3) Why are the island groups important for India?

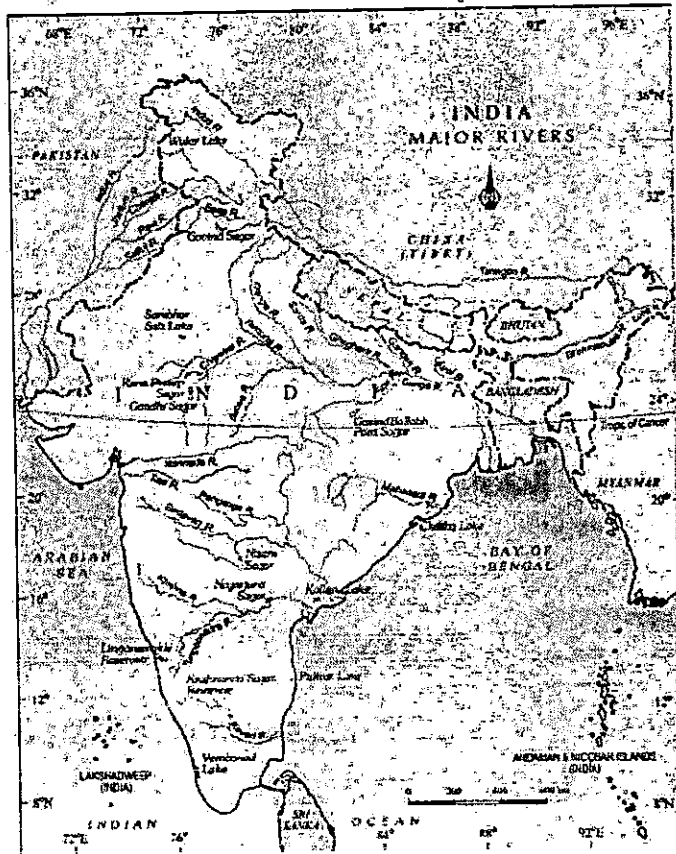
(1)

D. Match the rivers of column A with the features in column B.

(2)

Column A	Column B	Column C
(1) Himalayan rivers	(a) seasonal	(1) _____
(2) Peninsular rivers	(b) long course	(2) _____
	(c) drainage	

E. Observe the map and answer the following questions:



(1) In which water body does the Indus drain? (1)

(2) Name the two tributaries of R. Ganga that flow from Nepal. (2)

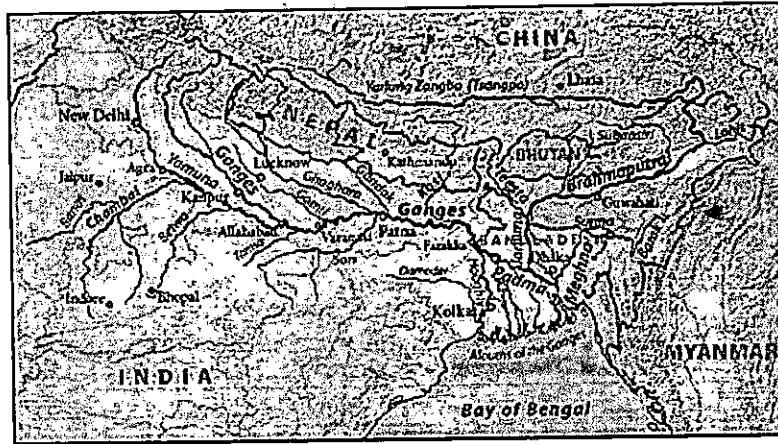
IV.A.



(1) Name the two rivers that flow as main river Ganga. (2)

(2) In which state of India do they meet? (1)

B. Observe the above figure and answer the questions that follow below:



(1) In which direction does R. Tsangpo enter India? (1)

---

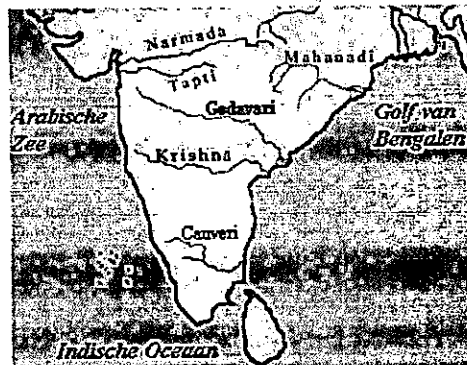
(2) Name the place at which it enters Arunachal Pradesh. (1)

---

(3) Why does R. Bhramaputra cause floods during the rainy season? (1)

---

C.



(1) Name any two rivers that drain into the Bay of Bengal. (2)

---

(2) Name the only two rivers that flow to the west of India. (2)

---

(3) Why do the east flowing rivers make deltas at their mouths? (1)

---

D. Answer the following questions:

(1) State any one use of a lake. (1)

---


(2) State any two factors that contribute to river pollution. (2)

---

(3) Why is Sambhar Lake in Rajasthan important? (1)

---

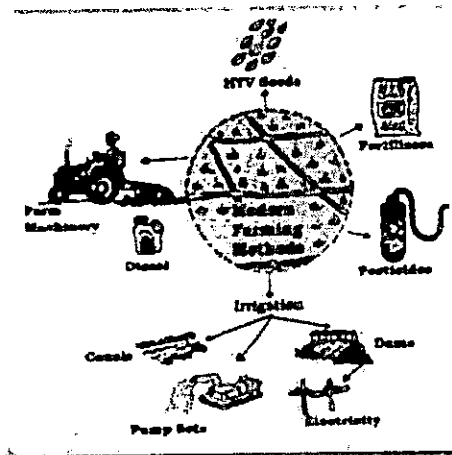
E.



(1) Name the activity being carried out in the village. (1)

(2) Name any two other activities that the villagers could carry out. (2)

V.A.



(1) Name some modern farming methods utilized in the Green Revolution. (1)

(2) Name any two kinds of manure is used by traditional farmers of Palampur? (2)

(3) What have been the ill effects of tube well irrigation? (1)

B. Answer the following questions:

(1) Mention any two ways of 'investing' in Humans. (2)

C. Observe the figure and answer the questions:



(1) Which sector of economy does the picture belong to?

(1)

(2) Why are these said to be economic activities?

(1)

D. Match the factors in Column A with the results in Column B

(2)

Column A	Column B	Column C
(1) Education	(a) employment	(1) _____
(2) Health	(b) resource	(2) _____
	(c) midday meal	

E.



(1) What is the disadvantage of this system?

(1)

(2) What are some of the benefits not enjoyed by women in their workplace?

(1)



# WEIGHTAGE OF MARKS

## STD IX

### SOCIAL SCIENCE II

#### FIRST TERM (GEOGRAPHY)

1. India size and location 10mks
2. Physical features of India 20mks
3. Drainage 20mks

#### (ECONOMICS)

1. The story of Village Palampur 07mks
2. People as a resource 08mks

**TOTAL 65 MKS**

#### (PRACTICALS)

Map work

(Figures 1.1, 1.3, 1.5, 2.3, 2.4, 3.4.)

Conventional signs

(Refer to Std VI text book)

**TOTAL 15MKS**

**GRAND TOTAL 80MKS**

#### SECOND TERM (GEOGRAPHY)

4. Climate 15mks
5. Natural Vegetation in India 15mks
6. Population 15mks

#### (ECONOMICS)

3. Poverty as a challenge 08mks
4. Food Security in India 07mks

#### (ADDITIONAL SYLLABUS)

Map marking 02mks

Bar/Line graph reading 03mks

**TOTAL 65MKS**

#### (PRACTICALS)

Bar/Line graph drawing (eg. Fig 1 of Climate, 5.1, 6.4.)

Map reading (Figures 5.3, 5.8, 6.3.)

Reading of Pie Charts (Figures 6.2, 6.5)

**TOTAL 15MKS**

**GRAND TOTAL 80MKS**

