

North Ex Public School
(Senior Secondary, Affiliated To CBSE)
School Block, Jain Nagar, Sector-38, Rohini, Delhi-81
Subject– Maths (Session 2020-2021)
CLASS – II Worksheet 4


***Note- Before attempting the worksheet you must check the video link given below which will help you in doing the same correctly.**

You can download the worksheets or if you do not have facility to get printout then you can ask your ward to copy the worksheet in a simple note book and must do exercise and question answers in the note book.


Link : <https://youtu.be/luRM7eORuJ8>

Unit-1
Numbers up to 200


EVEN NUMBERS, ODD NUMBERS



: Ankit, it's cold outside. Will you wear your gloves before going out?



: Papa, I can see only one glove.









: Here is the other one. Now you have a pair of gloves.

Objects that are in twos are said to be in **pairs**.

2,4,6,8,10--- These are even numbers


1,3,5,7,9--- These are odd numbers

B. Join the correct sets of pictures with **EVEN.**



ORDINAL NUMBERS

One day the animals in the jungle ran a race.



First, **second** and **third** tell you the position of the animals.

Such numbers are called **ordinal numbers**.

Colour it if
get all you
sums right

Q-1. Answer the following questions

- I am an even number between 1 and 10.
I am less than 4.
I am _____
- I am an odd number between 1 and 10.
I am greater than 5 but less than 9.
I am _____

Q-2. Mona wants to borrow a book from the library. She is standing in a queue. She is second from the front and ate from the back of the queue. How many people are there in the queue?

Answer. _____

Q-3. Write ordinal numbers.

- 1st _____
- 2nd _____
- 3rd _____
- 4th _____
- 5th _____
- 6th _____
- 7th _____
- 8th _____
- 9th _____
- 10th _____