

North Ex Public School
(Senior Secondary, Affiliated to CBSE)
School Block, Jain Nagar, Sector- 38, Rohini, Delhi-81
Subject- EVS , class IV, (2020-2021)

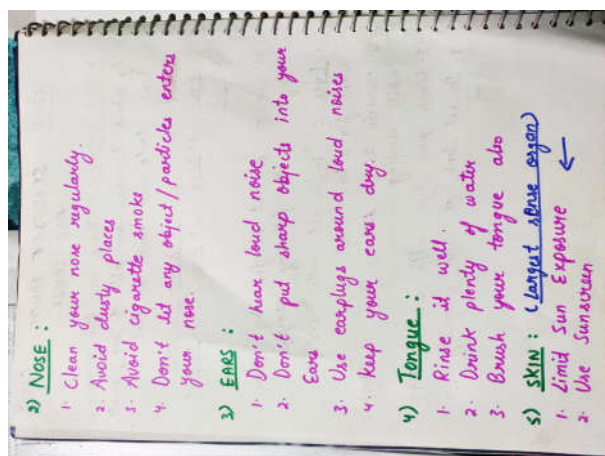
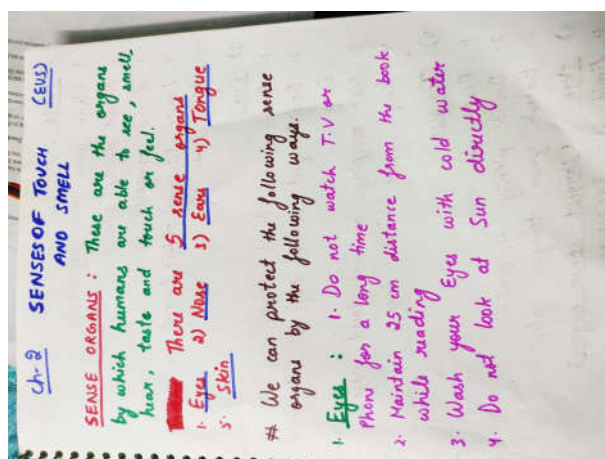
WORKSHEET NO. 3

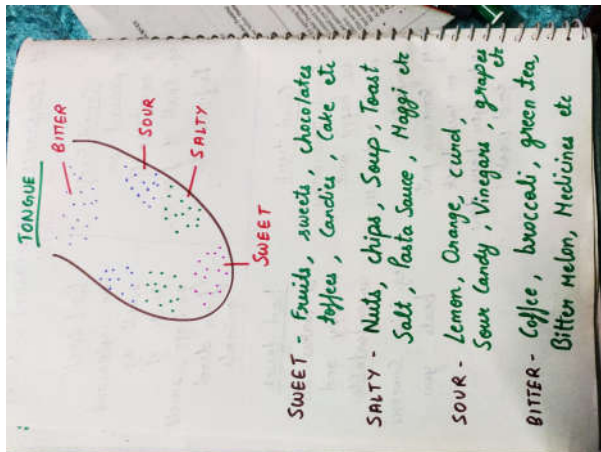

Before attempting this worksheet kindly go through the following link which will help you in attempting this worksheet

NOTE: if students are not having printer facility at home , they can copy the worksheet in a separate notebook and can write answers in that copy.

Link: <https://youtu.be/q15nUpwriSw>

CH – 2, SENSES OF TOUCH AND SMELL





Now answer the following questions-

Q1. Define sense organs?

Q2. Name five sense organs.

Q3. Which is the largest sense organ?

Q4. Give difference between good smell and a bad smell.

Q5. Define fragrance.

Q6. Give difference between good touch and bad touch.

Q7. Write any 3 ways in which we can protect the following sense organs.

1. Eyes-

2. Nose-

3. Ears-

Q8. This is the diagram of your tongue . It states the different taste buds on your tongue.



Now give any four examples of following taste.

a. Things which are bitter in taste -

b. Things which are sweet in taste -

c. Things which are sour in taste -

d. Things which are salty in taste-

Q9. Give any 5 examples of the following:

1. Good smell- _____

2. Bad smell - _____

