

NORTH EX PUBLIC SCHOOL
(SENIOR SECONDARY, AFFILIATED TO CBSE)
SCHOOL BLOCK, JAIN NAGAR, SECTOR-38, ROHINI-81
SUMMER HOLIDAY HOMEWORK
CLASS-II



English

Q1) Paste a picture of your school and write few lines about your school.

Q2) Draw and write opposite words of the following-

- a) Hot-
- b) Up-
- c) Happy-
- d) Right-
- e) Full-
- f) Day-

Q3) a) Underline the naming words.

1. Radha has a brown dog.
2. I am eating pizza.
3. I have a big house.
4. Rohan is my best friend.
5. My school name is North Ex Public School.

b) Identify the proper and common nouns.

1. Taj Mahal-
2. Doctor-
3. Agra-
4. Radhika-
5. Animal-
6. Rohan-
7. Dog-
8. Park-

Q4) Add (s and es) to form more than one.

1. Bush- _____
2. Bus- _____
3. Apple- _____
4. Boat- _____
5. Dish- _____

6. Glass- _____
7. Box- _____
8. Cake- _____
9. Car- _____
10. Bus- _____

Q5) Match the following pairs.

- | | |
|---------|----------|
| Prince | Wife |
| Husband | Princess |
| Brother | Queen |
| King | Sister |
| Peahen | Aunt |
| Uncle | Peacock |

And paste the pictures of above pairs.

Q6) Answer the following question.

a) How is the little boy?

b) Where is the tiger?

c) Who helped Susheela to learn Kolams?

d) When was Susheela allowed to make a Kolam all by herself?

e) What was he riding, when he crashed into a tree?

f) Why is the child happy in the wheelchair?

Q7) Write the meaning of given words.

1. Rage - _____

2. Roars - _____

3. Rage - _____

4. Skipped - _____

5. Dive- _____

6. Terrace- _____

7. Twinkling- _____

8. Scraped- _____

Q8) Complete the table with the help of Chapter 3.

What the poet tried to ride	What happened

Q9) Write and draw pictures of things that you must wear while riding a bicycle.

Q10) Paste a picture of your father and write few lines about him.

Q11) Make a komal (Rangoli) by using rice and pulses.

हिंदी

प्रश्न 1. अनुच्छेद लेखन:-

मेरा घर

प्रश्न 2. निम्नलिखित वाक्यों में संज्ञा को रेखांकित कीजिए-

- क) सोहन विद्यालय जा रहा है।
 ख) राधिका पुस्तक पढ़ रही है।
 ग) तितलियां बहुत सुंदर और चंचल होती हैं।
 घ) मेरा प्रिय खेल फुटबॉल है।
 ङ) मेरे विद्यालय का नाम नॉर्थ एक्स ह पब्लिक स्कूल है।
 च) मैं दिल्ली में रहता हूँ।
 छ) सैनिक लड़ रहे हैं।
 ज) आकाश में पक्षी उड़ रहे हैं।
 झ) करेले में कड़वापन होता है।
 ञ) हिमालय पर्वतों का राजा है।

(ख) संज्ञा के भेद लिखिए-

- | | |
|----------|-----------|
| क) रिया | ख) पुस्तक |
| ग) जनवरी | घ) कश्मीर |

प्रश्न 5. स्त्रीलिंग और पुल्लिंग ।

1. नीचे दिए शब्दों का लिंग बदलो।

दादा	-	_____	बूढ़ा	-	_____
भाई	-	_____	बैल	-	_____
सिंहनी	-	_____	बकरा	-	_____
चाचा	-	_____	पड़ोसी	-	_____

2. नीचे दिए शब्दों को चुनकर सही सूची में नार्ए-

बैल	सहेली	चिड़ा	महारानी	पाम्पी
चुहिया	कुत्ता	पोती	सिंह	धोबी







स्त्रीलिंग

पुल्लिंग

प्रश्न 6. गिनती।

गिनती

प्रश्न.1 चित्र देखकर सही हिन्दी गिनती चुनिए।

<input type="text"/>	<input type="text"/>	<input type="text"/>			
					
<input type="text"/>	<input type="text"/>	<input type="text"/>			
					
<input type="text"/>	<input type="text"/>	<input type="text"/>			
२	४	५	३	१	६

प्रश्न.2 सही जोड़े बनाइए ।

1	५
5	९
7	१
9	२
2	७

प्रश्न 7. विलोम शब्द लिखो।

सही विलोम शब्द चुनिए :

रात	गंदा	नीचे	उधर	ठंडा
पल्ला	छोटा	रोना	बुरा	बाहर

अंदर -

ऊपर -

गरम -

दिन -

मोटा -

इधर -

साफ -

अच्छा -

बड़ा -

हँसना -

प्रश्न 8. निम्नलिखित शब्दों के वाक्य बनाओ।

क) पेड़-

ख) कठिन-

ग) बगीचा-

घ) फूलों-

ङ) मशीन-

च) हठ-

छ) मित्र-

प्रश्न 9. पक्षियों के चित्र लगाकर उनकी बोलियां लिखो।

प्रश्न 10. शब्दार्थ।

- क) चकित -
- ख) हैरान-
- ग) लता-
- घ) प्राणी-
- ङ) हारना -
- च) मलिक -
- छ) पृथ्वी-
- ज) चकित-

प्रश्न 11. पेड़ का चित्र चिपक और पेड़ों का हमारे जीवन में महत्व के विषय में पांच पंक्तियां लिखो।

प्रश्न 13. आप अपने घर में और विद्यालय में क्या-क्या सिखते हैं उसके विषय में बताइए।

घर

- 1) _____
- 2) _____
- 3) _____



विद्यालय

- 1) _____
- 2) _____
- 3) _____

Maths

Q1. Write ordinal numbers.

ORDINAL NUMBERS - FIND AND COLOUR 4



If the cat is the first animal.....

Which animal is the third place? _____

What place is the frog in? _____

What place is the dog in? _____

Which animal is the fifth place? _____

Which animal is the last place? _____

Colour the 4th animal yellow, 1st animal Orange,

6th animal green, 2nd animal brown,

5th animal brown and 3rd animal red.

Q2. Find the sum of the numbers and make a choice between odd or even.

1) $38 + 14 =$ _____

 Odd Even

2) $45 + 35 =$ _____

 Odd Even

3) $17 + 2 =$ _____

 Odd Even

4) $28 + 13 =$ _____

 Odd Even

5) $79 + 10 =$ _____

 Odd Even

6) $8 + 88 =$ _____

 Odd Even

7) $23 + 47 =$ _____

 Odd Even

8) $51 + 30 =$ _____

 Odd Even

9) $9 + 26 =$ _____

 Odd Even

10) $12 + 12 =$ _____

 Odd Even

Q3. Subtract the following.

$$\begin{array}{r} 1) \quad 57 \\ - 38 \\ \hline \end{array}$$

$$\begin{array}{r} 2) \quad 71 \\ - 54 \\ \hline \end{array}$$

$$\begin{array}{r} 3) \quad 82 \\ - 26 \\ \hline \end{array}$$

$$\begin{array}{r} 4) \quad 61 \\ - 47 \\ \hline \end{array}$$

$$\begin{array}{r} 5) \quad 49 \\ - 18 \\ \hline \end{array}$$

$$\begin{array}{r} 6) \quad 50 \\ - 37 \\ \hline \end{array}$$

$$\begin{array}{r} 7) \quad 76 \\ - 38 \\ \hline \end{array}$$

$$\begin{array}{r} 8) \quad 95 \\ - 64 \\ \hline \end{array}$$

$$\begin{array}{r} 9) \quad 82 \\ - 69 \\ \hline \end{array}$$

$$\begin{array}{r} 10) \quad 74 \\ - 55 \\ \hline \end{array}$$

$$\begin{array}{r} 11) \quad 42 \\ - 18 \\ \hline \end{array}$$

$$\begin{array}{r} 12) \quad 63 \\ - 52 \\ \hline \end{array}$$

Q4.. Add the following.

$$\begin{array}{r} 1) \quad + 51 \\ \quad + 42 \\ \hline \hline \end{array}$$

$$\begin{array}{r} 2) \quad + 37 \\ \quad + 42 \\ \hline \hline \end{array}$$

$$\begin{array}{r} 3) \quad + 42 \\ \quad + 36 \\ \hline \hline \end{array}$$

$$\begin{array}{r} 4) \quad + 52 \\ \quad + 34 \\ \hline \hline \end{array}$$

$$\begin{array}{r} 5) \quad + 33 \\ \quad + 35 \\ \hline \hline \end{array}$$

$$\begin{array}{r} 6) \quad + 27 \\ \quad + 62 \\ \hline \hline \end{array}$$

$$\begin{array}{r} 7) \quad + 11 \\ \quad + 34 \\ \hline \hline \end{array}$$

$$\begin{array}{r} 8) \quad + 67 \\ \quad + 12 \\ \hline \hline \end{array}$$

$$\begin{array}{r} 9) \quad + 34 \\ \quad + 42 \\ \hline \hline \end{array}$$

$$\begin{array}{r} 10) \quad + 23 \\ \quad + 45 \\ \hline \hline \end{array}$$

$$\begin{array}{r} 11) \quad + 34 \\ \quad + 25 \\ \hline \hline \end{array}$$

$$\begin{array}{r} 12) \quad + 42 \\ \quad + 31 \\ \hline \hline \end{array}$$

Q5. Write the expanded form of given numbers

- 1. 123 -
- 2. 145 -
- 3. 106 -
- 4. 150 -
- 5. 234 -
- 6. 187 -
- 7. 67 -
- 8. 139 -
- 9. 160 -
- 10. 199 -
- 11. 200 -
- 12. 135 -
- 13. 146 -
- 14. 192 -
- 15. 177 -

Q6. Write the place value and place value of underline numbers.

Numbers	Place value	Face value
1. 9 <u>2</u> 5		
2. <u>3</u> 4 4		
3. <u>9</u> 2 0		
4. 6 <u>0</u> 0		
5. <u>7</u> 2 0		
6. 8 2 <u>8</u>		
7. 3 <u>1</u> 2		
8. <u>4</u> 1 5		
9. 3 <u>8</u> 6		
10. 1 1 <u>8</u>		
11. 4 <u>5</u> 7		
12. 1 <u>6</u> 4		

Q7. Sona has 129 cookies Riya had 140 cookies and 34 crackers. How many more cookies does Riya have than Sona ?

Q8. Mohan has 74 crayons. He gives 25 of them away to Rohan. How many crayons does Mohan have left ?

Q9. Write the following numbers in ascending order.

1) 216, 532, 162, 308, 478

2) 723, 415, 328, 103, 689

3) 474, 620, 552, 108, 239

4) 109, 236, 414, 326, 441

5) 114, 236, 104, 67, 100

Q 10. Write the following numbers in descending order

1) 582, 829, 758, 917, 719


2) 760, 359, 268, 633, 395

3) 617, 547, 671, 218, 182

4) 540, 916, 729, 448, 484

5) 100, 167, 34, 88, 199

Q 11. Solve the subtraction and colour according to the instructions are given



Q12. Write the number name


745	=	_____
168	=	_____
649	=	_____
43	=	_____
183	=	_____
723	=	_____
267	=	_____
262	=	_____
533	=	_____
649	=	_____
430	=	_____
47	=	_____
683	=	_____

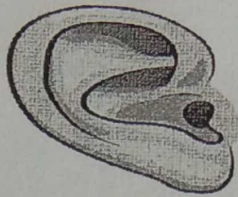
Q13. Write the numerals


four hundred eighty-seven	=	_____
fifty-eight	=	_____
four hundred seventy-seven	=	_____
three hundred thirty-six	=	_____
two hundred thirty-six	=	_____
nine hundred ninety-five	=	_____
nine hundred twenty-two	=	_____
six	=	_____
five hundred ninety-eight	=	_____
three hundred forty-six	=	_____
ninety-one	=	_____
one hundred thirty-six	=	_____
four hundred sixty-three	=	_____
three hundred nine	=	_____
five hundred thirty	=	_____


Q14. Make a book of tables (2 to 10).


Q.1 Identify them and write their names below the pictures.











Q.2 One-word answers:

a) Do you clean your room and keep things at their proper places?

b) Name one food that you would eat to get energy.

c) Which part of your body helps you to hear sounds?

d) Which organ do you use to smell the fragrance of a rose?

e) How do we feel inside the house?

Q.3 Paste pictures of any six things that we use to keep our home neat and clean.

Q.4 Answer the Questions:

a) How our house protect us?

b) What are the different types of food?

c) Write about the importance of the sense organs.

d) Which is the largest organ of our body?

e) Why do we use sign language?

Q.5 List of foods that give you energy.[Paste Pictures]

Q.6 Write a few lines on how you enjoy with your family during vacations.

Q.7 What problems are faced by people who are homeless?

Q.8 What difficulties do people face when they have problems with their sense organs?

Q.9 How do different sense organs help the body?

Q.10 Paste pictures and write the names of meals that we have in a day.

Q.11 Paste and write the names of five fruits that keep us healthy.

Q.12 Make a house using waste material..

Computer

Q1) Draw a computer and color it.

Q2) Answer the following question.

a) What is the full form of CPU?

b) Which device is known as the brain of a computer?

c) Which device is known as a pointing device?

d) Which device is used for entering data into a computer?

Q3) Paste or draw pictures of 5 places where do we use a computer

G.K

1- Write one National, one International and one sports news from newspaper on daily basis. Also mention newspaper name and date.

ART & CRAFT

1. Make an artwork using Ladyfinger printing on A4 size sheet.
2. Cut Square, Circle, Triangle, Rectangle shapes, making face features on it and paste it in A4 size sheet, Then make hands and legs of each shape.