

NORTH- EX PUBLIC SCHOOL  
SENIOR SECONDARY, AFFILATED TO CBSE  
SCHOOL BLOCK, JAIN NAGAR, SECTOR-38, ROHINI, DELHI-81  
SUMMER HOLIDAY HOMEWORK  
CLASS - V



ENGLISH

Q-1 What does your mother do when you fight with your siblings?

---

---

---

---

---

---

---

---

Q-2 Do you think mother did the right thing by forcing Leela to take her brother along?

---

---

---

---

---

---

---

---

Q-3 Even though they were the burglars but still granny calmly gave them the keys of the safe. Why do you think she did this?

---

---

---

---

---

---

---

---

Q-4 Arrange the following words in the order that they make complete sense.

- a. flows /river/ a /through /valley/ the \_\_\_\_\_
- b. make /noise /a /not /do \_\_\_\_\_
- c. i/picture /like /draw /to \_\_\_\_\_

d. the / computer / is working / on / my / neighbour \_\_\_\_\_

e. cooks/ my mother/ delicious / food \_\_\_\_\_

Q-5 Change affirmative sentences into negative sentences.

a. She is ill today. \_\_\_\_\_

b. I can swim. \_\_\_\_\_

c. Rahul have a pet fish. \_\_\_\_\_

d. He is a poor man. \_\_\_\_\_

e. It is a difficult task. \_\_\_\_\_

Q-6 Change these sentences as indicated . Use suitable punctuation marks.

a. Sneha is wearing a blue dress .( change into Interrogative)

\_\_\_\_\_

b. Post the letter at once. ( change into declarative )

\_\_\_\_\_

c. It was a very exciting match. ( change into exclamatory )

\_\_\_\_\_

d. Tarun has eaten an apple. ( Change into interrogative)

\_\_\_\_\_

e. Pushpa is a good teacher. ( Change into negative)

\_\_\_\_\_

Q-7 Add the correct prefix or suffix to the word in parenthesis to complete the sentences.

a. If the children \_\_\_\_\_ ( behave ) , they must go to bed early.

b. Maya is the most \_\_\_\_\_ ( grace ) dancer in the group.

c. He was sitting \_\_\_\_\_ ( comfort ) in his seat on the train.

d. The lesson is full of mistakes, we will have to \_\_\_\_\_ ( write) it.

e. I might not like it, but don't \_\_\_\_\_ (approve) it.

Q-8 State whether the following statements are imperative and change into declarative:-

- a. Ronny close the door. \_\_\_\_\_
- b. Listen carefully. \_\_\_\_\_
- c. Don't feed the dogs. \_\_\_\_\_
- d. Please help me wrap this gift. \_\_\_\_\_
- e. Please shut the computer. \_\_\_\_\_

Q-9 Write 10 antonyms and 10 synonyms in practice notebook.

Q-10 Write 2 new words daily and frame sentences by using them in practice notebook.

Q-11 Write a letter to your parents thanking them for their love and support in practice notebook.

Q-12 Write a paragraph on swachh bharat abhiyan in practice notebook.

NOTE - LEARN AND REVISE THE SYLLABUS OF PERIODIC TEST-1

Wash each day your masterpiece

no truth is the strongest argument.

Maths

Q-1 Write the following number names according to the Indian and the International place value system of the following numbers:-

A) 89705689 Indian - \_\_\_\_\_  
International - \_\_\_\_\_

B) 590876345 Indian - \_\_\_\_\_  
International - \_\_\_\_\_

C) 24587916 Indian - \_\_\_\_\_  
International - \_\_\_\_\_

D) 748657136 Indian - \_\_\_\_\_  
International - \_\_\_\_\_

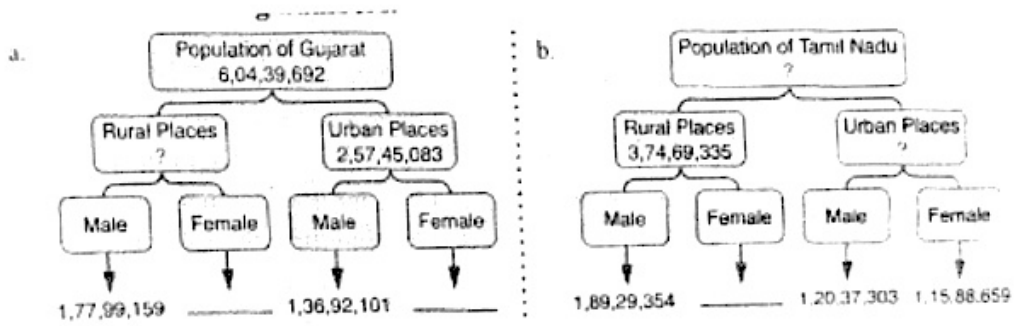
E) 9264906 Indian - \_\_\_\_\_  
International - \_\_\_\_\_

Q-2 Write the place value and face value of 9 of the following numbers :-

Numbers	Place value	Face value
1. 4,65,93,475		
2. 2,93,45,634		
3. 7,14,39,004		
4. 6,86,44,946		
5. 9,43,75,621		

Q-3 Write the Rules of Roman numerals with their examples.

Q-4 Find out the missing numbers:-



Q-5 The given table shows The number of people who watched movie in a multiplex every month.

Month	1 <sup>st</sup> month	2 <sup>nd</sup> month	3 <sup>rd</sup> month	4 <sup>th</sup> month	5 <sup>th</sup> month
Number of people	1,11,50,975	1,71,80,642	1,16,78,429	1,56,42,657	1,10,69,456

Answer the following questions:-  
 A) Arrange in Ascending order.



B) Find the sum of the 2<sup>nd</sup> month and the 4<sup>th</sup> month.

C) Find the difference between the 1<sup>st</sup> month and the 3<sup>rd</sup> month.

Q-6 A company recruited 23 employees with 12,456 as monthly salary for each. The company offered 28,750 as bonus for these 23 employees. Find the salary of each employee for 12 months including the bonus. Also, find the total salary of all the employees including the bonus.

Q-7 46 sacks of rice cost 2,68,962 and 74 sacks of jaggery cost 2,11,566. Find out the price of 1 sack of rice and 1 sack of jaggery. Which is costlier, rice or jaggery, by how much?

Q-8 In a godown there are 56,83,45,600 bags of food grains. If there are 4,26,72,955 bags of rice and 1,23,67,588 bags of wheat . Find the number of bags of other grains.

Q-9 I am a 4 number digit between 5000 and 6000. My ones place is half of my tens place . My hundreds place is 3 times my tens place. What number am I?

---

---

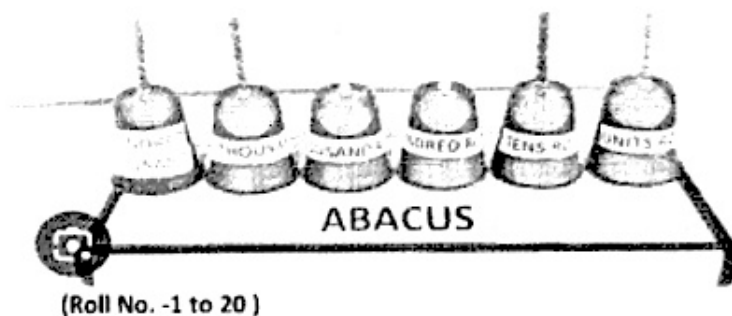
---

Q-10 Write the properties of multiplication with their examples.

Q-11 Samyak makes pen boxes in his workshop. If he works for 3 hours, he is able to make 1 box. He works for 8 hours a day. How many boxes will he be able to make in 12 days?

Q-12 Project based question:-

Make a model of abacus. Picture is showing below and mention 565,435,243 on it .



(Roll No. -1 to 20 )

Notes:-

- Revise the syllabus of Periodic Test-1
- Do 2-2 sums daily of Addition, subtraction, multiplication & Divisions in practice notebook.
- Learn and write tables of 2 to 20

## हिन्दी

प्रश्न-1 कोई एक ऐसी घटना लिखिए जब तुमने किसी की सहायता की हो।

---



---



---



---

प्रश्न-2 अपनी दैनिक दिनचर्या को (50-100) शब्दों में वर्णित कीजिए।

---



---



---



---

प्रश्न-3 'जब पंडितों को पता चला कि गोपाल बेकसूर हैं' इस पंक्ति को एक क्षमा पत्र में परिवर्तित कीजिए।

---



---



---



---



---



---



---



---



---



---



---



---



---



---



---



---



---



---



---



---



---



---

प्रश्न-4 चार धर्मों में से एक धर्म पर 10 वाक्य लिखिए।

---



---



---



---



---



---



---



---



---



---

प्रश्न-5 दिए गए मुहावरों को अर्थ सहित वाक्य में प्रयुक्त कीजिए-

- चेहरे का रंग उड़ जाना

---



---



---

- आव देखना न ताव देखना

---



---



---

- गुस्से से लाल होना

---



---



---

- हाथ बँटाना

---



---



---



vi. वर्ण विच्छेद कीजिए- सत्यवादी, हिमालय, विशालकाय

प्रश्न-10 अनुच्छेद लेखन 'नम्रता' का अभ्यास कीजिए। और गर्मियों की छुट्टियाँ साथ बिताने हेतु मित्र को पत्र लिखिए। (अभ्यास पुस्तिका में कीजिए)

प्रश्न-11 एनीमिया होने का क्या कारण होता है, रक्त निर्माण के लिए शरीर को किन-किन चीजों की आवश्यकता होती है, एनीमिया से बचने के लिए हमें किन-किन बातों का ध्यान रखना चाहिए।

---



---



---



---



---



---



---



---



---



---

प्रश्न-12 दिए गए चित्र को देखकर अपने शब्दों में 7 से 8 वाक्य लिखिए।




---



---



---



---



---



---

विशेष:- सामायिक परीक्षा-1 कापुनः अभ्यास कीजिए।

हमें अतिथि का आदर-सत्कार करना चाहिए!



भारतवर्ष संस्कृति एवं सभ्यताओं का देश है।

EVS

Q1. Think of all the relatives you know. Try to answer the following questions.

- 1. Who is the tallest among them? \_\_\_\_\_
- 2. Who is the shortest? \_\_\_\_\_
- 3. Who has the loudest voice? \_\_\_\_\_
- 4. Who speaks the softest? \_\_\_\_\_

Q2. Write a short note on

- 1. Sudha Chandran

---

---

---

---

---

---

---

---

---

---

- 2. Helen Adams Keller

---

---

---

---

---

---

---


---

---

---

Q3. Gather information on two active people who had or have a disability. Discover how they have developed skills which allow them to overcome their disability in their daily lives. ( in practice notebook)

Q4. write the name of this game and describe it in (50-100 )words.



---

---

---

---

---

---

---

---

---

---

---

---

---

---

---

---

---

---

---

---

---

---

---

---

---

---

---

---

---

---

Q5. Define the terms:-

1. Migration

---

---

---

---

---

---

---

---

**2. Tolerant**

---

---

---

---

**3. Opponent**

---

---

---

---

**4. Diaphragm**

---

---

---

---

**Q6. Make a diagram of human respiratory system with label.**

**Q7. Write any five lines about Dr. Bhimrao Ambedkar. How did he contribute in our constitution.**

---

---

---

---

---

---

---

---

**Q8. Write any 5 ways how Mahatma Gandhi spread message towards "dignity of labour".**

---

---

---

---

---

---

---

---

**Q9. What is pulse rate? Write the number of pulse rate while you are sitting and after running.**

---

---

---

---

---

---

---

---

**Q10. Write different names of kabaddi and martial art. Write any two rules while performing martial arts and while playing kabaddi.**

---

---

---

---

---

---

---

---

---

---

---

---

---

---

---

**Q11. What do you mean by Mass shifting. Tell any one incident when Mass shifting occur from chapter 2**

---

---

---

---

---

---

---

---

---

---

---

---

**Q-12 What are the special qualities of different relatives in the family?**

---

---

---

---

---

---

---

---

---

---

---

---

---

---

**PROJECT:-**  
**Q13. Make your own stethoscope and follow the instructions on page no 23. (Roll No 21 onwards)**

- Complete index & do correction work ( if any )
- Learn the syllabus of Periodic test-1

### Computer

1. Draw /Paste the pictures of Generations of computer in notebook.
2. Draw the picture of Robot in notebook & Write few lines about AI technology.
3. Do the Activity Section Pg. .No. 26 in book.
4. Complete chapter-1,2 in notebook, book (if pending) & Revise.

### Art & Craft

1. Make an innovative DIY using paper cups.
2. Make DIY wall decor on disposable plate, paint it beautifully with water colours / poster colours.

### GK

1. Write one National, one International and one sports news from news paper on daily basis. Also mention newspaper name and date. (any one)