

NORTH – EX PUBLIC SCHOOL

(Senoir Secondary , AFFILIATED TO CBSE)

School Block , Jain Nagar , Sector – 38 , ROHINI ,

Delhi – 81

Worksheet of September month

Class – 1st

ENGLISH

M M – 20

Ques 1. Fill in the blanks with is, am ,are

(5)

1. I ____ a student.
2. He ____ hungry.
3. They ____ from England.
4. You ____ a teacher.
5. Cheris ____ sad.

Ques 2. Circle the doing words :

(5)

1. Kate is drinking water.
2. I am eating an apple.
3. He is jumping over the wall.
4. I live in America.
5. Dog usually bark at night.

Ques 3. Answer the following questions :

(5)

1. Where all the sparrows gone ?

Ans _____

2. Why does bhola not fit in its chair ?

Ans _____

3. Does bhola makes friends ?

Ans _____

4. What does mother gives to bhola one day ?


Ans _____

5. Where will the child go to the next day ?

Ans _____

Ques 4. Complete the picture composition :

(5)



1. It is an _____ (apple / mango.)
2. It keeps us _____ (fat / healthy)
3. It is _____ in colour. (red / yellow)
4. I _____ to eat apples . (hate / love)
5. Apple makes us _____ (strong / weak)

EVS

Ques 1. Tell me the people' s work of our helpers :

1. Doctor - _____
2. Teacher - _____
3. Barber - _____
4. Tailor - _____
5. Cobbler - _____

Ques 2. Name the two things that found in the room :

1. Kitchen - _____
2. Bathroom - _____
3. Bedroom - _____
4. Dinning room - _____
5. Drawing room - _____

Ques 3. Rearrange the words :

- LOHI - _____
- IDE - _____
- IWALID - _____
- T MASRISCH - _____

Ques 4. Answer the questions :

1. What are shrubs ?

Ans - _____

2. Why do we go to school ?

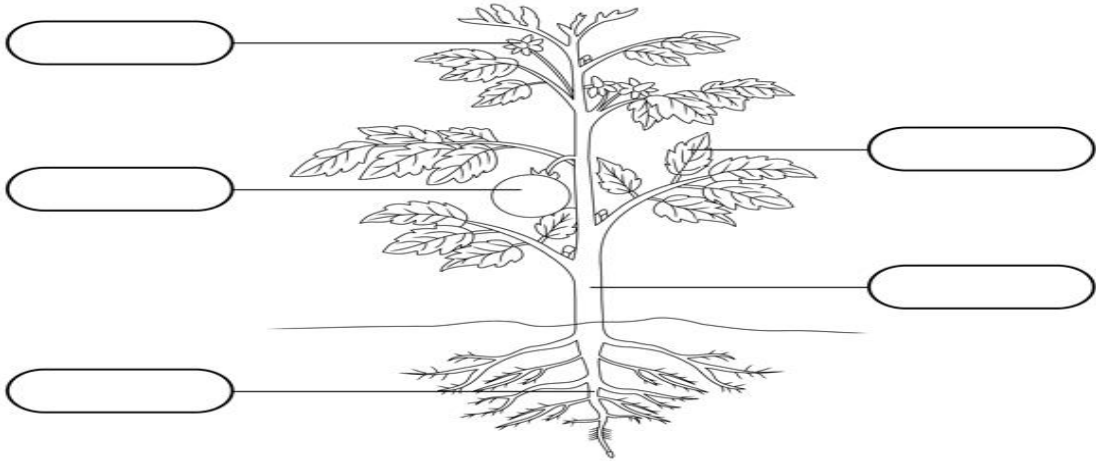
Ans - _____

Ques 5. Label the parts of a plant :

Name: _____

Date: _____

Label the **Parts of a Plant**



Word Box

Stem Flower Leaf Fruit Root

Maths

Q1. Add (3)

a.

$$\begin{array}{r} p \\ 35 \\ + 25 \\ \hline \\ \hline \end{array}$$

b.

$$\begin{array}{r} p \\ 10 \\ + 40 \\ \hline \\ \hline \end{array}$$

c.

$$\begin{array}{r} p \\ 75 \\ + 30 \\ \hline \\ \hline \end{array}$$

Q2. Colour the thinner object (1)



Q3. Solve (4)

$Rs\ 2 - Rs\ 1 =$ <input type="text"/>	$Rs\ 20 - Rs\ 8 =$ <input type="text"/>
$Rs\ 30 - Rs\ 5 =$ <input type="text"/>	$Rs\ 19 - Rs\ 7 =$ <input type="text"/>

Q4. Write 1 to 3 to show order from shortest to longest (2)

1)



2)








Q5. Mark a tick next to the thicker plank (1)



Q6. Circle the group which has more number of objects (4)



Q7. Tick (✓) the correct answer (5)

<p>Q1)</p>	<p>What Rupee note is this?</p> <table border="1"> <tbody> <tr> <td>a.</td> <td>10</td> <td></td> </tr> <tr> <td>b.</td> <td>20</td> <td></td> </tr> <tr> <td>c.</td> <td>50</td> <td></td> </tr> <tr> <td>d.</td> <td>100</td> <td></td> </tr> </tbody> </table>	a.	10		b.	20		c.	50		d.	100		
a.	10													
b.	20													
c.	50													
d.	100													
<p>Q2)</p>	<p>What Rupee note is this?</p> <table border="1"> <tbody> <tr> <td>a.</td> <td>10</td> <td></td> </tr> <tr> <td>b.</td> <td>20</td> <td></td> </tr> <tr> <td>c.</td> <td>50</td> <td></td> </tr> <tr> <td>d.</td> <td>100</td> <td></td> </tr> </tbody> </table>	a.	10		b.	20		c.	50		d.	100		
a.	10													
b.	20													
c.	50													
d.	100													
<p>Q3)</p>	<p>What Rupee note is this?</p> <table border="1"> <tbody> <tr> <td>a.</td> <td>10</td> <td></td> </tr> <tr> <td>b.</td> <td>20</td> <td></td> </tr> <tr> <td>c.</td> <td>50</td> <td></td> </tr> <tr> <td>d.</td> <td>100</td> <td></td> </tr> </tbody> </table>	a.	10		b.	20		c.	50		d.	100		
a.	10													
b.	20													
c.	50													
d.	100													
<p>Q4)</p>	<p>What Rupee note is this?</p> <table border="1"> <tbody> <tr> <td>a.</td> <td>10</td> <td></td> </tr> <tr> <td>b.</td> <td>20</td> <td></td> </tr> <tr> <td>c.</td> <td>50</td> <td></td> </tr> <tr> <td>d.</td> <td>100</td> <td></td> </tr> </tbody> </table>	a.	10		b.	20		c.	50		d.	100		
a.	10													
b.	20													
c.	50													
d.	100													
<p>Q5)</p>	<p>What Rupee note is this?</p> <table border="1"> <tbody> <tr> <td>a.</td> <td>100</td> <td></td> </tr> <tr> <td>b.</td> <td>200</td> <td></td> </tr> <tr> <td>c.</td> <td>500</td> <td></td> </tr> <tr> <td>d.</td> <td>1000</td> <td></td> </tr> </tbody> </table>	a.	100		b.	200		c.	500		d.	1000		
a.	100													
b.	200													
c.	500													
d.	1000													

Hindi

प्रश्न1. प्रश्नों के उत्तर लिखिए। (5)

क) मौसी क्या लाई ?

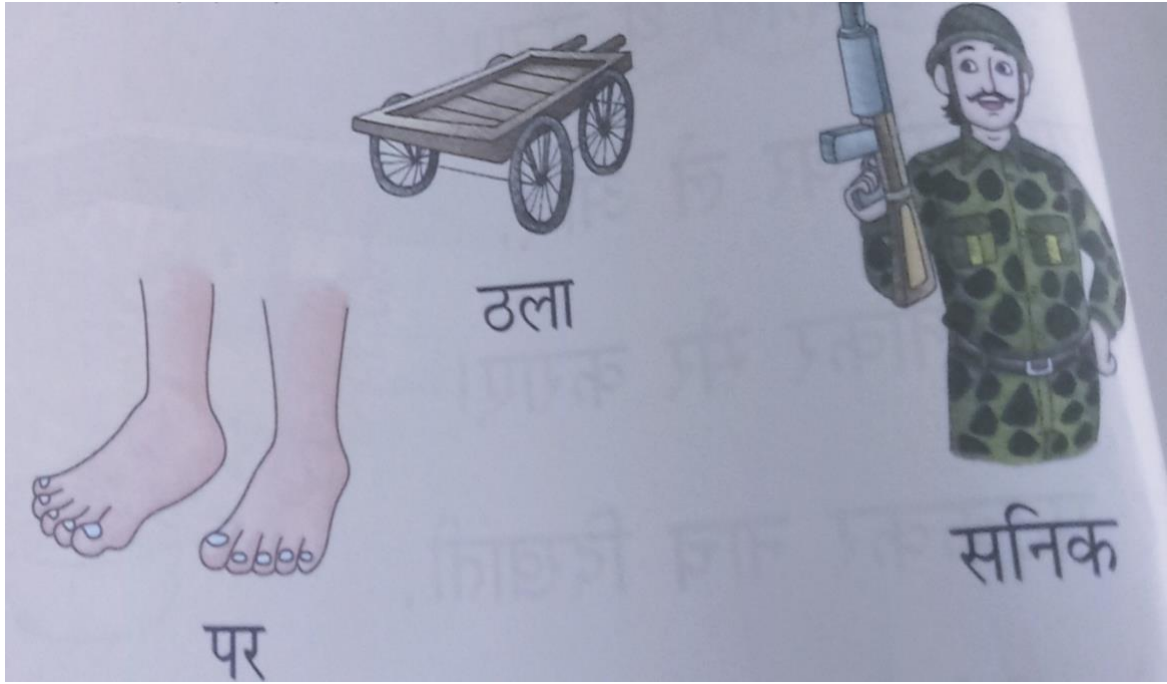
ख) समोसा लेकर कौन आया ?

ग) रेवा ने क्या देखा ?


घ) रेनू ने क्या खाया ?


ड) सपने में रेवा ने क्या देखा ?


प्रश्न2. छोटी ए व बड़ी ए की मात्रा लगाकर शब्द पूरा करो ।(3)




प्रश्न3. चित्र देखकर वाक्य पूरा करो । (3)

छुक-छुक करती  आ गई।

 खाली करो।

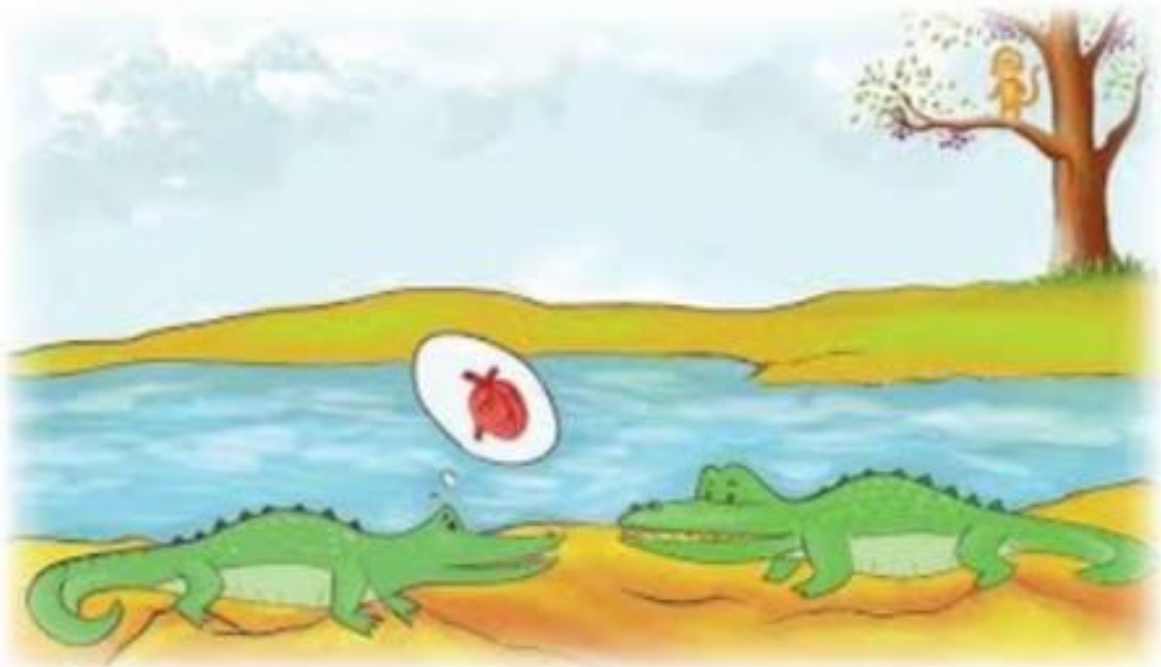
 सीमा पर लड़ रहा है।

प्रश्न4. छोटी ओ या बड़ी औ की मात्रा लगाकर शब्द पूरे करो ।(3)



प्रश्न5. कहानी पूरी करो । (6)

दोनों आपस में मित्र थे। बन्दर हर दिन मगरमच्छ को
खाने को देता था। एक दिन मगरमच्छ थोड़े से
जामुन अपनी के लिए भी ले गया। उसकी पत्नी
ने सोचा कि ऐसे मीठे जामुन खाने वाले का
बहुत मीठा होगा।



उसने अपने पति से कहा कि एक दिन वह बन्दर को
घर लेकर आए। अगले ही दिन मगर ने बन्दर को अपनी
पर बैठाया और में अपने घर ले
चला।

नदी बन्दर जामुन पत्नी कलेजा पीठ

