

NORTH – EX PUBLIC SCHOOL
(Senior Secondary . Affiliated To CBSE)
School Block , Jain Nagar, Sector – 38, Rohini, Delhi – 81
Periodic Test – 1 (2023 – 24)
CLASS – IV
Subject- ENGLISH

M.M. –25

Time – 1 hour

General instructions:-

- Read each question carefully and follow the instructions.
- All questions are compulsory.
- This paper has 4 sections:- Section-A, Section-B and Section- C and Section – D.

Section – A (Unseen passage)

(5 Marks)

(5)

1. Read this passage and answer the following questions-

A fox was hungry.He looked for food.He saw a bunch of grapes.He jumped to get them.But grapes were very high.He could not reach them. At last he was tired.He said, these grapes are sour. Saying so he went away.

1. Why did the fox look for food?
2. What did he see?
3. What did he do to get the grapes?
4. Could he get the grapes?
5. What did he said at last ?

Section – B (Grammar)

(5 Marks)

(0.5 × 2 = 1)

2. Write the antonyms -

(a) little –

(b) sad –

(0.5 × 2 = 1)

3. Write the synonyms -

(a) sick –

(b) chop –

(0.5 × 2 = 1)

4. Write the kinds of sentences -

(a) Is it a holiday today?

(b) Shut the door.

(0.5 × 2 = 1)

5. Complete sentences using verbs to match the subjects -

(a) Sohan _____ (was/were) there for his aunt's wedding.

(b) They _____ (is/am/are) from Indore.

(0.5 × 2 = 1)

6. Circle the subjects and underline the predicate -

(a) We get wool from sheep.

(b) The clouds are dark.

Section –C (Literature)

(10Marks)

(0.5×4 =2)

7. Write the meaning of following words -

(a) yell -

(b) glint -

(c) drawn to -

(d) track –

8. Answer the following questions -

(1×3 =3)

(a) What did Dichi like to do?

(b) Where do pet like to sleep?

(c) Where did Tine live?

9. R.T.C.

(1 × 2 = 2)

It took a week for everyone to realise that she was a girl disguised as a boy!

a) Who was disguised as a boy?

b) Why did she have to disguise herself?

10. Read the passage carefully and answer the following questions –

(1 × 3 = 3)

Dichi was a little girl who lived in a beautiful little village in the mountains of Uttarakhand. She loved to climb her favourite ash tree with her brothers and play her dholak.

(a) From which chapter this passage has been taken?

(b) What was Dichi's favourite tree?

(c) Where did Dichi live?

Section – D (Writing)

(5 Marks)

11. Write any one -

- Write a paragraph on TRUE FRIEND.

OR

- Write a letter to your grandparents to tell them about your excellent result.

(5)

LD

NORTH EX PUBLIC SCHOOL
(Senior Secondary, Affiliated to CBSE)
School Block, Jain Nagar, Sector-38 Rohini, Delhi-81
प्रथम समायिक परीक्षा(2023-2024)

कक्षा-IV
विषय -हिंदी

समय - 1घण्टा

अ.अ. - 25

सामान्य निर्देश-

- > सभी प्रश्नों के उत्तर लिखना अनिवार्य है।
- > इस प्रश्न पत्र के चार खंड हैं- खंड-क, खंड-ख, खंड-ग, खंड घ ।
- > खंड-क में अपठित गद्यांश, खंड-ख में व्यावहारिक व्याकरण खंड-ग में पाठ्यपुस्तक से संबंधित प्रश्न पूछे गए हैं, व खंड-घ लेखन भाग ।

खंड-क 'अपठित गद्यांश'

प्रश्न 1. निम्नलिखित गद्यांश को पढ़कर उत्तर दीजिए -

(1x5=5)

दो सहेलियों थी सीमा और रीमा । दोनों एक साथ पढ़ती और खेलती थी । एक दिन दोनों घर जा रही थी कि दो कुत्ते लड़ते हुए उधर आ निकले । रीमा कुत्तों से बहुत डरती थी। वह कुत्तों को देखकर भागने लगी और ठोकर खाकर गिर पड़ी । उनकी टांग से खून बहने लगा। सीमा दौड़ कर उसके पास पहुँची। उसने खून बहते देख उसने तुरंत अपना रुमाल घाव पर बांध दिया और रीमा को सहारा देकर घर ले गई। रीमा की मां उसे डॉक्टर के पास ले गई । डॉक्टर ने रीमा की घोट पर दवा लगाकर पट्टी बांध दी । रीमा की माँ ने सीमा की बड़ी प्रशंसा की ।

प्रश्न 1 दो सहेलियों का क्या नाम था?

प्रश्न 2 रीमा क्यों भागने लगी ?

प्रश्न 3 गद्यांश में से दो संज्ञा शब्द छांट कर लिखिए।

प्रश्न 4 गद्यांश में से निम्नलिखित शब्दों के विलोम शब्द लिखिए ।

1) पास

2) दिन

खंड-ख 'भाषा अधिगम एवं व्याकरण'

प्रश्न 2) रिक्त स्थानों की पूर्ति कीजिए ।

(1)

क) हिंदी भाषा की लिपि _____ है। (देवनागरी/गुरुमुखी)

ख) अपने मन के भाव को बोलकर या लिखकर दूसरी तक पहुंचाना या प्रकट करना ही _____ है।
(व्याकरण / भाषा)

प्रश्न 3) निम्नलिखित शब्द के पर्यायवाची शब्द लिखिए।

ईश्वर-

प्रश्न 4) i) अनेक शब्दों के एक शब्द -

जो साथ पढ़ता हो - _____

ii) वर्ण के कितने भेद होते हैं? नाम लिखिए ?

प्रश्न 5. संयुक्त व्यंजन वाले कोई दो शब्द लिखिए।

प्रश्न 6. (✓) सही या (X) गलत का चिह्न प्रयोग करें।

- आंखों में धूल झोंकना मुहावरे का अर्थ महामूर्ख होता है। (✓)
- भाषा से विचारों का आदान-प्रदान होता है। (✓)

खंड- ग (साहित्य)

प्रश्न 7 नीचे दिए गए प्रश्नों के उत्तर दीजिए।

1. न्याय के लिए ब्राह्मण किसके पास गया? (1)
2. राजा का फैसला सुनकर सेठ हक्का-बक्का क्यों रह गया? (2)

प्रश्न 8 निम्नलिखित प्रश्नों के उत्तर दीजिए।

- 1) सभी त्योहार हमें क्या संदेश देते हैं ?
- 2) हमें सबसे मिल जुलकर क्यों रहना चाहिए?

प्रश्न 9 निम्नलिखित पंक्तियों को पढ़कर प्रश्नों के उत्तर दीजिए -

"एक हमारा मालिक हम सब
रहते नीचे एक गगन के।"

(क) माली किसका प्रतीक है ?

(ख) हम सब सुमन कविता में किसकी बात की गई है ?

प्रश्न 10. शब्दों के अर्थ लिखिए।

(1/2x4=2)

- शोभा -
- आजीवन -
- प्रकाश पर्व-
- गुंजन-

खंड-घ लेखन भाग

(5)

प्रश्न 11) निम्नलिखित में अनुच्छेद या पत्र लेखन लिखिए।

"माता वैष्णो देवी मंदिर"

या

अवकाश के लिए प्रधानध्यायी जी को प्रार्थना पत्र लिखिए

NORTH-EXPUBLICSCHOOL
(Senior Secondary, Affiliated To CBSE)
School Block, Jain Nagar, Sector-38, Rohini, Delhi-81
PERIODIC TEST 1 (2023-24)
SUBJECT-MATHS
CLASS-W

M.M.:25marks

TIME: 1 HOUR

General Instructions:

- (i) The question paper comprises four sections A, B, C and D.
- (ii) Section-A-question no.1 to10 carries 0.5 marks each.
- (iii) Section-B-question no.11 to 14 carries 1 mark each.
- (iv) Section-C-question no. 15 to 17 carries 2 marks each.
- (v) Section-D-question no.18 & 19 carries 5 marks each.

Section A

Q1) Fill in the blanks:

- 1) Rs. 1 = _____paise
- 2) Largest five digit number in figures is _____.

Q2) Write True and false:

- 1) Changing the order of addends does not change the sum. _____
- 2) X cannot be subtracted from C. _____

Q3) Put the sign <, > or =

- 1) 5, 89,230 _____ 5, 98,032
- 2) XX _____ 14

Q4) Write the expanded form: 21096

Q5) Write in the short form: 30,000+9

Q6) Write the place value of the digits

807624: 2 _____, 0 _____

Q7) Write the number using the properties of addition:

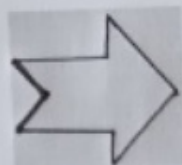
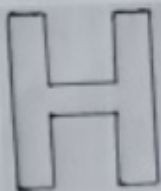
1) $23987 + 91820 = \underline{\hspace{2cm}} + 23987$

2) $41,820 + \underline{\hspace{2cm}} = 41,821$


Q8) Form the smallest and largest 6-digit numbers with the digits: 5, 0, 9, 8, 3, 2

Largest number _____, smallest number _____

Q9) Draw the line of symmetry:



Q10) Fill in the missing number in box by observing the pattern-



Section B

Q11) Convert the following

- 7675p into Rs
- Rs.35.75 into p

Q12) Write in Roman Numerals 13.

Q13) Write the Successor of 276001

Q14) Write the number comes after 317899.

Section C

Q15) Solve the following:

1) $5908 + 4509 - 7560$

2) $\text{Rs.} 325.04 \times 6$

Q16) Round off the nearest 1000

- 7532

Q17) Write :-

- 56098, 65890, 65980, 56908, 56980. (in ascending order)
- 956711, 865117, 965171, 856711, 817165. (in descending order)

Section D


*Solve with statement :

Q18) There are 513789 males and 248157 females in a city? What is the population of the city?

- Write in expanded form: 513789, 249157
- Write in number name 513789
- Calculate total population of the city?

Q 19) Babita paid Rs. 2000 to the shopkeeper to buy a toy for Rs.572.75 .How much money will he get back?

- How many total amount he have?
- Write in Rs.572.75 in words (number name)
- Calculate total money he gets back?



Answering.
17/23

NORTH – EX PUBLIC SCHOOL
(Senior Secondary . Affiliated To CBSE)
School Block , Jain Nagar, Sector – 38, Rohini, Delhi – 81
Periodic Test – 1 (2023 – 24)
CLASS – IV
Subject–EVS

M.M. –25 marks

Time- 1 hour

General instructions:-

- Read each question carefully and follow the instructions.
- All questions are compulsory.
- This paper has 4 sections:- Section-A, Section-B, Section-C and Section – D.

Section – A

(0.5 × 10 = 5)

- Q.1 Write any two name of sense organs?
Q.2 An adult has 32 teeth. (T/F)
Q.3 The _____ of the legs help in various movements.
Q.4 Molars are also call _____ teeth.
Q.5 Plants having a life span of more than two years are called _____.
Q.6 Give one example of aquatic animal.
Q.7 Give one example of Taproots.
Q.8 Give an adaptive feature of cactus.
Q.9 The leaves of this tree are needle – like. _____
Q.10 Give one example of arboreal animals.

Section – B

(1 × 4 = 4)

- Q.11 How can we make our muscles stronger?
Q.12 Which is the largest amphibian in the world?
Q.13 Who are poachers?
Q.14 Why are leaves called the kitchen of the plants?

Section – C

(2 × 3 = 6)

- Q.15 Which organ of our body is called the master organ? Why?
Q.16 What is a habitat?
Q.17 Which plants have the life span of two years? Give one example.

Section – D

(5×2=10)

- Q.18 Read the passage carefully and answer the following questions – (2.5×2=5)

If you were an animal, which of the two situations would you like to be in? Caged and unable to wander freely or being in your natural habitat in the jungle? Think about it and how the cutting down of jungles is destroying the homes of animals.

- (a) Choose the situation from the passage in which would you like to be?
(b) How do animals feel when they are kept in the cage?

Q.19 Look at the picture and answer these questions.

- (a) What is the function of this organ?
- (b) Which internal system it is a part of?
- (c) This is sense organ. (T/F)
- (d) There are _____ holes in nose.

(1.5)

(1.5)

(1)

(1)



AD