

NORTH-EX PUBLIC SCHOOL
(Senior Secondary, Affiliated To CBSE)
School Block, Jain Nagar, Sector-38, Rohini, Delhi – 81
Half yearly Examination (2023-2024)
CLASS –III
Subject- ENGLISH

Time – 2 hours

MM-50 marks

Name _____

Roll No. _____

Class & Section _____

Date _____

Day _____

Sign. Of invigilator _____

Sign. Of checker _____

General instructions:-

- Read each questions carefully and follow the instructions.
- Attempt all questions compulsory.
- This paper contains 4 sections:- Section-A, Section-B,Section-C, section-D

Section – A

Unseen Passage

Q. 1 Read the questions carefully and answers the following questions – (5)

After two years, games were going to be held in Vijay's school. He was very curious as he wanted to participate in it. For this, he worked hard for several months.

He was a good player in cricket as well as football so he wanted to participate in both games but unfortunately, he got selected only for the cricket match.

His heart was beating very fast the day the match started. That day, he wore a green t-shirt and blue pants.

He played the match very well and won. He himself scored 104 runs in 55 balls.

Questions –

- a. After how many years games were held in Vijay's school?
 1. 3 years
 2. 2 years
 3. 5 years
- b. He wanted to participate in:
 1. Cricket
 2. Football
 3. Both
- c. What did Vijay wear that day?
 1. Green t-shirt and blue pants
 2. Yellow t-shirt and white pants
 3. White t-shirt and brown pants

d. He was a good player in:

1. Football
2. Cricket
3. Both

e. He scored:

1. 102 runs
2. 103 runs
3. 104 runs

Q.2 Read the questions carefully and answer the following questions – (5)

Everyone likes ice cream. Ice cream is a type of kulfi that is made by mixing milk, dry fruits, cream, sugar, and fragrance.

Although there are many flavors of ice cream, but some are very popular like vanilla, strawberry, butterscotch, chocolate, etc.

Most people use the freezer of the refrigerator to make ice cream, but some use ice cream-making machines.

To make delicious ice cream, useful ingredients are mixed in the right proportion.

Questions –

a. Which are the important ingredients for making ice-cream?

Ans. _____

b. Which are the most popular flavours of ice-cream ?

Ans. _____

c. What should we use to make delicious ice-cream?

Ans. _____

d. What is the use of freezer in making ice-cream?

Ans. _____

e. Who likes ice cream?

Ans. _____

Section - B
Grammar

(2)

Q. 3 Do as directed -

- a) He lives in a _____ cottage. (Adjective of quality)
- b) As solid as _____.
- c) I can't talk to you. Please _____. (hang out/hang up)
- d) Don't touch , it is _____ favourite pen. (his/ she)

(1)

Q. 4 Change the gender -

- a) God- _____
- b) Bull- _____

Q. 5 Add prefixes to make new words - (1)

- a) agree - _____
- b) able - _____

Q. 6 Add suffixes to make new words - (1)

- a) free - _____
- b) beauty - _____

Q. 7 Write pronouns for the following nouns - (2)

- a) Shikha - _____
- b) Fan - _____
- c) Rahul and Mayur - _____
- d) Hardik - _____

Q. 8 Write homophones for the followings -(1)

- a) hour - _____
- b) bowl - _____

Q. 9 Write synonyms for the following- (1)

- a) picture - _____
- b) happy - _____

Q. 10 Change the number - (1)

- a) Key- _____
- b) Box - _____

Section - C

Literature

Q. 11 Word Meaning -(3)

a) bother - _____

b) upset - _____

c) lonely - _____

Q. 12 Answer the following questions - (1.5 X 3=6)

a) Why did the farmer decide to let the donkey die in the well?

Ans.

b) Why do you think animals were so happy in the end?

Ans.

c) Why was Chuijul unhappy with her tail?

Ans.

d) Why did the farmer invite his all neighbours?

Ans.

Q. 13R.T.C. (3)

Read the lines carefully and answer the following questions –

And I said I want another

Little brother for a change.

a) Who is the speaker of these lines?

Ans. _____

b) What is the name of this poem?

Ans. _____

c) Whom is the speaker saying this to?

Ans. _____

Q. 14 Read the passage carefully and answer the following questions – (4)

Chulbul was really worried. With great difficulty she managed to walk out of the door. She was finding it difficult to walk with her heavy tail.

a) Name the lesson, from where these lines are taken?

Ans. _____

b) What was the name of the squirrel ?

Ans. _____

c) What was she finding difficult?

Ans. _____

d) Who was Dr. Bombo?

Ans. _____

Q. 15 Observe the picture and make 4 sentence by using given words.(4)



Rainy season umbrellas car enjoying

1.

2

3

4

Section – D

Writing

Q. 16 Write a letter to your cousin inviting him to join for Nainital trip with you. (5)

OR

Write an application for leave to attend family function.

NORTH EX PUBLIC SCHOOL
(Senior Secondary, Affiliated to CBSE)
School Block, Jain Nagar, Sector- 38
Rohini, Delhi -81
Half Yearly Examination (2023-24)
CLASS – III
हिन्दी

समय: 2घंटे

अ.अंक -50

नाम : _____

अनुक्रमांक: _____

कक्षा: _____

दिन: _____

दिनांक _____

पर्यवेक्षक हस्ताक्षर: _____

जॉचकर्ता हस्ताक्षर: _____

सामान्य निर्देश-

- सभी प्रश्न के उत्तर लिखना अनिवार्य है।
- इसके प्रश्न पत्र के चार खंड हैं- खंड-क, खंड-ख, खंड-ग और खंड घ
- सभी प्रश्नों के अधिकतम अंक उनके सामने निर्दिष्ट हैं।
- खंड-क में अपठित गद्यांश, खंड-ख में व्यवहारिक व्याकरण, खंड-ग में पाठ्यपुस्तक और खंड घ में लेखन भाग से संबंधित प्रश्न पूछे गए हैं।
- कार्य स्पष्टता से करें तथा लिखाई का ध्यान रखें।

खंड-क (अपठित गद्यांश)

प्रश्न 1. निम्नलिखित गद्यांश को पढ़कर पूछे गए प्रश्नों के उत्तर पर निशान लगाइए। (5)
कश्मीर की घाटी संसार की सुंदर घाटियों में से एक है यहाँ कहीं पहाड़ों में से गिरते झरने दिखाई देते हैं तो कहीं भीठे पानी की झीलें हैं। कहीं केसरकी क्यारियाँ हैं तो कहीं धान के हरे भरे खेत हैं। यहाँ चिनार के विशाल वृक्ष हैं। यहाँ सेब भरपूर मात्रा में होता है। कश्मीर का 'बाग बादशाह जहांगीर ने लगवाया था।

प्रश्न 1 कश्मीर की घाटी कैसी है ?

क. संसार की सबसे सुंदर घाटी

ख. संकरी घाटी

ग. पथरीली

प्रश्न 2 झरने कहा गिरते दिखाई देते हैं ?

क. पहाड़ों से

ख. वृक्षों से

ग. मैदानों से

प्रश्न 3 यहाँ किसकी क्यारियाँ हैं?

क. धान की

ख. केसर की

ग. फूलों की

प्रश्न 4 कौन से वृक्ष विशाल है ?

क.नीम

ख.चिनार

ग.बरगद

प्रश्न 5 शालीमार बाग किसने लगवाया था ?

क. जहाँगीर ने

ख. शाहजहाँ ने

ग. अकबर ने

प्रश्न:- 2 निम्नलिखित गद्यांश को पढ़कर नीचे लिखे प्रश्नों के उत्तर लिखिए:- (5)

नारियल बहुत ही उपयोगी पेड़ है। नारियल का पेड़ बहुत ऊँचा होता है। यह समुद्र के पास रेतीली जमीन में उगता है। नारियल का पानीमीठा और स्वादिष्ट होता है। इसके पत्तों से चटाइयाँ और टोकरियाँ बनती हैं। नारियल के फल को श्रीफल कहते हैं। इसे पवित्र फल माना जाता है। इसीलिए यह पूजा में काम आता है। इसे मंदिरों में चढ़ाया जाता है।

प्रश्न 1 नारियल का पेड़ कैसा होता है?

प्रश्न 2 नारियल कहाँ उगता है?

प्रश्न 3 नारियल का पानी कैसा होता है?

प्रश्न 4 नारियल के फल को क्या कहते हैं?

प्रश्न 5 नारियल के पत्तों से क्या-क्या बनाया जाता है?

खंड ख (व्यवहारिक व्याकरण)

प्रश्न 3 निम्नलिखित अशुद्ध शब्दों को शुद्ध करके लिखिए।

क) पुशतक - _____

(1)

ख) दोश - _____

प्रश्न 4 निम्नलिखित शब्दों के विलोम शब्द लिखिए।

क) दोस्त - _____

(1)

ख) कट्या - _____

प्रश्न 5 दी गई भाषाओं से एक-एक शब्द बनाओ।

• औ - _____

(1)

• ऊ - _____

प्रश्न 6 किसी व्यक्ति, वस्तु, स्थान, पशु, भाव के नाम को _____ कहते हैं।

(1)

प्रश्न 7 लिंग परिवर्तन करके वाक्य दोबारा लिखो
क. बालिका गा रही है।

(1)

ख. मोर नाच रहा है।

(1)

प्रश्न 8 निम्नलिखित अंकों को हिंदी में लिखें

क. 5 - _____

ख. 17 - _____

प्रश्न 9 जो शब्द स्त्री या पुरुष जाति के होने का बोध कराएँ, उसे _____ कहते हैं। इसके भेद _____ हैं।

(2)

प्रश्न 10. भाववाचक संज्ञा के चार उदाहरण लिखो ? (2)

खंड ग (पाठ्य पुस्तक)

(3)

प्रश्न 11 दिए गए शब्दों के अर्थ लिखें।

क. आनंद - _____

ख. फायदा - _____

ग. दीपक - _____

(6)

प्रश्न 12 दिए गए प्रश्नों के उत्तर लिखें।

क. बालश्रम किसे कहते हैं?

ख. छोटी-छोटी क्यारियाँ में कौन-कौन सी सब्जियाँ लगी हैं?

ग. चुनुआ की जान में जान कब आई?

घ. थोड़ी चमक से क्विपिरी का क्या मानना है?

प्रश्न 13 पाठ आधारित प्रश्न पक्तियों ध्यानपूर्वक पढ़िए और उत्तर दीजिए।

(3)

आओ तुमको कथा सुनाएँ,
मन के सारे भेद मिटाएँ ।
थोड़ी चमकेभले दिवाली,
पर मिट्टी के दीए जलाएँ ।

क. इस कविता का नाम लिखें?

ख. इस कविता की कवयित्री का नाम लिखें?

ग. कुम्हार क्या बनता है?

प्रश्न 14 दिए गए गद्यांश को ध्यानपूर्वक पढ़िए और प्रश्नों के उत्तर दीजिए ।

(4)

एक घने जंगल में एक शेर और उसके चार सेवक लोमड़ी, चीता, चील और भेड़िया रहते थे ।
लोमड़ी शेर की मंत्री थी । चीता राजा का अंग रक्षक था । वह सदा उसके पीछे चलता था । चील
दूर तक उड़कर समाचार लाती थी ।

क. जंगल की चापलूस मंडली का नाम लिखो?

ख. शेर का मंत्री कौन था?

ग. शेर के लिए समाचार कौन लाता था?

घ. शेर का अंग रक्षक कौन था?

प्रश्न 15 चित्र को ध्यान पूर्वक देखिए और इससे संबंधित चार वाक्य लिखिए ।

(4)



खंड-घ (लेखन)

प्रश्न 16 किसी एक विषय पर अनुच्छेद लिखिए ।

(5)

प्रदूषण
या
सिद्धिविनायक मंदिर

प्रश्न 17 किसी एक विषय पर पत्र लिखो ।

(5)

शिक्षा में अपनी प्रगति के बारे में बताते हुए अपने दादाजी को पत्र लिखो ।

या

सचचाई का महत्व बताते हुए अपने छोटे भाई को पत्र लिखो ।

A large rectangular box containing 20 horizontal lines, intended for writing.

Kochi
Dalya

NORTH-EX PUBLIC SCHOOL
(Senior Secondary, Affiliated To CBSE)
School Block, Jain Nagar, Sector-38, Rohini, Delhi – 81
Half yearly Examination (2023-2024)

CLASS –III
Subject- Mathematics

Time –2 hours

M.M.50 marks

Name _____

Class & Section _____

Sign. Of invigilator _____

Date _____

Roll No. _____

Day _____

sign. Of checker _____

General instructions:-

- Read each questions carefully and follow the instructions.
- Attempt all questions compulsory.

Section – A

(10 Marks)

Q.1) $9 \times 5 =$ _____

Q.2) $23 \times 10 =$ _____ $\times 23$

Q.3) Multiplication is _____ addition.

Q.4) There are 5 apples in 1 basket. How many apples will be there in 8 such baskets?

a) 40

b) 41

c) 42

Q.5) In $56 \div 7$, the quotient is :

a) 56

b) 8

c) 7

Q.6) Which shape has 6 sides and 6 vertices?

Q.7) What is the point called where two lines cut each other?

Q.8) $2200 \div 100 =$ _____

Q.9) _____ $\times 5 = 55$

Q.10) When we multiply any number by zero what is the product?

Section – B

(10 Marks)

(1X4=4)

Q.11) Solve the following questions –

a) 15×22

b) $458 \div 7$

c) 167×29

d) $3450 \div 10$

Q.12 Find the product by using lattice multiplication.

(2X2=4)

a) 23×12

b) 17X10

Q.13 Fill in the missing number –

(2)

$$\begin{array}{r} \text{H T O} \\ _ 4 _ \\ \times 3 \\ \hline 7 _ 1 \\ \hline \end{array}$$

Section -C
(10 Marks)

Q.14) 500 kg of toor dal is packed in 10 packets, each having equal quantity. What is the amount of dal each packet has? (2.5)

Q.15) Anshu can pack 345 toys in one day. How many toys can she pack in 20 days? (2.5)

Q.16) Jatin has 28 apples. He distributes them equally with 7 children in an orphanage. How many apples does each child get? (2.5)

Q.17) In the international yoga day celebration 455 girls and 368 boys participated in the event in school. How many students in all participated in the event? (2.5)

Section - D

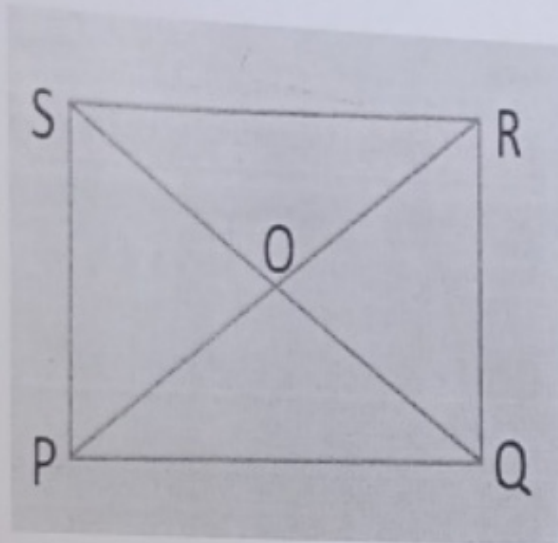
(20 Marks)

Q.18 Draw a triangle and rectangle. Write their number of sides.

(2.5X2=5)

Q. 19 Observe the figure and answer the following questions -

(1X5=5)


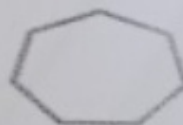
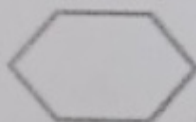



- a) Measure QR _____ and PS _____ are they equal to each other? (Yes/No)
- b) Measure PR _____ and RS _____ are they equal to each other? (Yes/No)
- c) In this figure, opposite sides are _____.
- d) Name the point where PR and QS intersect. _____
- e) What is the length of OP? _____

Q. 20 If your father has 500 rupees and he distributes them equally among you and your 1 sibling.. How much amount do each of you have ? Write your answer in words also. (5)

Q.21) Identify the following shapes and write their names.

(1X5=5)



- a) _____ b) _____ c) _____ d) _____ e) _____

NORTH-EX PUBLIC SCHOOL
(Senior Secondary, Affiliated To CBSE)
School Block, Jain Nagar, Sector-38, Rohini, Delhi – 81
Half yearly Examination (2023-2024)
CLASS –III
Subject- EVS

Time – 2 hours

MM-50

Name _____

Class & Section _____

Sign. Of invigilator _____

Date _____

Roll No. _____

Day _____

Sign. Of checker _____

GENERAL INSTRUCTIONS:-

- Read each questions carefully and follow the instructions.
- Attempt all questions compulsory.
- This paper contains 4 sections:- Section-A, Section-B,Section-C, section-D

SECTION -A

- Q.1 A place in the community where people come together to read different books. (1)
a. Park b. Reading c. social welfare club
- Q.2 To keep the house free from germs and dust we should use. (1)
a. Disinfectant b. Perfume c. Talcum powder
- Q.3 A park is a place where people play and relax. (T/F) (1)
- Q.4 The construction of a house does not depends on climate. (T/F) (1)
- Q.5 A _____ fixes taps and pipes. (1)
- Q.6 _____ are a way of communicating feelings and ideas using expressions and bodily actions. (1)
- Q7 Matching- (1)
a) Aeroplane 1. Ports
b) Ships 2. Hangars
- Q.8 Who invented first model of car? (1)

- Q.9 What is the fastest means of communication? (1)

- Q.10 Where are Ikra houses found? (1)

SECTION-B

Q-11 Answer these in brief:-

(2)

a) What is the meaning of volunteers?

b) State any two ways by which we can keep our house clean and safe?

(2)

Q-12 Answer the following questions -

(2)

a) What is the work of Non - Government Organization?

b) What role does the internet play in our daily life?

(2)

Q-13 Describe the different kinds of household chores. Why should members of household share household chores?

(2)

SECTION -C

Q-14 Answer in detail -

(2.5)

a) Why do we need house?

b) What is Braille?

(2.5)

c) What is cuisines?

(2.5)

d) What does an architect do?

(2.5)

SECTION -D

Q.15 Study the picture and give answer.

(5)



1) What problem do you see in the picture?

2) Who will be able to fix this problem?

Q.16 Study the picture and give answer.

(5)



1. Which form of communication is shown in the picture?

2. What do you need for having this type of communication?

Q.17 Draw a diagram of most popular medium of mass communication.

(5)

Q 18 Read the passage carefully and give answer.(5)

The Wright brothers were among the first two successfully ride an aeroplane in 1903. With help of aeroplanes , we can travel to different countries around the world. We can travel long distances in a short time. Amelia Earhart was the first woman pilot to travel solo across the Atlantic Ocean.

1. Who invented Aeroplane and when?

2. How are aeroplanes useful for us?
