

NORTH-EX PUBLIC SCHOOL
(Senior Secondary, Affiliated To CBSE)
School Block Jain Nagar, Sector – 38, Rohini, Delhi
Half yearly Examination (2023-2024)
CLASS –IV
Subject- ENGLISH

Time - 2 hours

MM-50

Name _____

Roll No. _____

Class & section _____

Date _____

Day _____

Sign. Of invigilator _____

Sign. Of checker _____

General instructions:-

- Read each question carefully and follow the instructions.
- Attempt all questions compulsory.
- This paper contains 4 sections: - Section-A, Section-B, Section-C, section-D

SECTION –A UNSEEN PASSAGE

Q-1 Read the following unseen passage and choose the correct answers.

(5)

Kavita's brother is very lazy. His name is Vishal and he is fourteen years old. He wakes up late every morning at around nine. He gets ready very quickly within 20 minutes.

His online classes start at 10 am and end at 3 pm. During his classes, he looks very sad and inactive. He has lunch around 1 o'clock. After having lunch, he rests for 20 minutes as the classes are closed for a while.

As the online classes end, he stands up and runs to play a cricket match. It's one of his favourite games. Some time back, he used to play football but due to an accident, he doesn't like that game. He completes his homework at night and always eats dinner after completing his work.

QUESTIONS –

I. What is the name of Kavita's brother?

(a) Rohit ()

(b) Mohit ()

(c) Vishal ()

II. At what time does Vishal take his lunch?

(a) 1 o'clock ()

(b) 5 o'clock ()

(c) 3 o'clock ()

III. After lunch, he rest for?

(a) 20 minutes ()

(b) 30 minutes ()

(c) 40 minutes ()

IV. What is the name of his favourite game?

(a) Football ()

(b) cricket ()

(c) tennis ()

V. When does he complete his work?

(a) Night ()

(b) morning ()

(c) afternoon ()

Q-2 Read the following unseen passage and write the correct answer.

(5)

We all love our mothers very much. They keep us in the stomach for nine months, then give birth to us. That's why mothers love their children very much. They keep us away from social evils and try to make us good citizens.

Our mothers work day and night without any salary. They are our mothers as well as our teachers and our best friends. They listen to us good stories and sometimes sing lullabies too.

To work selflessly, to be hardworking, to be courageous, and to have the spirit of sacrifice are the qualities of our mothers.

Question –

1. How many months do the mother keep us in the stomach?

2. What do the mothers love the most?

3. Who works day and night without any salary?

4. What do mothers sometimes sing?

5. What are the qualities of our mother?

SECTION -B GRAMMAR

Q-3 Identify the kind of sentence.

- a) Stop! _____
b) Is it a holiday today? _____

(1)

Q-4 Circle the abstract noun.

- a) The party was full of fun.
b) Animal like freedom.

(1)

Q-5 Fill in the blanks with demonstrative pronouns.

- a) Is _____ your mother? (that/those)
b) _____ is our new home. (that/these)

(1)

Q-6 Underline the verb then writes (A) for action verb, (L) for linking verb and (H) for Having verb. (2)

- a) We have a pet.
b) They sat on the mat.

Q-7 Fill in the blanks with the correct form of the verb in present continuous tense.

- a) Rohan _____ (is/am/are) from India.
b) I _____ (is/am/are) reading.

(1)

Q- 8 Write the correct articles.

- a) _____ hour
b) _____ Indian Ocean

(1)

Q-9 Write the antonyms.

- a) Fat _____
b) Forget _____
c) Despair _____
d) Exclude _____

(2)

Q-8 Write the synonyms.

- a) Mask _____
b) Look _____
c) Tiny _____
d) Rich _____

(2)

SECTION -C LITERATURE

Q-11 Write meanings of the following words.

(3)

- a) Devoured _____
- b) Terrible _____
- c) Hamlet _____

Q-12 Answer these questions.

(6)

a) What does 'on either hand' mean?

b) Who told her interesting tales?

c) Why did the Miller's wife tell him that he mustn't go to church?

d) Which thing has Grandma disappeared?

Q-13 R.T.C.

(3)

"It is a miracle of God."

a) What was the miracle that took place?

b) Why did this miracle happen?

Q-14 Read the given passage and answer the following question.

(4)

In a little hilly hamlet of southern India, lived a young girl called Bulbuli. She lived in a hut with her mother. Her house was surrounded by the tallest and greenest trees you would have ever seen. She loved to take in deep breaths every morning as the air carried all kinds of different aromas. Sometimes she could smell a sweet, sweet fragrance. At other times it was a strong and sharp scent.

QUESTIONS -

a) Who was Bulbuli?

b) Where did Bulbuli live?

c) With whom did Bulbuli live?

d) Write the meaning of aromas?

Q-15 Look at the picture given below. Frame four sentences.



SECTION - D WRITING

Q-16 Write any one.

Write a paragraph on "Mata Vaishno Devi".

(5)

OR

Write a paragraph on "True Friend".

(5)

Q-17 Write any one.

Write a letter of apologize to your mother.

OR

Write a letter to your grandparents to tell them about your excellent result.

NORTH EX PUBLIC SCHOOL
(Senior Secondary, Affiliated to CBSE)
School Block, Jain Nagar, Sector-38 Rohini, Delhi-81
Half Yearly Examination (2023-24)
CLASS - IV
हिन्दी

समय: 2 घंटा

नाम: _____

कक्षा: _____

पर्यवेक्षकहस्ताक्षर: _____

सामान्य निर्देश-

अधिकतमअंक-50

अनुक्रमांक: _____

दिन: _____

परीक्षक हस्ताक्षर: _____

- सभी प्रश्न के उत्तर लिखना अनिवार्य है।
- इसके प्रश्न पत्र के चार खंड हैं- खंड-क, खंड-ख, खंड-ग और खंड-घ।
- सभी प्रश्नों के अधिकतम अंक उनके सामने निर्दिष्ट हैं।
- खंड-क में अपठित गद्यांश, खंड-ख में व्याकरण, खंड-ग में पाठ्यपुस्तक और खंड-घ में लेखन भाग से संबंधित प्रश्न पूछे गए हैं।
- कार्य स्पष्टता से करें तथा लिखाई का ध्यान रखें।

खंड-क (अपठित गद्यांश) (10)

प्रश्न-1 अपठित गद्यांश के आधार पर निम्न प्रश्नों के उत्तर दीजिए:-

(5)

जल और जीवन का आपस में गहरा संबंध है। बड़े-बड़े नगर नदियों के किनारे ही बसे हुए हैं। आजकल मनुष्य नदियों और झीलों में तैरकर अपना मनोरंजन करता है। प्राचीन काल में मनुष्य तैरकर ही नदियों को पार करता था। तैराकी अपने आप में कला के साथ-साथ अच्छा व्यायाम भी है। आजकल तैराकी के कई प्रकार प्रचलित हैं ?

1. जल और जीवन का आपसमें कैसा संबंध है?

- (क) गहरा (ख) कच्चा
(ग) पक्का (घ) सच्चा

2. बड़े-बड़े नगर कहां बसे हुए हैं ?

- (क) समुद्र के किनारे (ख) नदियों के किनारे
(ग) मैदानों के किनारे (घ) पहाड़ के नीचे

3. प्राचीन का विलोम शब्द क्या है ?

- (क) नवीन (ख) अचीन
(ग) पुराना (घ) पुरा

4. तैराकी अपने आप में क्या है?

- (क) व्यायाम (ख) कला और व्यायाम
(ग) शौक (घ) मनोरंजन

5. संज्ञा शब्द कौन सा है ?

- (क) मनुष्य (ख) साथ
(ग) भी (घ) आप

प्रश्न-2 अपठित गद्यांश के आधार पर निम्न प्रश्नों के उत्तर दीजिए :-

(5)

मीना गर्मी की छुट्टियों में अपनी नानी के गाँव गई। नानी के गाँव में चारों ओर बहुत हरियाली थी। गाँव के पास में एक नदी भी थी। एक दिन मीना नानी के साथ गाँव की सैर पर निकली। मीना ने गाँव के हरे-भरे खेत देखें, नीम के पेड़ पर झूला, बहुत सारे आम खाए। नदी में नाव से सैर भी की। मीना को नानी के गाँव में बहुत मज़ा आया।

1. मीना गर्मी की छुट्टियों में कहाँ घूमने गई थी?

2. मीना ने नानी के गाँव में क्या-क्या किया?

3. क्या आपने भी गाँव की सैर की है?

4. रिक्त स्थानों की पूर्ति कीजिए :-

1. गाँव में चारों ओर बहुत _____ थी।

2. मीना को नानी के गाँव में बहुत _____ आया।

खंड-ख व्यावहारिक व्याकरण (10)

प्रश्न-3 रिक्त स्थान की पूर्ति कीजिए-

(1)

1. हिंदी में _____ (तेरह/ ग्यारह) स्वर हैं।

2. गुरुमुखी _____ (पंजाबी / देवनागरी) भाषा की लिपि है।

प्रश्न-4 निम्नलिखित वाक्यों में संज्ञा शब्द पर रेखांकित कीजिए-

(1)

1. बगीचा बहुत सुंदर है।

2. किसी की बुराई मत करो।

प्रश्न-5 दिए गए शब्दों के लिंग बदलिए।

(1)

1. बाल - _____

2. बच्चा - _____

प्रश्न-6 दिए गए शब्दों के वचन बदलिए।

(1)

1. छाता - _____

2. मैं - _____

प्रश्न-7 दिए गए शब्दों का शुद्ध करके लिखिए।

(1)

1. करम - _____

2. परीवार - _____

प्रश्न-8 "छ" वाले दो शब्द लिखिए _____, _____

(1)

प्रश्न-9 प्रश्नों के उत्तर दीजिए - .

(2)

1. कुछ शब्द स्त्री और पुरुष दोनों के लिए उपयुक्त होते हैं ? कोई दो नाम लिखिए।

2. 'उत्तर' का अनेकार्थी शब्द लिखिए।

(2)

प्रश्न-10 निर्देशानुसार उत्तर दीजिए।

1. "नाक में दम करना" मुहावरे का अर्थ लिखिए।

2. "जो शिकार करता हो।" अनेक शब्दों के लिए एक शब्द " में उत्तर दीजिए।

3. 'बहादुर' का विलोम शब्द लिखिए।

4. 'हवा' के दो-दो पर्यायवाची लिखिए।

खंड- ग पाठ्यपुस्तक (20)

(3)

प्रश्न-11 दिए गए शब्दों के अर्थ लिखिए-

1. गड़-गड़ - _____

2. प्रदूषित - _____

3. हिम्मत - _____

(6)

प्रश्न-12 दिए गए प्रश्नों के उत्तर दीजिए-

1. बादलों को गरजते देखकर मोर क्या करता है ?

2. नदी तट पर आने वाले जानवरों से कोपो और जंबो क्या आग्रह करते थे?

3. नक्षत्रों के द्वारा आप क्या जान सकते हैं?

4. सभी त्योहार हमें क्या संदेश देते हैं?

(3)

प्रश्न-13 दिए गए प्रश्नों में अपने विचारों को व्यक्त कीजिए-

1. गाजर में कौन-कौन से विटामिन पाए जाते हैं ?

2. "हम सब समान एक उपवन के" का क्या अर्थ है ?

प्रश्न-14 चित्र को ध्यान पूर्वक देखिए और चार वाक्य लिखिए।

(4)



उत्तर 14)

प्रश्न-15 दिए गए गद्यांश को ध्यानपूर्वक पढ़िए और प्रश्नों के उत्तर दीजिए :-

(4)

फलों जैसे अमरूद, संतरा, तरबूज, खीरा आदि की तासीर ठंडी होती है। ऐसे फलों को शाम, रात या भोर के समय नहीं खाना चाहिए। कुछ फलों, जैसे-आम, लीची आदि की तासीर गर्म होती है। ऐसे फलों को खाने से पहले कुछ समय तक पानी में भिगोकर रखना चाहिए। फिर साफ कर खाने में प्रयोग में लाना चाहिए।

1. किन फलों की तासीर ठंडी होती है?

2. ठंडी तासीर वाले फलों को किस समय नहीं खाना चाहिए?

3. किन फलों की तासीर गर्म होती है ?

4. फलों को खाने से पहले किसमें भिगोकर रखना चाहिए ?

खंड- घ लेखनभाग (10)

प्रश्न-16 किसी एक विषय पर अनुच्छेद लिखिए।

(5)

विद्यालय का पहला दिन
या
नीलकंठ मंदिर

प्रश्न-17 किसी एक विषय पर पत्र लिखिए।

(5)

अवकाश के लिए प्रधानाचार्या जी को प्रार्थना पत्र लिखिए।

या

पंचतंत्र की कहानी की पुस्तकें भेजने के लिए धन्यवाद देते हुए नानाजी को पत्र लिखिए।

A sheet of white paper with a black border. The top portion of the page contains a series of horizontal lines for writing, while the bottom portion is blank.

NORTH-EX PUBLIC SCHOOL
(Senior Secondary, Affiliated To CBSE)
School Block, Jain Nagar, Sector-38, Rohini, Delhi – 81
Half Yearly Examination (2023-24)
Class -IV
Maths

Time → 2 hours

M.M. → 50 marks

Name : _____

Roll No: _____

Class & section : _____

Date : _____

Day : _____

Sign. Of invigilator: _____

Sign. Of checker : _____

General Instructions:-

- Read each questions carefully and follow the instructions
- Attempt all questions compulsory
- Section -A question no.1&2 carries 0.5 mark each and question no 3 to 10 carries 1 mark each.
- Section -B question no. 11 to 13 carries 2 mark each.
- Section -C question no.14 to 17 carries 2.5 marks each.
- Section -D question no. 18 to 21 carries 5 marks each.

Section -A (12marks)

Q-1 Choose the correct option :-

(2)

- 1) The largest five digit number is _____
a) 99999 b) 10000 c) 9998
- 2) Convert into Rs. 75p. = _____
a) Rs. 75 b) Rs. 7.5p c) Rs. 0.75p
- 3) $41,820 + \underline{\quad} = 41,821$
a) 10 b) 11 c) 1
- 4) $4210 \times 3406 = 4210 \times \underline{\quad}$
a) 4210 b) 3406 c) 200

Q-2 Fill in the blanks:-

(2)

- 1) For Simplification we use **DMAS** in which "A" stands _____.
- 2) ABA, BCB, CDC, _____.
- 3) 1 minute = _____ seconds.
- 4) $7 \times 7 = \underline{\quad}$.

Q-3 Write in expanded form of 21096

(1)

Q-4 Write in Roman Numerals of 35 _____.

(1)

Q-5 Fill in the blanks with a.m. or p.m.

(1)

- 1) I brush my teeth at night at 09:30 _____.
- 2) We have our dinner at 09:00 _____.

Q-6 Write in words Rs. 6.55

(1)

Q-7 write the number in figures:

(1)

Seventeen thousand seven hundred ninety – three.


Q-8 Calculate the time taken:

(1)

- a) Reema went to buy milk at 7:15 a.m. and came back at 7:30 a.m. _____.
- b) In afternoon, I lie down at 1:45 p.m. and get up at 02:45 p.m. _____.

Q-9 Draw the line of symmetry:-

(1)



Q-10 Fill in the blanks with <, > or =

(1)

- 1) 2×8 _____ 6×1 .
- 2) 10×20 _____ 40×50

Section -B (10 marks)

Q-11 Arrange the following:-

(2)

- 56098, 65890, 65980, 56908, 56980 (in ascending order)
- 102001, 120010, 100201, 121000, 102100 (in descending order)

Q-12 Answer the following questions:-

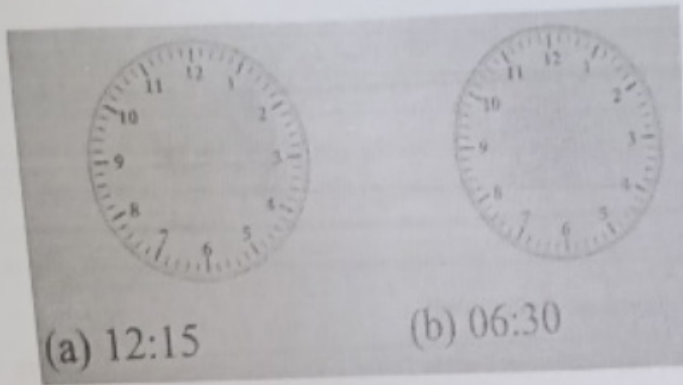
(2)

- Write the predecessor and successor of 42700.
Predecessor _____, Successor _____.
- Using the digits given below, form the greatest and Smallest numbers
1, 5, 9, 0, 6
Greatest number = _____, Smallest number = _____
- Solve $5908 + 4509 - 7560 =$

(2)

Q-13 Draw the hands of the clocks to show the time:-

(2)



Section -C (10 marks)

Q-14 Meera learns 147 words in a week. How many words does she learn in a day? (2½)

Q-15 Divide and cross check your answer. (2½)

64893 ÷ 100

Q-16 An electric iron costs Rs. 700.05. What will be the price of 5 such irons? (2½)

Q-17 Solve (2½)

a) 59 minutes – 27 minutes.

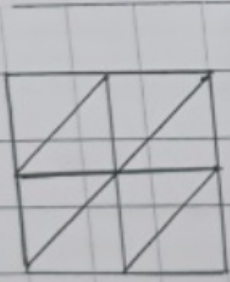
b) 32 hours 45 minutes + 24 hours 28 minutes

Section -D (20marks)

Q-18 Shelly has two 2000 rupees notes , five 500-rupees notes , nine 100-rupee notes , six 50-rupees notes , four 20-rupees notes , seven 10-rupees notes and six 5-rupees coins .How much money does she have ? (5)

Q-19 Convert : a) 4 weeks into days b) 3600 minutes into hours and minutes (5)

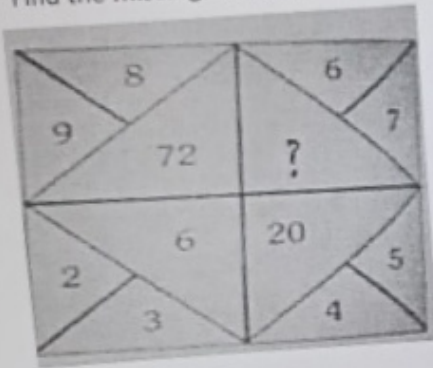
Q-20 Multiply using the Lattice method 53×14 (5)



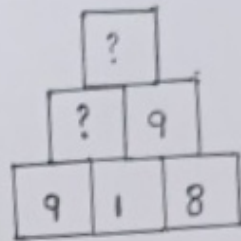
Q-21 Read the question carefully and answers the following questions

(5)

1) Find the missing numbers



2)



NORTH-EX PUBLIC SCHOOL
(Senior Secondary, Affiliated To CBSE)
School Block, Jain Nagar, Sector-38, Rohini, Delhi – 81
Half Yearly Examination (2023-24)
Class -IV
EVS

Time – 2 hours

Name : _____

Class & section : _____

Sign. Of invigilator: _____

Date : _____

M.M. – 50

Roll No: _____

Day : _____

Sign. Of checker : _____

General Instructions:-

- Read each question carefully and follow the instructions.
- Attempt all questions compulsory.
- Section -A question no.1 to 10 carries 1 mark each. (Total -10 marks)
- Section -B question no. 11 to 13 carries 2 mark each. (Total- 10 marks) *part*
- Section -C question no.14 carries 2.5 marks each part. (Total-10 marks)
- Section -D question no. 15 to 18 carries 5 marks each. (Total- 20 marks)

SECTION -A

Q1 An _____ designs the plan of a building or houses.

Q-2 Oceans and sea have _____ water.

Q-3 _____ is the outer covering of seed.

Q-4 Write one example of taproots. _____

Q-5 A plumber lays the bricks. (T/F)

Q-6 An ostrich cannot run. (T/F)

Q-7 _____ is free meals served at the gurudwaras.

Q-8 Which is an ancient stepwell in New Delhi? _____

Q-9 Multi storeyed buildings are found in _____ areas.

Q-10 Different birds have different types of beaks. (T/F)

SECTION –B

Q-11 Answer these in brief -

a) What are nutrients?

b) Write two names of scavengers bird?

Q-12 Answer these questions-

a) What is the main aim of a Langer?

b) Name few tools required to build a house.

Q-13 Match the following-

- | | |
|------------------------|----------------------|
| 1) Malnutrition | a) Gurudwaras |
| 2) Langars | b) Govt. Schools |
| 3) Mid Day Meal scheme | c) Lack of nutrition |
| 4) Locality | d) Neighbourhood |

SECTION -C

Q-14 Answer these in details-

a) Explain the process of water cycle?

b) Differentiate between rural and urban houses.


c) Why do you think eating together with family is important?

d) Differentiate between aquatic and arboreal animals.

SECTION - D

Q-15 Draw the diagram of water cycle and label them.

Q-16 Look at the picture and answer these questions .



1. What is shown in the picture?

2. How does it help in purifying the water ?

Q.17 Look at the picture and answer these questions.



1. Name few occasions when we eat together with our family and friends.

2. How does sharing our meals help us?

Q.18 Read the passage carefully and answers the following questions-

Some animals, for example, tigers, zebras, grasshoppers can hide themselves by merging with their surroundings. This property is called camouflage. Camouflage makes these animals hard to spot and saves them from enemies and poachers.

1. What is camouflage?

2. Who are poachers?

3. Write the name of three animals who can hide themselves by merging with their surroundings?

4. Why do animals camouflage?

5. Do you think, camouflaging is a special feature?
