



Total No. of Questions : 37

Total No. of Printed Pages : 2

Map of India

Reg. No.

--	--	--	--	--	--	--	--	--	--

Part – III
HISTORY
Paper – I
(English Version)

Time : 3 Hours

Max. Marks : 100


Note : Read the following instructions carefully :

- (i) **Section – 'A'** consists of "Long answer type" questions. Every answer may be limited to **40** lines. **Each** question carries **10** marks.
- (ii) **Section – 'B'** consists of "Short answer type" questions. Every answer may be limited to **20** lines. **Each** question carries **5** marks.
- (iii) **Section – 'C'** consists of "Very short answer type" questions. Every answer may be limited to **5** lines. **Each** question carries **2** marks.
- (iv) Answer **ALL** questions one after another in the **same** order.

SECTION – A

(3×10=30)


I. Answer **ANY THREE** of the following questions.

- 1) Describe the main teachings of Buddhism and its impact on Indian Society.
- 2) Why Gupta period was called 'Golden Age' ? 
- 3) Describe the salient features of Mughal administration.
- 4) Describe the achievements of Srikrishna Devaraya.
- 5) Write an account of Non-cooperation Movement in India.

SECTION – B

(8×5=40)

II. Answer **ANY EIGHT** of the following questions. Question No. 17 of Map is compulsory.

- 6) Critically assess the importance of literary sources in writing Indian History.
- 7) Write about Harappan script.
- 8) What were the factors contributed for the rise of Magadhan Empire ?
- 9) What do you understand by Ashoka Dhamma ? 
- 10) Describe the greatness of Goutamiputra Satakarni.

- 11) Bring out the salient aspects of Chola's local self-government.
- 12) Write about marketing reforms of Ala-ud-din-Khilji.
- 13) Bring out main features of Bhakthi preachers.
- 14) Explain main features of Cornwallis's reforms.
- 15) Discuss various causes lead to the outbreak of 1857 revolt.
- 16) Critically examine the work of the 'Home Rule Movement'.
- 17) Locate the following places in the Ashoka's Empire on the given Map of India :
 - (a) Kalinga
 - (b) Madhura
 - (c) Taxila
 - (d) Sanchi
 - (e) Pataliputra.

OR

Locate the following places in Akbar's Empire on the given Map of India :

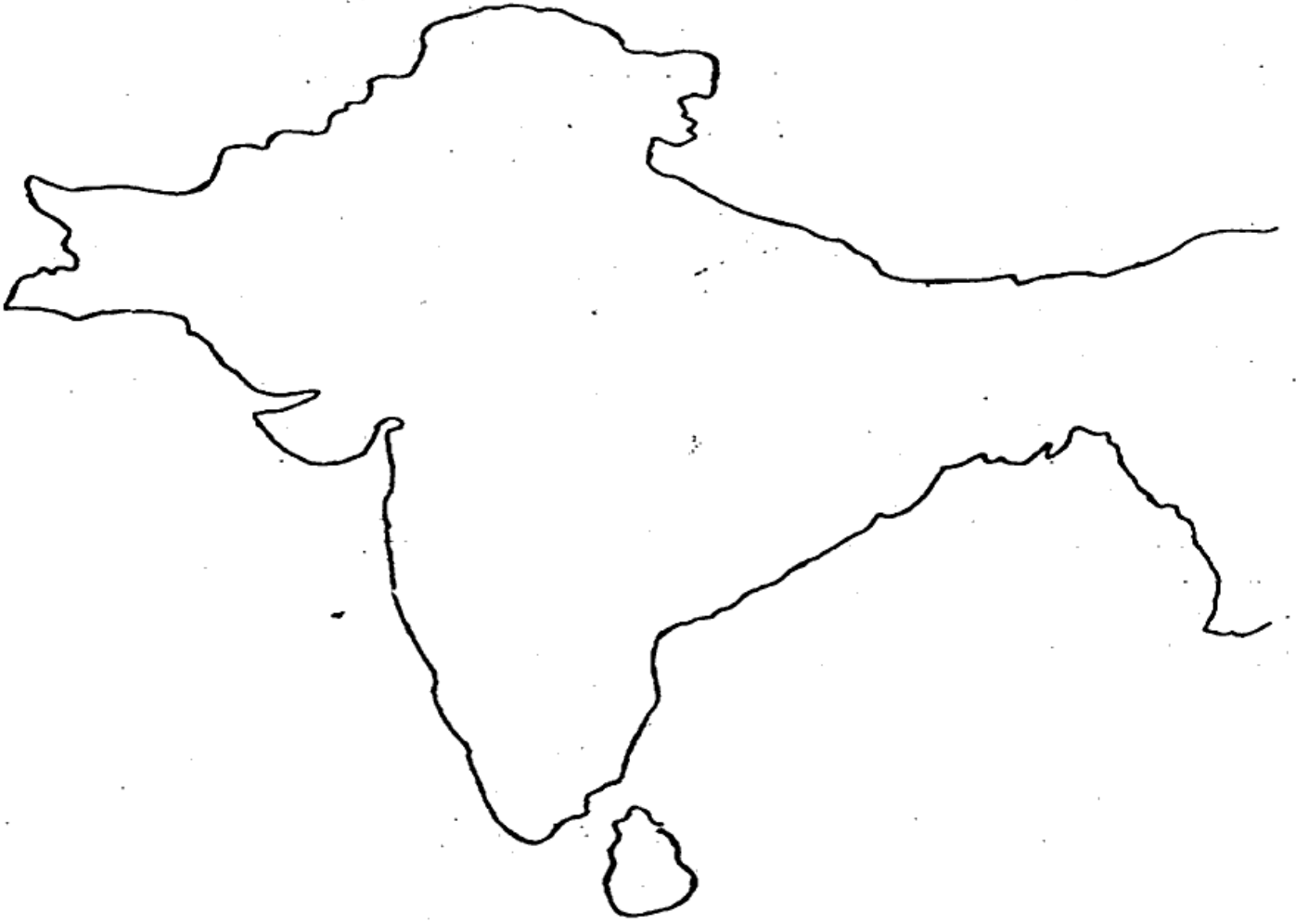
- (a) Delhi
- (b) Panipat
- (c) Agra
- (d) Gondwana
- (e) Gujarat.

SECTION – C

(15x2=30)

III. Write notes on ANY FIFTEEN of the following:

- 18) Inscriptions.
- 19) Great bath.
- 20) Vedas.
- 21) How many trade routes were there in the 6th BC ?
- 22) Ajavikas.
- 23) Principles of Buddhism.
- 24) Kalidasa.
- 25) Aihole Inscription.
- 26) Pallava Architecture.
- 27) Qutb Minar.
- 28) Token Currency Reforms.
- 29) Noorjahan.
- 30) Taj Mahal.
- 31) Shankaracharya.
- 32) Ramanujacharya.
- 33) Nayankara system.
- 34) Rani Lakshmi Bai.
- 35) Warren Hastings.
- 36) Who were moderates ?
- 37) Write about Rowlatt Satyagraha.



<https://www.apboardonline.com>

Whatsapp @ 9300930012

Send your old paper & get 10/-

अपने पुराने पेपर्स भेजे और 10 रुपये पायें,

Paytm or Google Pay से

<https://www.apboardonline.com>