

**NORTH-EX PUBLIC SCHOOL**  
**(Senior Secondary, Affiliated To CBSE)**  
**School Block, Jain Nagar, Sector-38, Rohini, Delhi – 81**  
**Summer Holiday homework (2025-26)**  
**CLASS –II**



### Subject – English

Q-1. Name your favourite pet animal and draw and colour it . Why do you love your pet ?  
Write few lines about it .

---

---

---

---

---

Q-2 Write the few ways by which you can show your kindness towards animals .

---

---

---

---

---

Q-3. Make the chart of different kinds of sound related to the person , thing and animals.

Q4 (a). Underline the naming words.

1. Mohini rides a bicycle .
2. Kitty loves milk .
3. Ben plays tennis .
4. Karan loves pasta .
5. I am eating pizza.
6. My school name is North Ex Public School.
7. Rohan is my best friend.
8. I have a big house.

b) Identify the proper and common nouns.

1. Taj Mahal -

2. Doctor -

3. Agra

4. Radhika -

5. Animal -

6. Rohan -

7. Dog -

8. Park -

Q-5. Look at the picture and answer these questions:-



1. How do you feel when you see the picture ?

---

---

---

2. Describe your feelings.

---

---

---

Q-6 Paste the picture of your favourite toy and write the three adjectives of it like ( Colour, shape and size).

---

---

---

---

Q-7 Add ( s and es) to form more than one.

1. Bush –
2. Glass –
3. Box –
4. Car –
5. Apple –
6. Boat –
7. Cake –
8. Fox –
9. Dish -

Q-7 Write the word meanings of –

1. Bravery -
2. Silly -
3. Split -
4. Comfortable -
5. Began -
6. Approaches -

Q-8 Answer the following questions –

1 . Where did the girl live?

---

2 . Why did the kitten begin to sign ?

---

3 Name the animal that try to fit into the mitten .

---

4. Where was the boy playing?

---

5. How did the villagers show their happiness?

---

Q9 Paste the picture of your school and write a few line about your school .

---

---

---

---

---

---

---

---

---

---

[illegible]

## Handwriting

**The sun rises in the east and sets in the west .**

This image shows a single sheet of white paper with horizontal ruling lines. The lines are evenly spaced and run across the width of the page. There are no margins, text, or other markings on the paper.

[illegible]



## हिंदी

प्रश्न 1 प्रकृति से संबंधित चित्र बनाए और उसमें रंग भरिए -(A-4 शीट पर)

प्रश्न 2 अनुच्छेद लेखन -(मेरा परिवार)

---

---

---

---

---

---

---

---

---

---

प्रश्न 3 शहद न सिर्फ खाने के काम आता है अपितु यह औषधि के रूप में भी प्रयोग किया जाता है। नानी दादी से पूछ कर बताइए कि शहद के क्या-क्या उपयोग है?

---

---

---

---

---

प्रश्न 4 उपयोग में ना आने वाली वस्तुओं का इस्तेमाल करके तोरण तैयार करें और उसमें ऋतुओं के नाम लिखिए ।

प्रश्न 5 निम्नलिखित शब्दों के बहुवचन लिखिए -

1 तारा - \_\_\_\_\_ 2). तोता - \_\_\_\_\_

3) आंख - \_\_\_\_\_. 4) चिड़िया - \_\_\_\_\_

प्रश्न 6 निम्नलिखित शब्दों के दो – दो समान अर्थ लिखो –

१ हवा

२ बगीचा

३ नदी

४ सूरज

५ वृक्ष

प्रश्न 7- निम्नलिखित शब्दों के विलोम शब्द लिखिए-

१ सीधा

२ गरम

३ अधिक

५ कमजोर

५ सूखा

६ ऊपर

प्रश्न 8 निम्नलिखित शब्दों के अर्थ लिखिए –

१ रफ्तार

२ नटखट

३ व्यस्त







४ तमाचे

प्रश्न 9 गिनती।

## हिंदी गिनती १ से १०

वस्तुओं को गिनें और अंक और शब्द से मेल खाने के लिए रेखाएँ खींचें।

Draw lines to match each numeral, group of objects and word.

२		तीन
१		एक
५		दो
३		पाँच
४		चार
८		सात

दिए गए अंकों से गोले बनाए

५ - ● ● ● ● ●

८

१

६

४

९

प्रश्न 10 पक्षियों के चित्र लगाकर उनकी बोलियां लिखें।

प्रश्न 11 निम्नलिखित प्रश्नों के उत्तर लिखिए-

१ कविता में दादा किसे कहा जा रहा है?

---

२ मोटूशि शहद पीकर कहाँ सो गई?

---

३ गिलहरी का नाम क्या था ?

---

४ ऐमन का साथी कौन था अमन है ?

---

प्रश्न 12. कागज से बस्ता बनाए और उसे सजाए ।

प्रश्न 13. निम्नलिखित शब्दों के वाक्य बनाओ।

1 पेड़

2 कठिन

3 बगीचा

4 फूलों

5 सूरज

6 पूँछ

7 बस्ता

## सुलेख

यदि आप सपना देख सकते हैं तो आप उसे पूरा भी कर सकते हैं।

[illegible]

[illegible]


## **Maths**

Q-1. Make rangoli design using different types of 2-D shapes .

Q-2. Make a greeting card using block printing .



Q-3 Look at the picture and answer the following questions-



1. There are \_\_\_\_ animals in the picture.
2. How many monkeys are there ? \_\_\_\_
3. How many groups of crabs can be formed ? \_\_\_\_

Q-4 Write the expanded form of given numbers –

1. 456-
2. 347-
3. 123-
4. 156 -

Q-5 Write the short form of given expanded form –

1.  $100+30+4$  -
2.  $300+40+5$  -
3.  $400+50+6$  -
4.  $500+60+4$  -

Q-6 Write the place value and face value of underlined digit -

1. 345 – Place- \_\_\_\_\_  
Face - \_\_\_\_\_
2. 225 – Place - \_\_\_\_\_  
Face - \_\_\_\_\_

Q-7 Arrange the numbers both in ascending and descending order –

1. 432,374, 215 ,500

Ascending \_\_\_\_\_

Descending \_\_\_\_\_

2. 476 ,321,498 ,215

Ascending \_\_\_\_\_

Descending \_\_\_\_\_

3. 450, 322 , 70, 448,

Ascending \_\_\_\_\_

Descending \_\_\_\_\_

4. 222, 444, 500, 101

Ascending \_\_\_\_\_

Descending \_\_\_\_\_

Q-8 Write the number names –

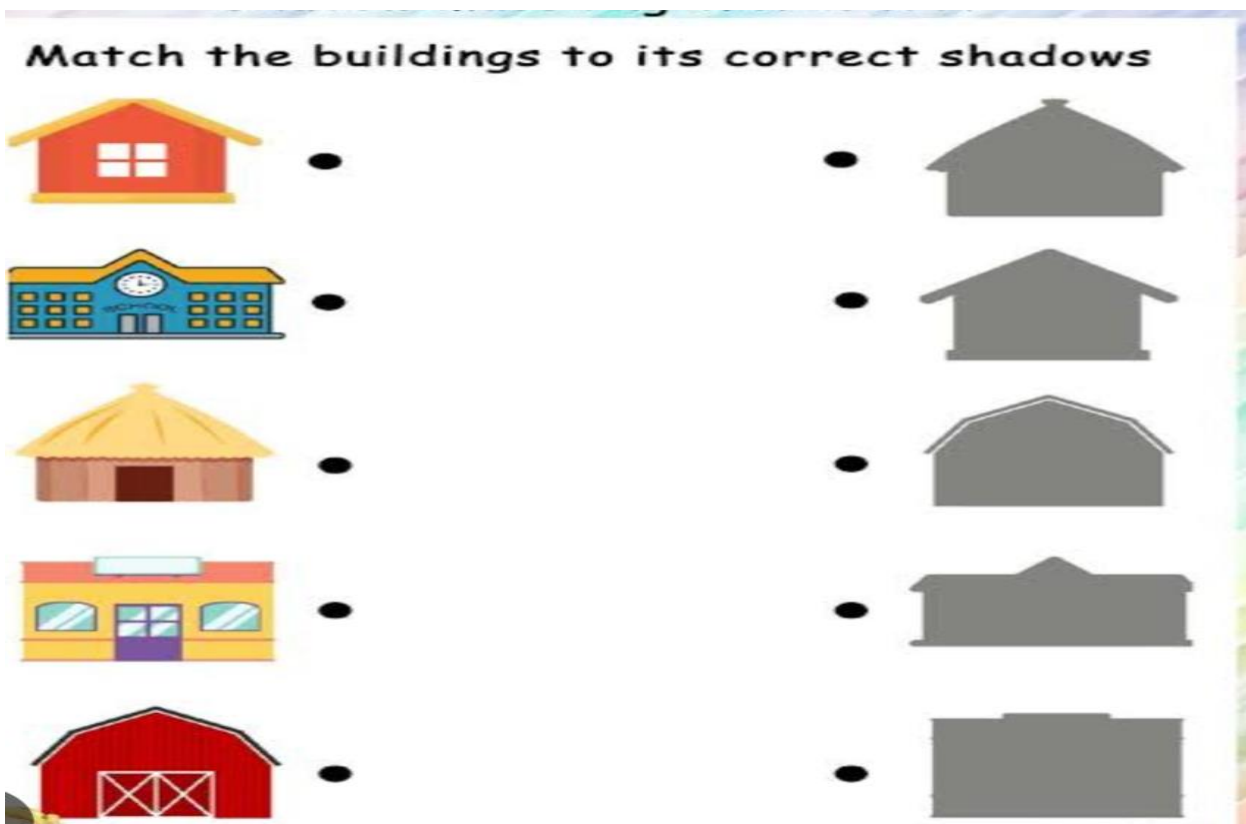
1. 457
2. 125-
3. 349-
4. 450 -
5. 299 –
6. 500 -

Q-9 Write the given numbers as odd or even-

1. 234 -
2. 435 –
3. 112-
4. 327-
5. 444 –
6. 333 -

Q10. Draw a house with the help of different type of shapes.

Q11.



Q12. Make a book of tables ( 2 to 10 )

### **Subject – E.V.S**

Q-1. Collect picture of your family members .Paste them to make a collage .Name it ‘I love my family.’

Q-2 Paste pictures of four internal and 4 external part of the body. Also name them.

Q-3 Make a chart on ‘ My sense organs ‘

Q-4 Fill in the blanks –

1. In a \_\_\_\_\_ family , grandparents , parents ,uncles ,aunt and cousins live together in the same house
2. Our \_\_\_\_\_ helps us to think .
3. I feel \_\_\_\_\_ when I scored good marks in exams.
4. Nuclear family is also called \_\_\_\_\_ family.
5. I feel \_\_\_\_\_ when the light goes off and it gets dark
6. All humans are born as \_\_\_\_\_.

Q-5 State true or false –

1. Each one of us is unique. \_\_\_\_
2. Nose helps us to digest food. \_\_\_\_
3. We should respect our elders . \_\_\_\_
4. We should not drink the milk everyday. \_\_\_\_
5. Egg is the bodybuilding food. \_\_\_\_\_

Q-6 Answer the following questions –

1. What is the function of heart ?

---

---

2. What is a joint family?

---

---

3. Why do we need food ?

---

---

4. What is an identity card?

---

---

Q-7 Draw and colour pictures of any two foods of each kind .

- Energy giving food

- Protective food

- Body building food

Q8. Paste the pictures of any 6 things that we use to keep our house neat and clean.

## Computer

Q1 Write the name of different places where the computer use.

---

---

---

---

---

---

---

---

Q2. Draw, colour and label -

- 1 ) scanner
- 2) Microphone
- 3) Printer
- 4) Keyboard
- 5) Mouse
- 6) Monitor
- 7) CPU



### **Art**

1. Make a beautiful pen stand with ice cream stick
2. Do page no 7,11,35,37,40 in art book.

### **GK**

- Q1.** Write daily news headlines with date and name of the newspaper.
- Q2.** Write the name of Indian states and their capital.