




NORTH-EX[®] PUBLIC SCHOOL — DELHI —



Established 1999 | CBSE Curriculum | Holistic Development



SUMMER HOLIDAY HOMEWORK

Session 2026-2027



Student Name : _____



Class : _____



Section : _____



Class Teacher : _____



Explore, Learn & Grow this Summer!



OUR THREE BRANCHES - ROHINI, DELHI

SECTOR-38, ROHINI



Spacious campus with modern infrastructure & senior secondary facilities.

SECTOR-3, ROHINI



Recognised branch with strong academic foundation & disciplined environment.

SECTOR-8, ROHINI



Senior Secondary CBSE affiliated campus with advanced learning spaces.

OUR FACILITIES



SMART
DIGITAL
CLASSROOMS



WELL EQUIPPED
SCIENCE
LABS



COMPUTER &
IT LABS



LIBRARY &
RESOURCE
CENTRE



SPORTS &
OUTDOOR
ACTIVITIES



CO-CURRICULAR
ACTIVITIES
(ART, MUSIC, DANCE)



SAFE & SECURE
CAMPUS
(CCTV)



Complete your work neatly and submit on time.



General Instruction :-

- Learn and revise the syllabus of Periodic -1
- Complete all pending work of all subjects
- Do your project work neatly.
- Holiday Homework should be done in the given space

ENGLISH


Q1) Write 4-5 lines on what you learned from the story. (Kottavi Raja)

Q2) Make a boat using origami /A-4 size sheet and write on message on the boat and paste it in the given space :-

Handwriting

• *Learning is a treasure that follows us everywhere.*

Q3) Look at the two pictures and answer in a few words.



Questions	A	B
1. What would the weather be like in these places?	<hr/> <hr/> <hr/> <hr/>	<hr/> <hr/> <hr/> <hr/>
2. What would you do in your free time here?	<hr/> <hr/> <hr/> <hr/>	<hr/> <hr/> <hr/> <hr/>
3. Which place would you choose to live in? Why?	<hr/> <hr/> <hr/> <hr/>	<hr/> <hr/> <hr/> <hr/>

Handwriting

- *A wise person speaks kindly about everyone.*

Q4) Rewrite the sentences as directed:

a) It is a nice day. (Change into interrogative)

b) Open the window. (Change into negative)

c) How cold it is! (Change into assertive)

d) He has not completed his work. (Change into positive)

Q5) Do as directed :-

a) Underline the noun and write its kind.

1) We saw a shoal of fishes swimming in the pond.

2) Always speak the truth.

3) Friendship is a precious gift.

4) The bricks were made of sand.

b) Fill in with the articles (a/an/the)

1) ___ apple a day keeps the doctor away.

2) I saw ___ elephant in the zoo.

3) ___ sun rises in the east.

4) She has ___ pen.

c) Fill in with the correct preposition :-

1) The cat is ___ the table.

2) The ball is ___ the box.

3) She is sitting ___ her friends.

4) The book is ___ my bag.

Handwriting

Mistakes are proof that you are trying."

Q6 Answer the following questions :-

1. Fill in with the correct preposition :-

- a) The cat is ___ the table.
- b) The ball is ___ the box.
- c) She is sitting ___ her friends.
- d) The book is ___ my bag.

2. Underline the Subject and Predicate:

- a) Riya is reading a book.
- b) The sun is shining.
- c) My mother cooks food.
- d) The children are playing in the park.

Q7 Reference to context

The queen took matters into her hands. She ordered a small glass of milk. In a few minutes, Nidra Devi came and blessed the king. The palace finally shut down for the night.

a) What 'matters' did the queen take into her hands?

b) Why was Nidra Devi avoiding the king?

c) What does 'the palace finally shut down for the night' mean?

Handwriting

• *Speaking positively about others reflects good character*

Q8) Answer the following :-

a) Identify the gender (Masculine / Feminine):

- 1) Mother → _____ 2) Tiger → _____
3) Actress → _____ 4) Cow → _____
5) Brother → _____

b) Write the antonym for the following words


- 1) Hot → _____ 2) Day → _____
3) Strong → _____ 4) Big → _____
5) Near → _____

Q9 Write a few lines about how you spent your last weekend.

Handwriting

• *Dreams become true with hard work and dedication.*

Q12) Look at the picture and Describe it.



Handwriting

- We should learn from our mistakes and keep improving ourselves every day.

Q13 Read the passage and write answers for the following questions

One sunny morning, Ravi and his sister Meera went to a park near their home. The park was full of green trees, colorful flowers, and singing birds. Children were playing on swings and slides. Some people were walking and enjoying fresh air. Ravi and Meera sat under a big tree and ate their snacks. After that, they played badminton. They also saw ducks swimming in the pond. It was a very happy and relaxing day for them.

a) Where did Ravi and Meera go?

b) What did they see in the park?

c) What did they do under the tree?

d) Which game did they play?

Handwriting

Success is the sum of small efforts repeated day in and day out."

Maths

Q-1 Answer the following questions

1. Write down the period, place, place value and face value of the bold digit in each numeral

Numeral	Period	Place	Place value	Face value
• 465302				
• 563409				
• 512963				
• 457890				
• 215273				
• 345790				

2. Write the numerals in words:-

678034	
549087	
300567	
908076	
256005	

Tables:-

$2 \times 1 = 2$

$3 \times 1 = 3$

$4 \times 1 = 4$

$5 \times 1 = 5$

3. Write in expanded form :-

570987	
349620	
209808	
567098	
456209	

4. Round off nearest to the following given in the boxes:-

Numbers	Nearest 100	Nearest 1000	Nearest 10000
• 89129			
• 154678			
• 678902			
• 456709			
• 564098			

5. Mental Maths

Use the digit on the cards to make :-

6 3 5 1 7 9

- The largest 6- digit numbers using all the cards _____
- The smallest 6-digit numbers using all the cards _____
- The largest 6-digit odd number using all the cards _____
- The smallest 6-digit even number using all the cards _____

Tables :-

$6 \times 1 = 6$

$7 \times 1 = 7$

$8 \times 1 = 8$

$9 \times 1 = 9$

ding method.

Q-2 Draw and Paste all types of angles, different kinds of triangles with the help of broom sticks on A-3 size sheet and also write their name with a real life example in given below space.

Q3 Arrange in Column and solve :-

a) 20785,56790 and 324567

e) 456789,234098 and 32156

b) 678901,24678 and 267907

f) 67890,560987 and 4321

c) 679876 from 876500

g) 234890 from 579087

d) 457806 from 760896

h) 564890 from 908760

VII

Q4 Find the sum and difference of the largest 5-digit number and the smallest 6-digit number and write in words and in expanded form of both numbers :-

Mental Maths :-

1. 37589 = ___ ten - thousands + ___ thousands + ___ hundreds + ___ tens + ___ ones.
2. $246 \times 1000 =$ _____
3. 4 thousands - 6 tens = _____
4. Double of 56 is _____
5. A shape with four equal sides is called _____

Tables

$10 \times 1 = 10$

$11 \times 1 = 11$

$12 \times 1 = 12$

$13 \times 1 = 13$

Q5 Write down all properties of addition and subtraction in the given space with an example:-

Tables

$14 \times 1 = 14$

$15 \times 1 = 15$

$16 \times 1 = 16$

$17 \times 1 = 17$

Q6 Solve the word problem :-

- a) A library has 5,67,890 books. It bought 1,23,450 new books and later removed 45,300 old books. How many books are there now?
- b) A company earned 9,80,500 rupees. It spent 4,75,250 rupees on expenses and 1,20,300 rupees on salaries. How much money is left?
- c) There were 8,90,000 trees in a forest. Due to cutting, 2,35,750 trees were removed. Later, 1,50,500 trees were planted. How many trees are there now?
- d) A school has 4,35,600 rupees in its fund. It received a donation of 2,40,300 rupees and spent 1,20,450 rupees. How much money does the school have now?

Q7 Find the actual and estimated values of the following by rounding off

i) To the nearest hundred

a) $6598 + 3245$

b) $53460 - 32456$

ii) To the nearest thousand

a) $52563 - 27896$

b) $56234 + 21980$

Mental Maths

a) 20 ₹ = _____ p

b) The Longest chord in a circle is called _____

c) 1500 more than 34353 is _____

d) $>/</=$ 60782 { } 78251

Tables

$18 \times 1 = 18$

$19 \times 1 = 19$

$20 \times 1 = 20$

Q8 Do as directed :-

a) Classify the angles - 91° - _____ 165° - _____

b) Using protractor, construct angles :-

1. 160°

2. 55°

c) Find the circumference of the circle if

1. The diameter of a circle is 4cm

2. A circle has a radius of 5m

d) If you draw circle with radius of 5 cm and then draw another circle with double the radius. What is the difference in their circumferences?

Q9 Complete the table :-

Shapes	Faces	Edges	Vertices
Cuboid			
Cube			
Cylinder			
Sphere			
Cone			

Q10 Show / Draw a picture of house using the 2D/ 3D shapes and observe the picture and answer the following questions :-

a) Identify all the 2D shapes in the picture

b) Which shape is used for the roof?

c) Which shape has 4 equal sides?

d) Is there any shapes can be roll?

Q11 If you were to design a new toy, what shape would you choose and why? Draw of that toy with your own imagination.

Q12 Identify and mark the different angles formed in each letter of your name. Mention the number of each type of angles found, marked with different colours of each same angle.

Q13 Answer the following questions :-

- a) Raman had Diwali Vacation from 17th October to 7th November. What was the duration of the vacation?

- b) Priya started her dance practice at 4:55 P.m and practiced for 50 minutes. At what time did she stop her dance practice?

- c) A movie started at 6:30 p. m and ended at 9:15p.m .How long was the movie ?

- d) A fan was switched on for 4 hours and 15 minutes. It was switched off at 7.30 p.m. At what time was it Switched on ?

Q14 Make a working model on geometrical park. (Roll no-1-20)

हिन्दी

प्रश्न-1 जिसके पास बुद्धि है उसके पास बल है। 'बुद्धि की जीत' कहानी के आधार पर अपने विचार 5 से 6 वाक्य में प्रकट कीजिए।

सुलेख

हमें सदैव मधुर वाणी का प्रयोग करना चाहिए।

प्रश्न-2 बड़े होकर आप क्या बनना चाहते हैं? आप लोगों के लिए क्या-क्या करेंगे? लिखकर बताइए।

सुलेख

जो दूसरों की इज्जत करता है, वही सच्चा इंसान कहलाता है।

प्रश्न-3 मीनाक्षी अम्मन मंदिर पर अनुच्छेद लिखिए।

प्रश्न-5 अपने अनुसार आइसक्रीम स्टिक से गुड़िया बनाइए और नीचे दी गई जगह पर चिपकाइए और 5 वाक्य भी लिखिए -

सुलेख

हमें हमेशा दूसरों की अच्छाइयों को देखना चाहिए।

प्रश्न-6 हिन्दी वर्णमाला (स्वर और व्यंजन)को दी गई खाली जगह पर अपनी समझ से दर्शाओ।

सुलेख

अनुशासन जीवन को सुंदर बनाता है।

प्रश्न-7 भाषा का पेड़ अर्थात भारतीय प्रदेशों भाषाएँ एवं लिपियाँ को नीचे दी गई जगह पर बनाइए।

सुलेख

स्वच्छता अपनाओ, स्वस्थ जीवन पाओ।

प्रश्न-8 दिए गए प्रश्नों के उत्तर दीजिए:-

- किन्हीं तीन द्वित्व व्यंजनों से तीन-तीन शब्द बनाइए।
- किन्हीं चार अलग-अलग र के रूपों के शब्दों को लिखिए और उनसे वाक्य बनाइए।

- दिए गए वाक्य में से संज्ञा शब्द को चुनकर उसका भेद बताइए
 - i. कोयल पेड़ पर बैठी थी।
 - ii. फूलों की सुगंध मन को छू रही है।
 - iii. सोनम ताजमहल देखने गई थी।
- दिए गए शब्दों का लिंग बदलकर लिखिए-
 - i. बैल
 - ii. जादूगर
 - iii. लेखक
 - iv. कवि
 - v. सम्राट

सुलेख

मेहनत इतनी खामोशी से करो कि सफलता शोर मचा दे।"

प्रश्न-9 निर्देशानुसार प्रश्नों के उत्तर दीजिए-

• पर्यायवाची शब्द लिखिए

- i. जल
- ii. बेटी
- iii. ईश्वर

• विलोम शब्द लिखिए

- i. शुद्ध
- ii. प्रश्न
- iii. पूर्ण

• अनेकार्थी शब्द लिखिए

- i. भाग
- ii. कनक
- iii. अंक

• अनेक शब्दों के लिए एक शब्द लिखिए

- i. जो सेना में काम करें
- ii. जो बोल नहीं सकता
- iii. जो डरता हो

• दिनों के नाम लिखिए

सुलेख

सफलता का कोई मंत्र नहीं है, यह तो सिर्फ परिश्रम का फल है।"

प्रश्न-10क) दिए गए अशुद्ध शब्दों को शुद्ध करके लिखिए-

- i. चिन्ह
- ii. गुरु
- iii. खुस
- iv. आशिर्वाद

ख) वर्ण विच्छेद कीजिए -

- i. आसमान
- ii. चिड़िया
- iii. हिन्मत
- iv. अध्यापिका

प्रश्न-11 दिए गए चित्र को ध्यानपूर्वक देखिए और उन पर 4-5 वाक्य को अपने शब्दों में लिखिए।



सुलेख

विश्वास एक ऐसा शहर है, जिसको असंख्य सपनों और बलिदानों ने मिलकर सजाया है।"

प्रश्न-12 नीचे दिए गए गद्यांश को ध्यान पूर्वक पढ़िए और दिए गए प्रश्नों के उत्तर लिखिए -

ईमानदारी और मेहनत दो ऐसे गुण हैं, जो इंसान को अच्छे इंसान बनाते हैं। ईमानदार और मेहनती बालक ही बड़े होकर अच्छे नागरिक बनते हैं। वे देश का नाम रोशन करते हैं। ऐसे बच्चों को सभी प्यार करते हैं तो आप भी मेहनती और ईमानदार बनने की जरूर कोशिश कीजिए। छोटी-छोटी बातों से हमारी झूठ बोलने की आदत (जैसे पेट दर्द का बहाना बनाकर स्कूल न जाना) पड़ने लगती है और आगे चलकर यही बुरी आदत हमें सबके सामने शर्मिदा करती है। अतः हमेशा सच बोलने की आदत डालें।

(क) कौन से गुण इंसान को अच्छा बनाते हैं?

(ख) देश का नाम कौन रोशन करते हैं?

(ग) कैसे बच्चों को सभी प्यार करते हैं?

(घ) किस आदत के कारण शर्मिदा होना पड़ सकता है?

सुलेख

समय अमूल्य है, इसका सदुपयोग करें।

EVS

Q1) Differentiate between:

a) Internal and external organs

b) Arteries and veins

Q2) Write 3 differences between living and non-living things with examples.
Draw one picture of each.

25

Q5) Riya kept some seeds in the fridge. After a few days, they did not grow. Why do you think this happened? Explain in simple words.

Q6) Name the different kinds of pulses and explain why it is so important for us to include them in our diet.

Q7) Find the names of the given food items in the grid.

Pumpkin. Clove. Groundnut walnut. Raisins. Potato

C	M	E	U	C	A	L	Y	P	T	U	S
O	P	A	Y	O	V	S	J	O	E	I	P
V	U	R	D	U	F	U	G	U	R	N	O
E	M	D	C	L	O	V	E	R	G	D	T
R	P	E	N	T	I	L	A	T	R	O	A
S	K	R	A	I	S	I	N	S	O	W	T
O	I	A	I	N	S	G	H	A	U	S	O
R	N	S	Q	R	W	H	E	R	N	U	I
G	R	I	L	L	L	T	M	D	D	V	S
H	C	V	B	N	M	L	K	J	N	G	I
U	D	S	A	W	E	R	T	Y	U	P	N
M	C	V	B	W	A	L	N	U	T	G	S

Q8) Describe the various ways by which water gets polluted.

GK

- 8 - 10 lines On the brave warrior ' Rani Lakshmi Bai' with picture.
- Write daily one news headlines(one national, one international and one sports) with newspaper cutting.
- Write 3 daily current affairs in your notebook.
- Name different sports with their country name
- Name various dishes with their country name

Art & craft

- Do page no 15,16,23,29,40 in art book.
- Make an anime art on A-3 size sheet.
- Handmade DIY Home décor with waste material.

Computer

1. Draw / Paste the picture types of Computer Memory in the notebook.
2. Draw / Paste the pictures of Common Apps in notebook /A-3 sheet.
3. Prepare a chart on the topic : Features of Windows 10 (any 3)
4. Write shortcut keys A-Z in note book.
5. Complete chapter-1,2 in notebook, book (if pending) & Revise.