




# NORTH-EX<sup>®</sup> PUBLIC SCHOOL — DELHI —



Established 1999 | CBSE Curriculum | Holistic Development



# SUMMER HOLIDAY HOMEWORK

Session 2026-2027



Student Name : \_\_\_\_\_



Class : \_\_\_\_\_



Section : \_\_\_\_\_



Class Teacher : \_\_\_\_\_



*Explore, Learn & Grow this Summer!*



## OUR THREE BRANCHES - ROHINI, DELHI

### SECTOR-38, ROHINI



Spacious campus with modern infrastructure & senior secondary facilities.

### SECTOR-3, ROHINI



Recognised branch with strong academic foundation & disciplined environment.

### SECTOR-8, ROHINI



Senior Secondary CBSE affiliated campus with advanced learning spaces.

## OUR FACILITIES



SMART  
DIGITAL  
CLASSROOMS



WELL EQUIPPED  
SCIENCE  
LABS



COMPUTER &  
IT LABS



LIBRARY &  
RESOURCE  
CENTRE



SPORTS &  
OUTDOOR  
ACTIVITIES



CO-CURRICULAR  
ACTIVITIES  
(ART, MUSIC, DANCE)



SAFE & SECURE  
CAMPUS  
(CCTV)



Complete your work neatly and submit on time.



Subject - English

Ques- Paste a picture of your family and write down few lines about your family.

---

---

---

---

---

Ques- Identify the proper and common noun.

1. Taj Mahal - \_\_\_\_\_
2. Doctor - \_\_\_\_\_
3. Radhika - \_\_\_\_\_
4. Agra - \_\_\_\_\_
5. Animal - \_\_\_\_\_

• HANDWRITING



I wake up early in the morning.

Ques- Write the gender of the following:

- | Male       | Female   |
|------------|----------|
| 1. Rooster | _____    |
| 2. _____   | duck     |
| 3. Fox     | _____    |
| 4. _____   | landlady |
| 5. Mother  | _____    |
| 6. _____   | lady     |

Ques- Add ( s and es) to form more than one.

1. Bush - \_\_\_\_\_
2. Glass - \_\_\_\_\_
3. Box - \_\_\_\_\_
4. Car - \_\_\_\_\_
5. Apple - \_\_\_\_\_

Ques - Write the meaning of :

1. Hurry :- \_\_\_\_\_
2. Ducklings - \_\_\_\_\_
3. Wonderful- \_\_\_\_\_
4. Shell - \_\_\_\_\_
5. Lettuce - \_\_\_\_\_

HANDWRITING

The birds is flying in the sky.

Ques- Make sentences using these action words:

1. Jump → \_\_\_\_\_
2. Eat → \_\_\_\_\_
3. Play → \_\_\_\_\_
4. Read → \_\_\_\_\_
5. Dance → \_\_\_\_\_

Ques- Choose the correct synonym:

1. Big → (large / slow)
2. Happy → (sad / glad)
3. Small → (tiny / big)
4. Fast → (quick / lazy)
5. Clever → (smart / dull)

Ques- Write plural forms of the nouns:

1. Cat → \_\_\_\_\_
2. Book → \_\_\_\_\_
3. Child → \_\_\_\_\_
4. Mango → \_\_\_\_\_
5. Toy → \_\_\_\_\_

Ques- Rewrite the following sentences again using capital letters and full stop.

I am studying in class 2.

my best friend is Janavi

**HANDWRITING**

I help my parents at home.





Ques- Write a / an for the following questions.

1. I saw \_\_\_\_\_ elephant in the zoo.
2. She has \_\_\_\_\_ red apple.
3. He is \_\_\_\_\_ honest boy.
4. I have \_\_\_\_\_ book in my bag.
5. We saw \_\_\_\_\_ owl on the tree.

Ques- Circle the nouns in each sentence:

1. The dog is playing in the garden.
2. Riya has a red ball.
3. The teacher is in the classroom.
4. My brother loves chocolate.
5. The sun is shining brightly.

Ques- Make a picture of house and decorate it with waste materials, and write 5 lines on it.

Blank lined paper for drawing and writing.

HANDWRITING  
I brush my teeth twice a day.

Ques- Fill in the blanks with the correct possessives

1. I wrote a poem. That is \_\_\_\_\_ poem.
2. This parrot belongs to Ravi. That is \_\_\_\_\_ parrot.
3. Riya and Meeta brought a basket. That is \_\_\_\_\_ basket.
4. You packed the snacks. That is \_\_\_\_\_ job.
5. We are participating in the play. That is \_\_\_\_\_ costume.

Ques- Look at the picture and write few lines on it.



---

---

---

---

---

---

---

---

HANDWRITING  
*I respect my teachers and friends.*

---

---

---

---

---

---

---

---

---

---

Ques- Read the passage and answer the following questions.

Riya has a small pet dog. Its name is Bruno. Bruno is very cute and playful. He likes to run in the garden and play with a ball. Every morning, Riya gives him milk and bread. Bruno loves Riya very much. He follows her everywhere.

Answer the following questions:

1)What is the name of Riya's dog?

---

2)Where does Bruno like to run?

---

3)What does Riya give Bruno in the morning?

---

4)Who does Bruno love?

---

Ques- Arrange the words in alphabetical order:

1. Mango, apple, banana → \_\_\_\_\_
2. Tiger, lion, elephant → \_\_\_\_\_
3. Pen, pencil, eraser → \_\_\_\_\_
4. Chair, table, sofa → \_\_\_\_\_
5. Sun, moon, star → \_\_\_\_\_

Ques- Answer the following questions.

1 What does daddy do for Shanu?

---

2 What do the family member do together?

---

3 Where would a snail lives?

---

4.How did the mother duck trick the fox?

---

Ques-What comes before and after

1. \_\_\_\_ Sunday \_\_\_\_
2. \_\_\_\_ Tuesday \_\_\_\_
3. \_\_\_\_ Thursday \_\_\_\_
4. \_\_\_\_ Saturday \_\_\_\_

Ques-Use the words given in the box to fill sentences

Swim, play, drink, fly, wear

1. You \_\_\_\_ kite.
2. You \_\_\_\_ your uniform.
3. You \_\_\_\_ water.
4. You \_\_\_\_ in the swimming pool.
5. You \_\_\_\_ games.

Ques- Complete the names of the months

1. J\_\_\_\_nuary
2. Febru\_\_\_\_ry
3. M\_\_\_\_rch
4. Apr\_\_\_\_l
5. Ma\_\_\_\_
6. Jun\_\_\_\_
7. Jul\_\_\_\_
8. Aug\_\_\_\_st
9. Septemb\_\_\_\_r
10. \_\_\_\_ct\_\_\_\_ber
11. Novemb\_\_\_\_r
12. Decemb\_\_\_\_r

HANDWRITING

Your talent determines what you can do

Ques- Join each pair to make one word:

1. Sun + flower = \_\_\_\_\_
2. Rain + bow = \_\_\_\_\_
3. Foot + ball = \_\_\_\_\_
4. Tooth + brush = \_\_\_\_\_
5. Class + room = \_\_\_\_\_
6. Bed + room = \_\_\_\_\_

Ques- Choose the Correct Adjective

1. The elephant is (small / big). \_\_\_\_\_
2. The ice cream is (cold / hot). \_\_\_\_\_
3. The sun is (bright / dark). \_\_\_\_\_
4. The tortoise is (fast / slow). \_\_\_\_\_
5. The flower is (ugly / beautiful). \_\_\_\_\_

Ques-Q. Put a mark (✓) if the word is an action word and (X) if not.

1. \_\_\_\_\_ run
2. \_\_\_\_\_ pencil
3. \_\_\_\_\_ swim
4. \_\_\_\_\_ book
5. \_\_\_\_\_ sleep
6. \_\_\_\_\_ sing

Ques- Complete the compound words:

1. \_\_\_ + ball = Football
2. Rain + \_\_\_ = Rainbow
3. Tooth + \_\_\_ = Toothbrush
4. Sun + \_\_\_ = Sunlight

HANDWRITING

We should always speak the truth.

हिंदी

प्रश्न 1 ईश्वर हमारे जीवन को कैसे अच्छा बनाते हैं? यदि ईश्वर हमारी हर इच्छा को पूरा करते हैं तो आप अपने कि इच्छा को सबसे पहले पूरा करना चाहेंगे?

---

---

---

---

---

प्रश्न 2 अनुच्छेद लेखन - (स्वर्ण मंदिर)

---

---

---

---

---

---

---

---

सुलेख

सत्य से बढ़कर कोई धर्म नहीं है सत्य स्वयं में परब्रह्म परमात्मा है।

---

---

---

---

---

---

---

---

प्रश्न 3 जादू की पेंसिल का चित्र बनाएं। अगर आप जादूगर होते तो आप क्या-क्या वस्तु जादू से प्राप्त करना चाहते?

---

---

---

---

---

प्रश्न 4 सूखी पतियां लेकर एक तोरण तैयार करें और उसे पर 1 से 10 तक हिंदी शब्दों में और हिंदी अंकों में गिनती लिखें।

प्रश्न 5 निम्नलिखित संयुक्त वर्णा और मात्राओं से नए शब्द बनाएं-

1) स्व - \_\_\_\_\_ 2) ऐ - \_\_\_\_\_

3) च्च - \_\_\_\_\_ 4) ए - \_\_\_\_\_

**सुलेख**

समय गुजारने के लिए कुछ मत करना बल्कि गुजरते समय से चलने को सीख लेना।

---

---

---

---

---

---

---

---

---

---

प्रश्न 6 दिए गए शब्दों के अनेक रूप लिखिए।

एक [एकवचन]

अनेक [एकवचन]

1. बाजा



बज

2. ताला



3. गमला



4. पत्ता



5. अंडा



प्रश्न 7-चित्रों की सहायता से खाली स्थान पर सजा शब्द लिखिए।

1. राशि \_\_\_\_\_ खा रही है।



2. प्रभा \_\_\_\_\_ चला रही है।



3. बगीचे से \_\_\_\_\_ तोड़ना मना है।



4. रानी \_\_\_\_\_ में रहती है।



5. शुभम \_\_\_\_\_ खा रहा है।



सुलेख

यदि आप सपना देख सकते हैं, तो आप उसे पूरा भी कर सकते हैं।

Blank lined area for writing the answer to Question 7.







प्रश्न 15 चित्र देखकर पर्यायवाची लिखिए।



\_\_\_\_\_



\_\_\_\_\_



\_\_\_\_\_



\_\_\_\_\_



\_\_\_\_\_



\_\_\_\_\_

प्रश्न 16 निम्नलिखित हिंदी अंको को हिंदी शब्दों में लिखिए।

१ \_\_\_\_\_ २ \_\_\_\_\_ ३ \_\_\_\_\_ ४ \_\_\_\_\_ ५ \_\_\_\_\_  
६ \_\_\_\_\_ ७ \_\_\_\_\_ ८ \_\_\_\_\_ ९ \_\_\_\_\_ १० \_\_\_\_\_

सुलेख

सफलता एक दिन में नहीं मिलती, मगर ठान को तो एक दिन जरूर मिलती है।

Blank lined area for writing the answer to Question 16.

प्रश्न 17 अनेक शब्दों के लिए एक शब्द लिखिए।

1) जो चित्र बनाता है। - \_\_\_\_\_

2) जो खेती करता है। - \_\_\_\_\_

3) जो सेवा में काम करता हो। - \_\_\_\_\_

4) जो कपड़े धोता हो। - \_\_\_\_\_

5) जो गहने पहना हो। - \_\_\_\_\_

प्रश्न 18 चित्र की सहायता से वाक्य पूरा कीजिए।



1. एक \_\_\_\_\_ तालाब में नहा रहा है।

2. वह अपनी \_\_\_\_\_ से पानी फेंक रहा है।

3. \_\_\_\_\_ हाथी को देख रहे हैं।

4. वे हाथी को देखकर \_\_\_\_\_ हो रहे हैं।

सुलेख

जब रास्ते में चलते-चलते मंजिल का डयाल नहीं आए, तो आप वही रास्ते पर हैं।

\_\_\_\_\_

\_\_\_\_\_

\_\_\_\_\_

\_\_\_\_\_

\_\_\_\_\_

\_\_\_\_\_

\_\_\_\_\_

\_\_\_\_\_

\_\_\_\_\_

\_\_\_\_\_

प्रश्न 19 दिए गए अपठित गद्यांश को पढ़िए और प्रश्नों के उत्तर दीजिए।

मेरा नाम अंशु है। मैं अपने परिवार में सबसे छोटी हूँ। मुझे मेरी दादी माँ बहुत प्यार करती हैं। दादी माँ का नाम विमला है। वह अपने साथ-साथ अपने पूरे परिवार की ध्यान रखती हैं। हम सभी उनका कहना मानते हैं। आजकल वह मुझे लव-कुश की कहानियाँ सुना रही हैं।

पढ़े गए अनुच्छेद के आधार पर नीचे दिए गए प्रश्नों के उत्तर दीजिए -

क) अंशु को परिवार में सबसे अच्छा कौन लगता है?

ख) अंशु की दादी माँ का क्या नाम है?

ग) आजकल दादी अंशु को कौन-सी कहानियाँ सुना रही हैं?

घ) विलोम शब्द लिखो -

(अ) बड़ी -

(ब) आज -

ङ) रंग भरी -



सुलेख

कामयाब होने के लिए खुद पर विश्वास रखना पहला कदम है।

प्रश्न 20 निम्नलिखित प्रश्नों के उत्तर दीजिए।

क) कविता में ईश्वर को किसके समान माना गया है?

ख) "आबरा का डबरा" पाठ से हमें क्या सीख मिलती है?

ग) ईश्वर हमें क्या-क्या देते हैं?

घ) शिक्षिका ने कक्षा में जादू का खेल क्यों दिखाया?

ङ) "तुम ही हो माता" कविता से हमें क्या सीख मिलती है?

च) शिक्षिका ने जादू से कौन-कौन सी चीजें निकलीं?

छ) राहुल कौन सी कक्षा का छात्र है?

**सुलेख**

केवल आपकी लक्ष्य पाने की जिद ही आपको सफल बना सकती है।

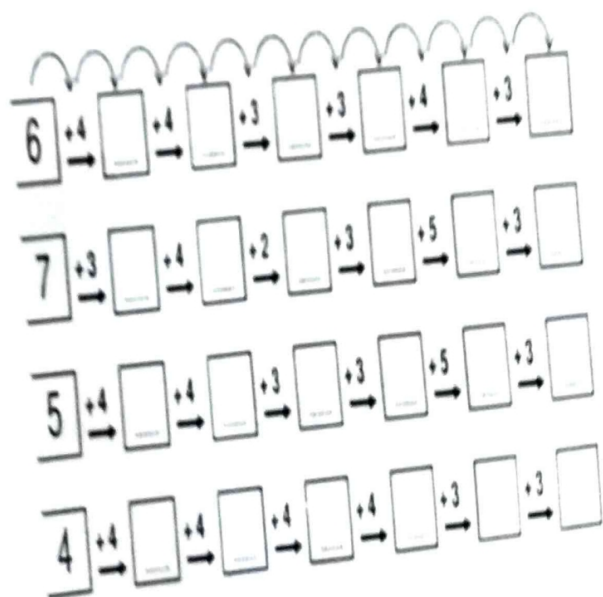
## Subject-Maths

Q.1 Solve the following:

1.	$\begin{array}{r} 11 \\ + 11 \\ \hline \end{array}$	2.	$\begin{array}{r} 52 \\ - 43 \\ \hline \end{array}$	3.	$\begin{array}{r} 26 \\ + 86 \\ \hline \end{array}$	4.	$\begin{array}{r} 93 \\ - 80 \\ \hline \end{array}$	5.	$\begin{array}{r} 49 \\ + 60 \\ \hline \end{array}$
6.	$\begin{array}{r} 91 \\ - 61 \\ \hline \end{array}$	7.	$\begin{array}{r} 69 \\ + 90 \\ \hline \end{array}$	8.	$\begin{array}{r} 41 \\ + 33 \\ \hline \end{array}$	9.	$\begin{array}{r} 85 \\ - 22 \\ \hline \end{array}$	10.	$\begin{array}{r} 93 \\ - 92 \\ \hline \end{array}$
11.	$\begin{array}{r} 70 \\ - 15 \\ \hline \end{array}$	12.	$\begin{array}{r} 51 \\ + 74 \\ \hline \end{array}$	13.	$\begin{array}{r} 70 \\ - 24 \\ \hline \end{array}$	14.	$\begin{array}{r} 68 \\ + 14 \\ \hline \end{array}$	15.	$\begin{array}{r} 69 \\ + 13 \\ \hline \end{array}$

- Write the table of 2.  
 $2 \times 1 = 2$

**Mental Math**  
Fill the boxes:-



Q.2 Do as directed:-

Skip count by 2

2		6		10		14		20
22				30			38	
	44					54		60
		66			72		78	
	84					96		100

Skip count by 10

10		30			70	90	
	120			150		180	200

Skip count by 5

5			20			40	45	50
		65			85			100
	110			125		140		
155			170		180			200

Mental Math

- Write the table of 3.

$$3 \times 1 = 3$$

20 Less	Number	400 More
	396	

300 Less	Number	50 More
	412	

300 Less	Number	20 More
	725	

20 Less	Number	300 More
	658	

200 Less	Number	40 More
	534	

400 Less	Number	20 More
	719	

Q.3 Write in expanded form:

1. 483 - \_\_\_\_\_

2. 507 - \_\_\_\_\_

3. 888 - \_\_\_\_\_

4. 965 - \_\_\_\_\_

5. 123 - \_\_\_\_\_

6. 90 - \_\_\_\_\_

Q.4 Write the numbers in figures :

1. 660 - \_\_\_\_\_

2. 500 - \_\_\_\_\_

3. 371 - \_\_\_\_\_

4. 999 - \_\_\_\_\_

5. 602 - \_\_\_\_\_

6. 092 - \_\_\_\_\_

7. 55 - \_\_\_\_\_

8. 436 - \_\_\_\_\_

• Write the table of 4

$4 \times 1 = 4$

Mental Math

1. A number is 186. Is it the numeral or the number name?  \_\_\_\_\_

2. A number is five hundred eighty-five. Is it the numeral or the number name?  \_\_\_\_\_

3. Fill in the boxes:

$205 = 200 + \square + \square$

$550 = 500 + \square + \square$

4. Fill in the boxes:

$128 = \square \text{ tens} + \square \text{ ones}$

$512 = \square \text{ tens} + \square \text{ ones}$

Q.5 Arrange the numbers in ascending order:

1. 563, 560, 689, 476, 500

---

2. 999, 90, 9, 99, 95

---

3. 247, 255, 101, 391, 110

---

4. 888, 660, 777, 490, 532

---

Q6. What come just before, after and between:

1. \_\_\_\_ 45

2. \_\_\_\_ 76

3. 54 \_\_\_\_ 56

4. 60 \_\_\_\_

5. 88 \_\_\_\_

6. 29 \_\_\_\_ 31

7. \_\_\_\_ 70

8. 39 \_\_\_\_

9. 67 comes in between \_\_\_\_ and \_\_\_\_


10. 49 comes after \_\_\_\_ but before \_\_\_\_

11. \_\_\_\_ is just after 85


12. \_\_\_\_ is just before 100

Write the table of 5:

Mental Math:

1	What is $6 - 1$ ?	
2	Write the next number 1, 2, 3, 4, 5, 6, ____	
3	Write One Hundred and Twenty in numbers.	
4	Which number is a multiple of 2 ? 17 7 9 4 23	
5	Draw the next shape in the sequence. 	
6	Which number comes after 5 ?	

Q7. Critical thinking:



Write the table of 6 :



Q9: Color as instructed:

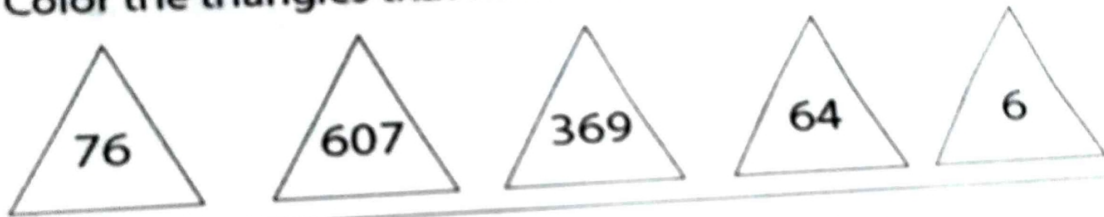
Color the circles that have a 3 in the tens place.



Color the squares that have a 5 in the hundreds place.



Color the triangles that have a 6 in the tens place.



Color the stars that have a 4 in the ones place.



Write the table of 8 :

Mental Math:

Calendar

- The day before Sunday is .....
- The day after Friday is .....
- There are ..... days in a year.
- Leap year comes after every ..... years
- February in a leap year has ..... days
- How many days are there in the first three months of the year? .....

Q 10 : Fill in the boxes with < , > or =

1. 245  367
2. 643  254
3. 736  324
4. 356  623
5. 563  562
6. 146  463
7. 815  190
8. 180  905

13. 387  468
14. 947  947
15. 258  285
16. 197  753
17. 367  758
18. 578  678
19. 357  358
20. 896  896

Write the table of 9 :

Mental Math :

1 2 3 4 5 6 7 8 9

+ + = ?

+ + = ?

+ + = ?

+ + = ?

+ + = ?

+ + = ?

Q 11. Solve the following word problems :

**Instructions:** Read each word problem. Fill in the boxes to show your working. Place your answer on the line.

Wilkindy has **89** hats. **54** of them are yellow.  
How many hats are red?

\_\_\_\_\_ hats

$$\begin{array}{r} \phantom{0} \\ \underline{\phantom{00}} \\ \phantom{00} \end{array}$$

I have **26** books in my library. I will buy **20**  
more books. How many books will I have then?

\_\_\_\_\_ books

+

$$\begin{array}{r} \phantom{0} \\ \underline{\phantom{00}} \\ \phantom{00} \end{array}$$

Brenise has **63** cookies. She ate **23**.  
How many cookies does she have now?

\_\_\_\_\_ cookies

-

$$\begin{array}{r} \phantom{0} \\ \underline{\phantom{00}} \\ \phantom{00} \end{array}$$

Jalayler has **78** candies. Janiah has **62**.  
How many more candies does Jalayler have  
than Janiah?

\_\_\_\_\_ candies

-

$$\begin{array}{r} \phantom{0} \\ \underline{\phantom{00}} \\ \phantom{00} \end{array}$$

Write the table of 10 :

Make a model on 2D and 3D shapes. (Roll No: 1 to 15)

Subject – E.V.S

Ques- Make a list of people who wear uniform for their work and people who do not need to wear uniforms for their work.


Ques- Paste pictures of different types of clothes on A-4 size sheet .

Ques- Write any five ways to take care of sense organs.

---

---

---

---

---

Ques-Make a flash cards on sources of water.

Ques- Write any five healthy eating habits.

---

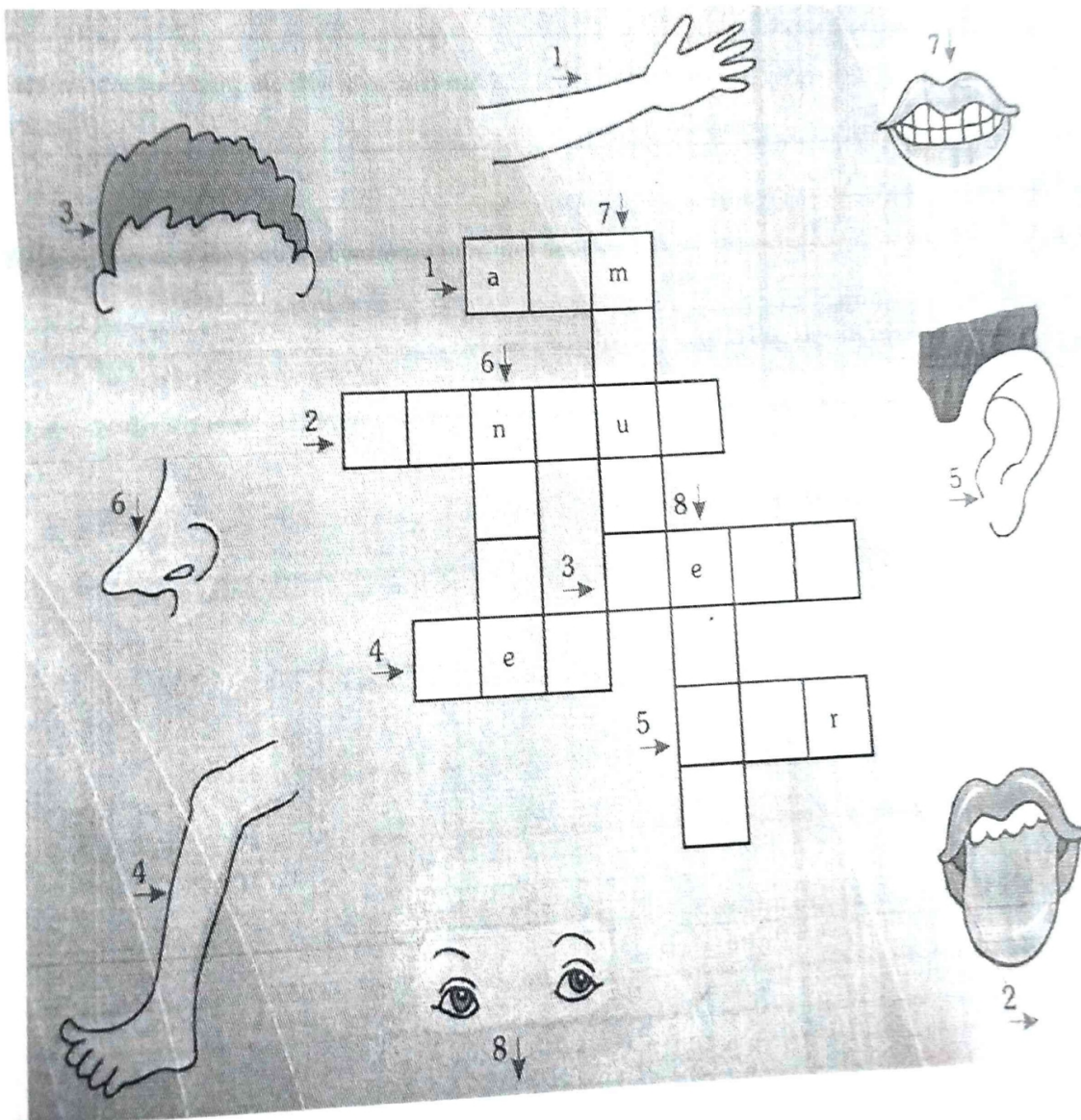
---

---

---

---

Ques-Using the pictures as clues, complete the crossword.



Ques-Answer the following questions .

1 Who treat us when we are sick?

---

2 Who stitches clothes for us?

---

3 Write any two activities that make water dirty?

---

---

4 Name any two animals that give us meat ?

---

---

5 Name any two clothes that we wear in winter season ?

---

Ques - Make a poster on the save tree. And write a few lines how to save the plants.

---

---

---

---

---


---

Ques -Complete this table about two of your friends and yourself.

	My self	First friend	Second friend
Name			
Colour of hair			
Colour of eyes			
Height			
Weight			
Number of teeth			
Favourite Game			

Ques Draw/ paste some pictures of plants and animal and write their name also in the given space.

Ques- Circle the food items we get from plants green colour and the food items we get from animals red colour.



Ques- Make a food pyramid model. ( roll no. 15-35).

Ques- Fill in the blanks:

1. We wear clothes to cover our \_\_\_\_\_.
2. Clothes protect us from \_\_\_\_\_ and \_\_\_\_\_.
3. We wear cotton clothes in \_\_\_\_\_ season.
4. Woollen clothes keep us \_\_\_\_\_.
5. Raincoats are worn in \_\_\_\_\_ season.

Ques - Draw and paste any five internal and external organ and write their name.

Ques - Write the name of two tourist place of India and paste the picture of it and write the few lines about.

---

---

---

---

---

---

Ques- Tick (✓) the correct answer:

1) We should keep our body:

- Dirty
- Clean
- Untidy

2) How many hands do we have?

- One
- Two
- Three

3) Which of these is a good habit?

- Not brushing teeth
- Washing hands before eating
- Throwing garbage anywhere

Ques -Collect various type of pictures of cloth (cotton, woollen, synthetic, silk) etc and make a collage.

Ques-Draw and Colou:-

1. A summer dress
2. A winter dress

Ques- Write 10 lines about yourself.

---

---

---

---

---

---

---

---

---

---

Ques- Write five good habits that you follow.

---

---

---

---

---

Ques-Answer in one word:

1. Clothes made from cotton are called \_\_\_\_\_.
2. Clothes made from wool are called \_\_\_\_\_.
3. A person who stitches clothes is called \_\_\_\_\_.
4. The organ used for thinking is \_\_\_\_\_.
5. We use our \_\_\_\_\_ to walk.
6. We use our \_\_\_\_\_ to write.

Ques-Draw and colour the petals in a flower according to your age.

Ques- Write Five lines how we take care of our sense organs.

---

---

---

---

---

Ques- Fill in the blanks:

1. We eat food to get \_\_\_\_\_.
2. Fruits and vegetables are \_\_\_\_\_ food.
3. We should drink \_\_\_\_\_ daily.
4. Junk food is not \_\_\_\_\_ for our health.
5. Milk makes our bones \_\_\_\_\_.
6. Food that is good for health is called \_\_\_\_\_.
7. We get milk from \_\_\_\_\_.
8. Green vegetables are rich in \_\_\_\_\_.

Ques- Paste pictures of healthy food and junk food.



## Computer

Ques1 Draw and colour a computer and label its parts.

- Monitor
- Keyboard
- Mouse
- CPU

Ques 2 Write any five uses of computer .

---

---

---

---

---

---

---

---

---

---

## Art

(1) Do page no. 11,18,26,28,38

(2) Make a bird wall hanging with easy DIY.

## GK

Q1. Write daily news headlines with date and name of the newspaper.

Q2. Write the name of Indian states and their capital.