




NORTH-EX[®] PUBLIC SCHOOL — DELHI —



Established 1999 | CBSE Curriculum | Holistic Development



SUMMER HOLIDAY HOMEWORK

Session 2026-2027



Student Name : _____



Class : _____



Section : _____



Class Teacher : _____



Explore, Learn & Grow this Summer!



OUR THREE BRANCHES - ROHINI, DELHI

SECTOR-38, ROHINI



Spacious campus with modern infrastructure & senior secondary facilities.

SECTOR-3, ROHINI



Recognised branch with strong academic foundation & disciplined environment.

SECTOR-8, ROHINI



Senior Secondary CBSE affiliated campus with advanced learning spaces.

OUR FACILITIES



SMART
DIGITAL
CLASSROOMS



WELL EQUIPPED
SCIENCE
LABS



COMPUTER &
IT LABS



LIBRARY &
RESOURCE
CENTRE



SPORTS &
OUTDOOR
ACTIVITIES



CO-CURRICULAR
ACTIVITIES
(ART, MUSIC, DANCE)



SAFE & SECURE
CAMPUS
(CCTV)




Complete your work neatly and submit on time.



Ques 3. a) Look at the Picture & Name (Animal).

1. What animal do you see? _____
2. Write the noun for this animal. _____
3. Is it a person, place, animal, or thing? _____



b) Write these nouns in correct groups.

- Dog, school, book, teacher, Geeta, Hospital, cat, Apple,

Animal- _____ Place- _____

Thing- _____ People- _____

Ques 4. Circle the **subject** and underline the **predicate**.

1. The cat is sleeping on the sofa.
2. My brother plays cricket.
3. The sun shines brightly.
4. Birds are flying in the sky.
5. Tim and Sam played with their toys.
6. A fast airplane flew over the clouds.

Ques 5. Collect all the nouns in sentences.

1. The bird flew across the forest. _____
2. I packed a compass and a notebook. _____
3. I saw rabbit eating carrots. _____
4. She found a map hidden in the drawer. _____
5. The monkey ate a yellow banana. _____
6. My sister lives in a big city. _____
7. The farmer drove his tractor through the field. _____

Cursive writing

High hills and leafy valleys keep life peaceful.

Ques 6. Fill in the blanks with am, is or are.

- a) The birds _____ flying over the rooftops.
- b) My father _____ cooking dinner.
- c) I _____ holding my superhero badge.
- d) I _____ very happy today.
- e) The apples _____ sweet and crunchy.
- f) My father _____ a doctor.
- g) You _____ my best friend.

Ques 7. Fill in the blanks with the (-ING) form of the verbs given in the brackets and fill in the blanks.

- a) The birds are _____ in the sky. (fly)
- b) I am _____ a delicious apple. (eat)
- c) My mother is _____ a tasty dinner. (cook)
- d) The children are _____ in the park. (play)
- e) Rohan is _____ a letter to his friend. (write)
- f) The dog is _____ at the stranger. (bark)
- g) We are _____ to the music. (listen)
- h) The sun is _____ brightly today. (shine)

Ques 8. Write the opposite words.

- 1. Polite _____
- 2. Careful _____
- 3. Safe _____
- 4. Finish _____
- 5. Honest _____
- 6. Slow _____
- 7. Cold. _____

Cursive writing

The playful puppy quickly grabbed the yellow slipper.

Ques 9. Read the passage and the following questions carefully.

Lily found a tiny, golden key hidden under a leaf in her backyard. She searched until she found a small wooden door covered in ivy. When she turned the key, the door creaked open to reveal a magical garden where everything was unusual. In this garden, the grass was not green; it was a soft shade of blue. The flowers didn't just grow; they hummed sweet tunes like little bees. In the center of the garden stood a tree that grew silver bubbles instead of fruit. Lily walked to the bubble tree and touched a silver bubble. It popped, and a beautiful smell of fresh strawberries filled the air. She realized that in this garden, you didn't eat the fruit—you smelled it! Suddenly, a tiny purple rabbit hopped by and said, "Don't forget to water the singing roses before you leave." Lily smiled, picked up a crystal watering can, and began her magical chores.

Exercises

Ques 1. Fill in the blanks:

1. Lily found a golden key hidden under a _____.
2. The grass in the secret garden was _____ in colour.
3. The tree grew silver _____ instead of fruit.
4. To water the roses, Lily used a _____ watering can.

Ques 2. Answer the following questions:

1. How did Lily get into the secret garden?

2. What was special about the flowers in this garden?

3. What happened when Lily popped a silver bubble?

4. What colour was the rabbit that spoke to Lily?

Ques 3. Find the opposite of these words in the passage:

1. Huge: _____
2. Ordinary: _____
3. Closed: _____

Cursive writing

The quick brown fox jumps over the lazy dog.

Ques 10. Write the synonyms.

1. Big — _____
2. Happy — _____
3. Quick — _____
4. Tiny — _____
5. Start — _____
6. Ill — _____
7. Smart — _____

Ques 11. Fill in the blanks with a, an, or the.

1. I saw _____ big elephant at the zoo.
2. _____ sun is shining brightly in the sky.
3. My mother bought me _____ orange and _____ banana.
4. _____ Taj Mahal is a beautiful monument.
5. Can you pass me _____ blue pen on the table?
6. I have _____ umbrella to use when it rains.

Ques 12. Fill in the blanks with He, She, It, or They.

1. Riya is my best friend. _____ loves to paint.
2. My father is a doctor. _____ works in a hospital.
3. The kids are happy. _____ are eating cake.
4. This is a red ball. _____ bounces very high.
5. Rohan and I are brothers. _____ play together.

Cursive writing

Our weaver was very worried about the wooden wool.

Ques 13. Fill in the blanks with appropriate feminine nouns.

- i) The prince married beautiful _____.
- j) My _____ bakes delicious cookies.
- k) The rooster crowed while the _____ laid eggs.
- l) We saw a lawyer and a _____ resting.
- m) His uncle came but his _____ did not.

Ques 14. Reference to the context.

Read the lines from the poem and answer the following questions.

I bought a pretty paper kite
And flew it yesterday,
But then, you know, the branches of
A tree came in the way.

1. What did the speaker buy?

2. When did the speaker fly the kite?

3. What's stop the kite from flying freely?

Cursive writing

Smooth seas do not make skillful sailors.


Ques 20. Answer the following question.

1. What were the two special features of Baba yaga's hut?

2. What does the boy say about himself at the end of the poem (paper kite)?

3. How did the mice help the elephants escape the trappers?

Ques 21. Picture composition.



MATHS

Ques 1. Write the following numbers in words:

1. 395 = _____
2. 608 = _____
3. 1,240 = _____
4. 4,007 = _____
5. 8,999 = _____
6. 4679 = _____
7. 2464 = _____

Ques 2. Write in numbers.

1. Seven hundred thirty-two = _____
2. Five hundred fifteen = _____
3. Two thousand, six hundred eighty-one = _____
4. Nine thousand, forty-three = _____
5. One thousand, one hundred one = _____
6. Four hundred eighty-two = _____
7. One thousand fifty-seven = _____

Ques 3. There were 800 books in the library. Students borrowed 145 books on Monday. How many books are left on the shelves?

Mental Maths

Ques. Can you do these right now without a pencil?

1. What is double 14? _____
2. What is 150 plus 30? _____
3. How many tens are in 140? _____
4. If I have 3 groups of 6, how many do I have in total? _____
5. What do you need to add to 75 to make 100? _____
6. What is double 9? _____

Ques 4. Write the numerals.

1. 4 hundreds + 2 tens + 9 ones = _____
2. 7 thousands + 0 hundreds + 5 tens + 3 ones = _____
3. 6 thousands + 8 ones = _____
4. 4 thousands + 5 hundred + 4 ones = _____
5. 8 thousands + 5 hundreds + 7 tens + 1 ones = _____
6. 1 thousands + 5 hundreds + 8 tens + 2 ones = _____
7. 4 thousands + 8 tens + 1 ones = _____
8. 5 thousands + 3 hundreds + 5 tens + 8 ones = _____

Ques 5 . Arrange these groups of numbers from smallest to largest.

- 145, 120, 189, 105

Answer: _____

- 678, 876, 768, 687

Answer: _____

- 303, 330, 313, 301

Answer: _____

- 1,200, 1,020, 1,220, 1,002

Answer: _____

Ques 6. One pencil box costs ₹15. How much will 5 pencil boxes cost?

Write the table of 2 and 3

7. Place the correct sign in the box (>, < or =).

- 612 [] 612
- 1,200 [] 1,020
- 4,567 [] 4,567
- 3,999 [] 4,000
- 7,821 [] 7,812
- 345 [] 354
- 809 [] 799
- 121 [] 211
- 550 [] 505
- 9,001 [] 9,010

Ques 8. Activity : My Family Number Chart (Place Value)

Task: Collect the birth years of 4 family members (e.g., 1985, 2017).

Write each year in words (Number Names).

Write each year in Expanded Form (e.g., 2,000 + 0 + 10 + 7).

Identify which year is the "Greatest" and which is the "Smallest."

Ques 9. Fill in the Blanks

1. In the number 458, the face value of 5 is _____.
2. In the number 7,239, the place value of 7 is _____.
3. The face value of a digit is always the _____ itself.
4. The place value of 0 is always _____, no matter where it is in the number.
5. In 682, the digit 6 is at the _____ place.

MENTAL MATHS

Ques. Try to solve these in your head as fast as you can:

1. What is $50 + 80 =$ _____
2. What is $100 - 35 =$ _____
3. Double the number 14 = _____
4. $5 \times 7 =$ _____
5. $3 \times 8 =$ _____

10. Give one word answer.

1. There are _____ hours in a full day.
2. The long hand takes _____ minutes to move from one number to the next .
3. If today is Monday, what day was it yesterday? _____
4. What is the 5th day of the week? _____
5. Which month comes after June? _____
6. How many months have 31 days? _____
7. Which month is the shortest month of the year? _____

Ques 11. On Saturday, the shop sold 345 vanilla cones and 289 chocolate cones. How many cones did they sell in total?

Ques 12. Estimate the sum by rounding off the numbers to their nearest tens. Also, find the actual sum.

335 and 543

Estimated sum

Actual sum

5676 and 6780

Estimated sum

Actual sum

MENTAL MATHS

- How many wheels are on 4 cars? _____
- What is 10 more than 295? _____
- If you have 3 tens and 14 ones, what number do you have? _____
- What is the value of 5 in the number 528? _____
- How many hundreds are in 1200? _____
- If you have 2 hundreds, 7 tens and 9 ones, what number do you have? _____

13. There are 30 students in a class. The teacher wants them to sit in 3 equal rows. How many students will be in each row?

Ques 14. **ACTIVITY** :- The Little Shopkeeper

Instructions: Imagine you are running your own toy store! Follow the steps below and record your work neatly in a scrapbook.

The Question: **Step 1:** Set Your Prices Pick 5 of your favourite toys and give them a name and a price between ₹50 and ₹200. Write them in a table like this:

Toy Name	Price (in ₹)
1. Robot	₹125
2. _____	₹ _____
3. _____	₹ _____
4. _____	₹ _____
5. _____	₹ _____

Step 2: The Sale (Addition)

A customer (your family member) comes to your shop and buys two toys.
Write the names of the two toys chosen: _____ and _____.

Calculate the Total Bill: Show the addition sum at the given space using the vertical column method (Hundreds, Tens, Ones).

Step 3: Making Change (Subtraction)

The customer hands you a ₹500 note to pay for the two toys.

Calculate the Balance: Subtract the Total Bill from ₹500 to find out how much money you must return to the customer.
Show the subtraction with "borrowing" clearly at the given the scrap book.

Ques15. Place Value Slider: Create a slider using paper strips to show thousands, hundreds, tens, and ones. (Roll no – 1 to 20)

MENTAL MATHS

Bonus Riddle

- ❖ I am a number. If you multiply me by 2, I become 20.
If you add 5 to me, I become 15. What number am I? _____

Hint: Think about the "Half of" rule for the first part of the riddle!

40
40
27

15. Fill in the missing numbers to complete the sequence:

1. 2, 4, 6, _____, _____, 12
2. 5, 10, 15, _____, _____, 30
3. 100, 90, 80, _____, _____, 50
4. 10, 12, 14, _____, _____, 20
5. 15, 20, 25, _____, _____, 40
6. 10, _____, _____, 40, 50

Ques 16. Arrange in columns and add the following sums.

- $4,521 + 5,999$
- $2,341 + 1,452$
- $5,670 + 2,128$
- $4,892 + 3,509$

Ques 17. Arrange in columns and subtract the following .

- $458 - 214$
- $675 - 341$
- $500 - 250$
- $841 - 195$

MENTAL MATHS

The Big Number Challenge

These use 3-digit numbers and trickier patterns. Take a deep breath—you've got this!

- 1) The Century Plus: $340 + 260 =$ _____
- 2) The Double-Double: $15 \times 4 =$ _____
- 3) The Near-Miss: $500 - 199 =$ _____
- 4) The Trio: $12 + 13 + 14 =$ _____
- 5) The Half-Century: $450 \div 5 =$ _____

18. Solve the math on both sides, then put the correct symbol in the given space (>, <, or =).

1. $250 + 50$ _____ $400 - 100$
2. $1,200 + 300$ _____ $2,000 - 400$
3. $600 - 150$ _____ $300 + 200$
4. $45 + 45$ _____ $100 - 10$
5. $450 + 50$ _____ $600 - 120$
6. 10×2 _____ $10 + 10 + 10$
7. $1,250 + 250$ _____ $2,000 - 450$
8. $800 - 350$ _____ $400 + 100$
9. $1,000 + 500$ _____ $2,500 - 900$
10. $340 + 120$ _____ $500 - 30$

Ques 19. Use your addition and subtraction skills to solve these stories.

The Fruit Seller: A fruit seller had 640 apples. He sold 275 in the morning and 150 in the afternoon.

1. How many apples did he sell in total? _____
2. How many apples does he have left? _____

Ques 20 There were 230 birds in a park. 110 more birds flew in, but then 150 birds flew away to a different forest.

- A. How many birds were in the park before the 150 flew away? _____
- B. How many birds are in the park now? _____

Ques 21. The library had 850 books. On Monday, they received 150 new books. On Tuesday, students borrowed 200 books.

- A. How many books did the library have after the new ones arrived? _____
- B. How many books are left in the library now? _____

Ques 22. You have 18 eggs. Each carton holds 6 eggs. How many cartons do you need?

Ques. Write the table of 6 and 7.

हिन्दी

प्रश्न 1. दिए गए शब्दों के पर्यायवाची शब्द लिखिए।

1. सूरज - _____
2. चाँद - _____
3. पानी - _____
4. आकाश - _____
5. हवा - _____
6. बादल - _____

प्रश्न 2. दिए गए शब्दों के विलोम शब्द लिखिए।

- ❖ उजाला - _____
- ❖ हल्का - _____
- ❖ पक्का - _____
- ❖ मीठा - _____
- ❖ दोस्त - _____
- ❖ आकाश - _____

प्रश्न 3. "मेरी गर्मी की छुट्टियाँ" विषय पर 5-10 पंक्तियाँ लिखें।

सुलेख

परिश्रम ही सफलता की कुंजी है।

प्रश्न 4. प्रकृति से दोस्ती (Nature Scrapbook)

गतिविधि: अपने बगीचे या पार्क से 5 अलग-अलग तरह की गिरती हुई पतियाँ इकट्ठा करें।

क्या करना है: उन्हें अपनी स्कैपबुक में चिपकाएँ और उनके नीचे पेड़ का नाम हिंदी में लिखें (जैसे: नीम, आम, पीपल)।

प्रश्न 5. मेरी डायरी (Emoji Diary)

गतिविधि: रोज़ाना सिर्फ एक वाक्य लिखें कि आज आपको कैसा लगा।

क्या करना है: वाक्य के साथ एक इमोजी (Emoji) बनाएँ। जैसे: "आज मैंने आम खाया। 😊"

प्रश्न 6. दिए गए शब्दों के समान तुक वाले शब्द लिखिए।

शब्द	समान तुक वाले शब्द
1) आम -	_____
2) पानी -	_____
3) सच्चा -	_____
4) माला -	_____
5) मछली -	_____
6) लकड़ी -	_____

प्रश्न 7. दिए गए से संयुक्ताक्षरों से दो - दो शब्द बनाइए।

1.क्ष : _____

2.त्र : _____

3.ज : _____

4.श्र : _____

सुलेख

हमें सबकी मदद करनी चाहिए।

प्रश्न 8. निम्नलिखित शब्दों से वाक्य बनाइए।

- > दोस्त - _____
- > देश - _____
- > विश्व - _____
- > स्वादिष्ट - _____
- > मदद - _____

प्रश्न 9. अनेक शब्दों के लिए एक शब्द लिखिए।

- ❖ जो पढ़ाता हो - _____
- ❖ जो बीमार का इलाज करे - _____
- ❖ जो खेती करता हो - _____
- ❖ जो चित्र बनाता हो - _____
- ❖ जो मिट्टी के बर्तन बनाता हो - _____
- ❖ जो कपड़े धोता हो - _____
- ❖ जिसे डर न लगे - _____

प्रश्न 10. किसने, किससे कहा ?

वाक्य	किसने	किससे
1. चिड़िया को पिंजरे में बंद मत करो	_____	_____
2. बड़ा आया चिड़िया वाला	_____	_____
3. क्यों बधाई राम कुछ और चाहते हो	_____	_____
4. मुझे क्षमा करो	_____	_____

सुलेख

सत्य की हमेशा जीत होती है।

11. दिए गए द्वित्व व्यंजनों से दो - दो शब्द बनाइए।

क - _____ च - _____
ख - _____ छ - _____
ब - _____ म - _____

प्रश्न 12. निम्नलिखित अपठित गद्यांश को पढ़कर दिए गए प्रश्नों के सही उत्तर लिखिए।

एक जंगल में भोलू नाम का एक हाथी रहता था। भोलू बहुत ही दयालु और मिलनसार था। वह जंगल के सभी जानवरों की मदद करता था। एक दिन जंगल में बहुत तेज गर्मी थी और सभी नदी-तालाब सूख गए थे। छोटे जानवर प्यास से व्याकुल थे।

भोलू हाथी को याद आया कि पहाड़ के पीछे एक गहरी गुफा है, जहाँ एक पुराना झरना बहता है। वह सभी जानवरों को अपने साथ लेकर वहाँ गया। ठंडे पानी को देखकर सभी जानवर बहुत खुश हुए और सबने जी भरकर पानी पिया। सभी जानवरों ने भोलू को उसकी समझदारी के लिए धन्यवाद दिया। उस दिन से भोलू पूरे जंगल का सबसे प्यारा दोस्त बन गया।

अभ्यास प्रश्न (नीचे दिए गए प्रश्नों के उत्तर दें):

1. हाथी का नाम क्या था?

2. जंगल के जानवर क्यों परेशान थे?

3. भोलू जानवरों को कहाँ लेकर गया?

4. इस कहानी से हमें क्या सीख मिलती है?

5. विपरीत शब्द (Opposite words) लिखें:

• दोस्त - _____

• गर्मी - _____

सुलेख

जल ही जीवन का आधार है।

13. नीचे दिए गए कार्यों के सामने भाषा का रूप (मौखिक/लिखित) लिखिए:

- (क) नानी का कहानी सुनाना — _____
- (ख) परीक्षा में उत्तर लिखना — _____
- (ग) रेडियो पर समाचार सुनना — _____
- (घ) समाचार पत्र पढ़ना — _____
- (ङ) मोबाइल पर टाइप करके मैसेज भेजना — _____

प्रश्न 14. अनुच्छेद लेखन (परोपकार)।

सुलेख

विद्या सबसे बड़ा धन है।

15. पत्र लेखन - अपने मित्र को "शिक्षा ही असली धन है" का महत्व बताते हुए पत्र लिखें।

सुलेख

स्वच्छता अपनाना बहुत ज़रूरी है।

ENVIRONMENTAL SCIENCE

Ques-1 Fill in the blanks.

- Brain is located inside the _____.
- our teeth help us to _____ food.
- Brothers or sisters are called _____.
- The _____ Kabaddi World Cup was first started in 2004.
- _____ is a harvest festival.

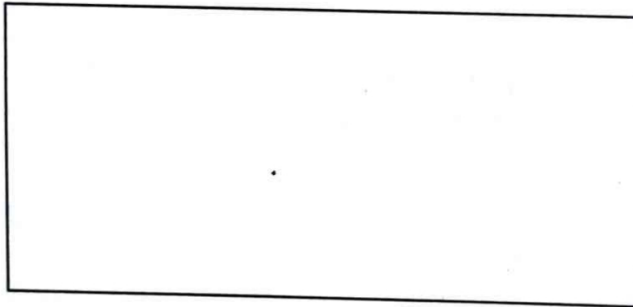
Ques-2 Strike out the wrong words to complete this sentence.

- Germes are(tiny/ big) living things.
- We learn(many/ no) new things from our elders at home.
- (Onam/ pongal)is a festival of Kerala.
- When we get tired we like to (study/ relax).

Ques-3 State whether true or false.

- Playing chess is a form of recreation. _____
- We worship goddess Lakshmi on holi. _____
- Our parents and their siblings from one generation. _____
- The brain is located inside the head. _____


Ques-4 Draw your favourite sports and write 5 to 6 lines about it.



Ques-5 Give one word answer.

- "I use this to see colors and read books." → _____
- "I help you smell flowers." → _____
- "You use me to hear music." → _____
- "I help you taste food." → _____
- "I help you feel hot and cold" → _____

Ques-7 Label some external organs.



Ques-8 Recognize the organs and write at the given space.

[Eyes, Heart, Nose, Brain, Hands, Stomach, Legs, Lungs]

External Organs: _____

Internal Organs: _____

Ques-9 Make a chart on your favourite festival.

Ques10 Answer the following question.


1. Why do we celebrate independence day?

2. How do exercise and outdoor games help us?


3. Give the difference between a nuclear family and joint family?

Ques11 Collect picture related to the Independence Day and Republic Day and paste them on A3 size sheet.

Ques12. Write a biography on your favourite sports person and paste a picture of it.



Ques13. Write six line on your favourite festival and make a picture of it.



Ques-14 write a timetable of your healthy-day.

Ques15 complete the crossword with the help of clues.


Clues

Across

1. These are very sensitive to touch
4. It controls the function of all organs.

Down

1. It tells the butter is soft.
2. It pumps blood to all parts of the body.
5. It is a bony box which encloses the brain.



Ques 16. Read the habits below. Write "H" for Healthy and "U" for Unhealthy:

1. Watching TV for 5 hours every day.
2. Playing outdoors in the park.
3. Biting your nails.
4. Eating an apple every day.
5. Keeping your hair clean and combed.

Ques 17. Riddles - "Who Am I?"

- i. I am the festival where people play with colours and forget their enmities.
Answer: _____
- ii. I am the festival where sisters tie a sacred thread on their brother's wrist.
Answer: _____
- iii. I am the festival of light that marks the victory of good over evil.
Answer: _____
- iv. I have a board with 64 squares, and I have a King and a Queen. Who am I?
Answer: _____
- v. I am played with a bat and a ball. If I hit the ball over the boundary, I get 6 runs. Who am I?
Answer: _____
- vi. I am a game where you use a striker to hit coins into four corners. Who am I?
Answer: _____

Ques 18. Circle the 5 healthy food items hidden in this row:

APPLEXBANANAMILKZCARROTYEGGS

- _____
- _____
- _____
- _____
- _____

Ques 19. Fill in the Blanks

Energy, nuclear, Germs, Exercise, joint, Straight

- Washing hands with soap removes invisible _____.
- A small family with parents and one or two children is a _____ family.
- Running and jumping are great forms of _____.
- Healthy food gives us the _____ to play and study.
- A large family where grandparents, uncles, and cousins live together is a _____ family.
- We should always sit and stand with our back _____.

Ques 20. Write the name of the game based on the tools used:

- 1) A shuttlecock and a racket: _____
- 2) A ball, a bat, and three wickets: _____
- 3) A big orange ball and a high hoop: _____
- 4) A black and white ball kicked by feet: _____
- 5) A board with a striker and coins: _____

Ques 21. Sort these games into the correct box:

[Kho-Kho, Minecraft, Gilli-Danda, Tennis, Hide & Seek, Robotics, Seven Stones (Pitthu), Tablet

Old Games	Modern Games

Visual Art

- (1) Do page no. 13 ,15,22,26,33 in book .
- (2) Make a party props with paper and decorate it beautifully.

Computer

❖ Make a computer scrapbook ..

Paste picture of...

- MONITER
- KEYBOARD
- MOUSE
- PRINTER

Decorate with colours and write one line about each

General Knowledge

- 8 to 10 lines on Sachin Tendulkar with picture.
- Write daily one important news headline with paper cutting.